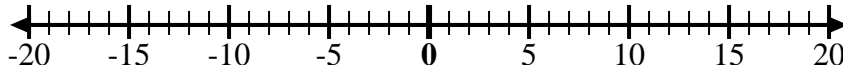


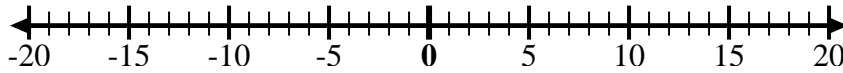


Usa le linee dei numeri per mostrare ogni espressione e risolvere.

Es) Inizia da 0 e aggiungi -2



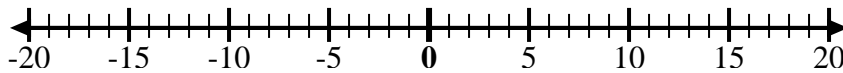
1) Inizia da 0 e aggiungi -5



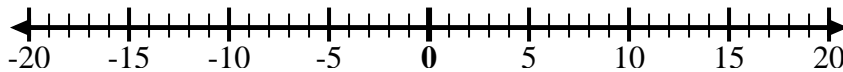
2) Inizia da 0 e aggiungi 7



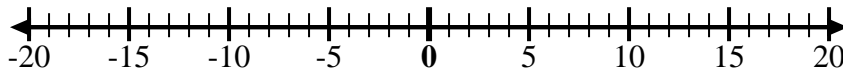
3) Inizia da -6 e aggiungi 12



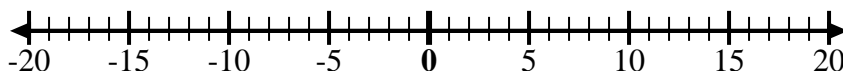
4) Inizia da -2 e aggiungi -2



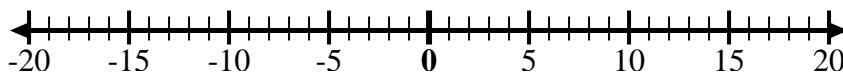
5) Inizia da 2 e aggiungi -8



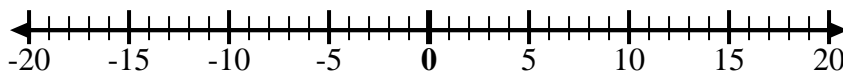
6) Inizia da 3 e aggiungi -11



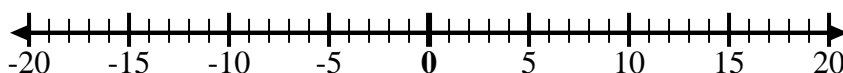
7) Inizia da -7 e aggiungi 16



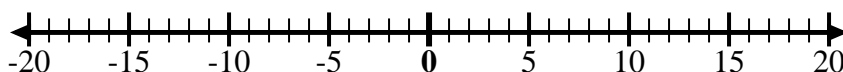
8) Inizia da -9 e aggiungi 7



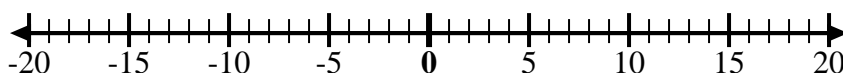
9) Inizia da -8 e aggiungi 3



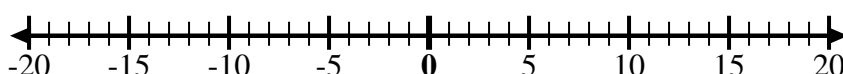
10) Inizia da 5 e aggiungi -15



11) Inizia da -8 e aggiungi 4



12) Inizia da 5 e aggiungi -6



Risposte

Es. $0 + -2 = -2$

1. _____

2. _____

3. _____

4. _____

5. _____

6. _____

7. _____

8. _____

9. _____

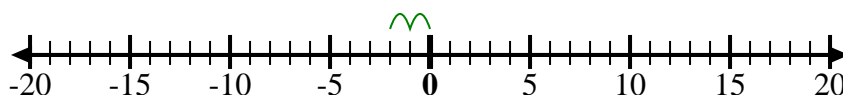
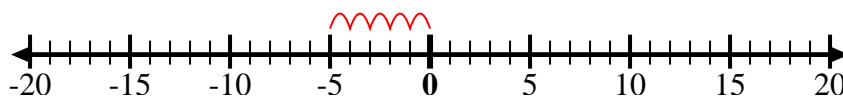
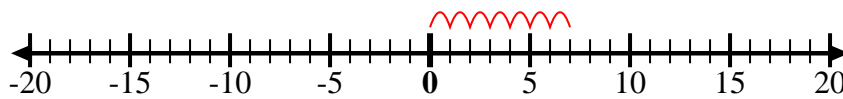
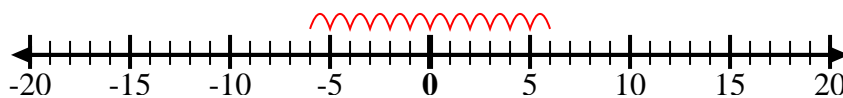
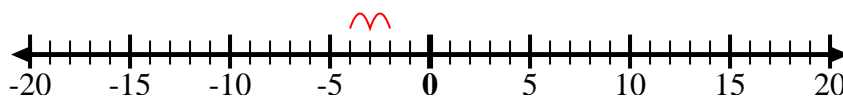
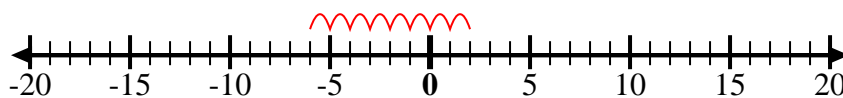
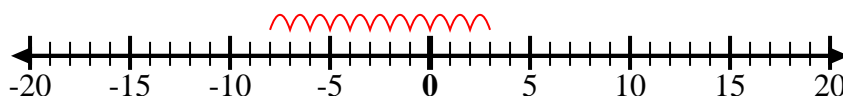
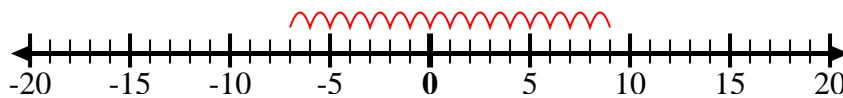
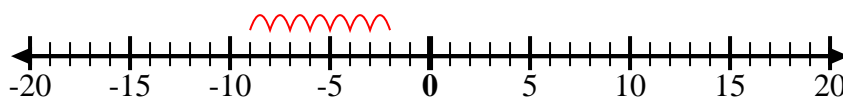
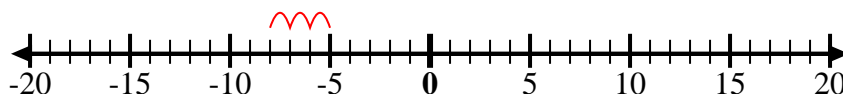
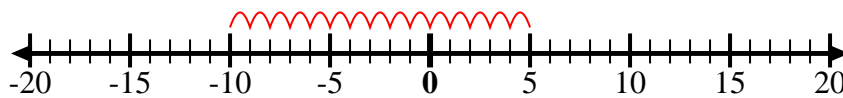
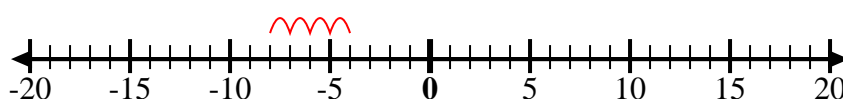
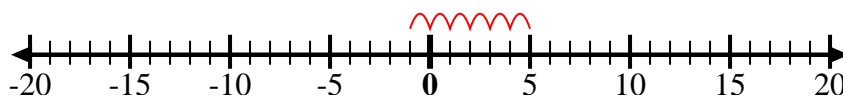
10. _____

11. _____

12. _____



Usa le linee dei numeri per mostrare ogni espressione e risolvere.

Es) Inizia da 0 e
aggiungi -21) Inizia da 0 e
aggiungi -52) Inizia da 0 e
aggiungi 73) Inizia da -6 e
aggiungi 124) Inizia da -2 e
aggiungi -25) Inizia da 2 e
aggiungi -86) Inizia da 3 e
aggiungi -117) Inizia da -7 e
aggiungi 168) Inizia da -9 e
aggiungi 79) Inizia da -8 e
aggiungi 310) Inizia da 5 e
aggiungi -1511) Inizia da -8 e
aggiungi 412) Inizia da 5 e
aggiungi -6**Risposte**

Es. $0 + -2 = -2$

1. $0 + -5 = -5$

2. $0 + 7 = 7$

3. $-6 + 12 = 6$

4. $-2 + -2 = -4$

5. $2 + -8 = -6$

6. $3 + -11 = -8$

7. $-7 + 16 = 9$

8. $-9 + 7 = -2$

9. $-8 + 3 = -5$

10. $5 + -15 = -10$

11. $-8 + 4 = -4$

12. $5 + -6 = -1$