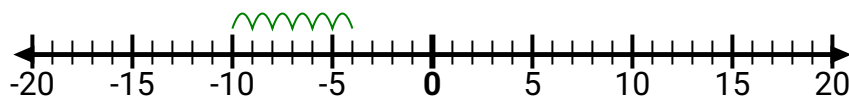
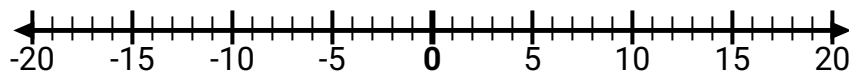
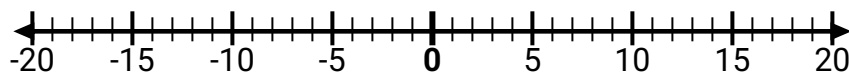




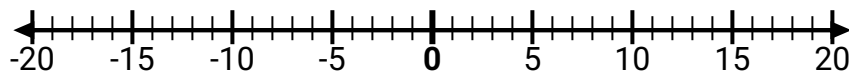
Usa le linee dei numeri per mostrare ogni espressione e risolvere.

RisposteEs) Inizia da -10 e
aggiungi 6Es. $-10 + 6 = -4$ 1) Inizia da -8 e
aggiungi 18

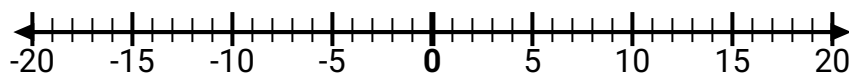
1. _____

2) Inizia da -3 e
aggiungi -5

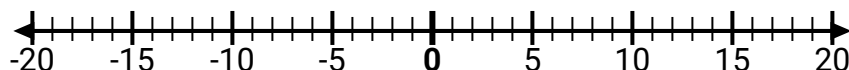
2. _____

3) Inizia da 3 e
aggiungi -10

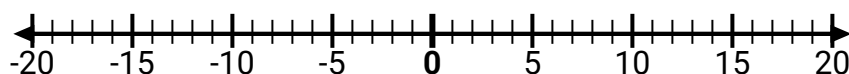
3. _____

4) Inizia da 6 e
aggiungi -4

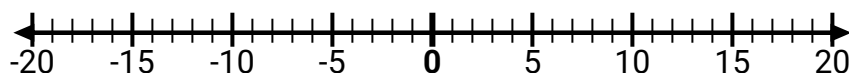
4. _____

5) Inizia da -8 e
aggiungi 3

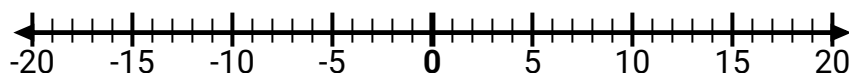
5. _____

6) Inizia da 0 e
aggiungi -9

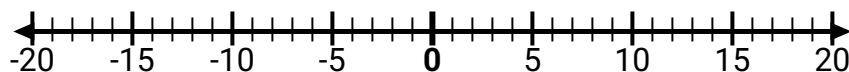
6. _____

7) Inizia da -7 e
aggiungi 5

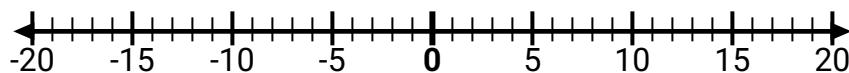
7. _____

8) Inizia da 9 e
aggiungi -13

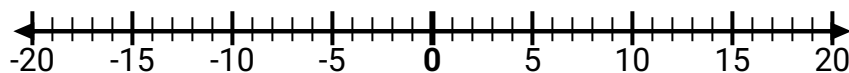
8. _____

9) Inizia da -5 e
aggiungi -2

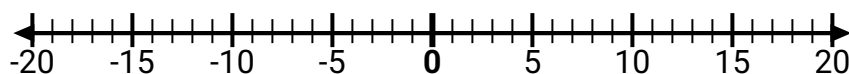
9. _____

10) Inizia da 5 e
aggiungi -14

10. _____

11) Inizia da -1 e
aggiungi -5

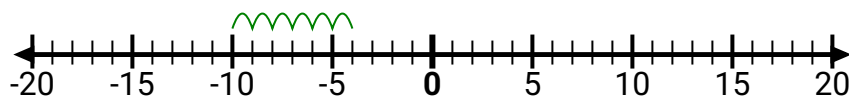
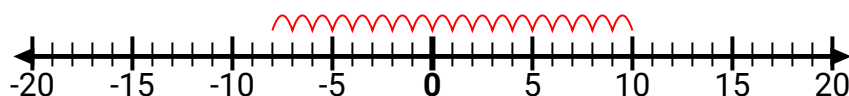
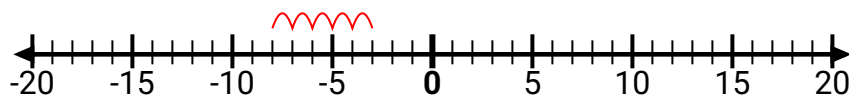
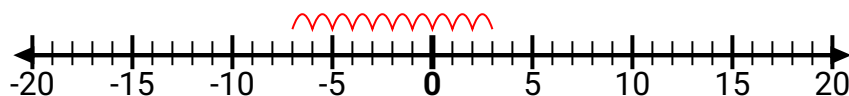
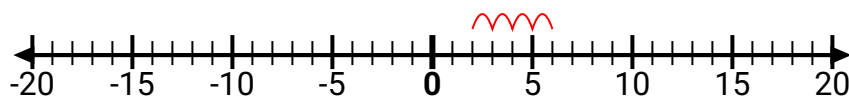
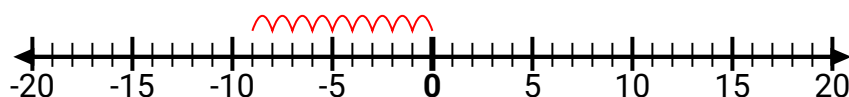
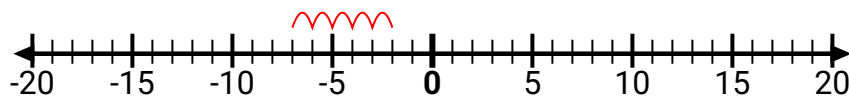
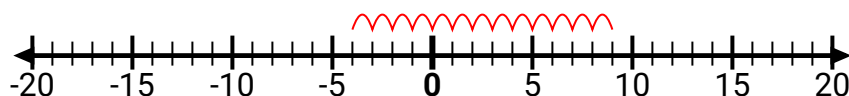
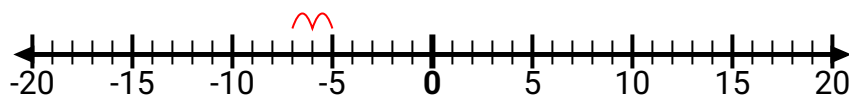
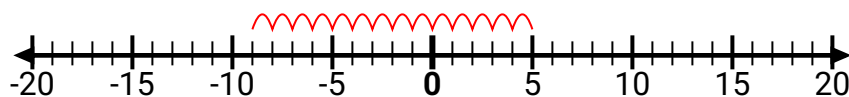
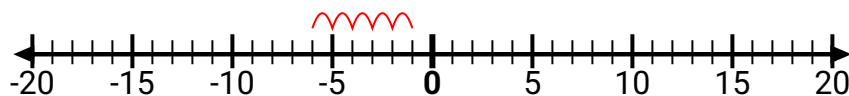
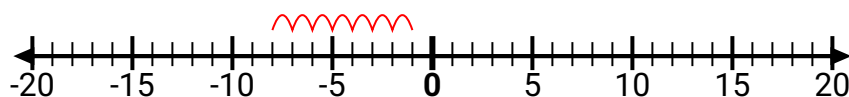
11. _____

12) Inizia da -1 e
aggiungi -7

12. _____



Usa le linee dei numeri per mostrare ogni espressione e risolvere.

Es) Inizia da -10 e
aggiungi 61) Inizia da -8 e
aggiungi 182) Inizia da -3 e
aggiungi -53) Inizia da 3 e
aggiungi -104) Inizia da 6 e
aggiungi -45) Inizia da -8 e
aggiungi 36) Inizia da 0 e
aggiungi -97) Inizia da -7 e
aggiungi 58) Inizia da 9 e
aggiungi -139) Inizia da -5 e
aggiungi -210) Inizia da 5 e
aggiungi -1411) Inizia da -1 e
aggiungi -512) Inizia da -1 e
aggiungi -7**Risposte**

Es. $-10 + 6 = -4$

1. $-8 + 18 = 10$

2. $-3 + -5 = -8$

3. $3 + -10 = -7$

4. $6 + -4 = 2$

5. $-8 + 3 = -5$

6. $0 + -9 = -9$

7. $-7 + 5 = -2$

8. $9 + -13 = -4$

9. $-5 + -2 = -7$

10. $5 + -14 = -9$

11. $-1 + -5 = -6$

12. $-1 + -7 = -8$