




Risolvi ogni problema.


**Risposte**

1) Quale lettera indica meglio -29?




1. \_\_\_\_\_

2) Quale lettera indica meglio -120?




2. \_\_\_\_\_

3) Quale lettera indica meglio -118?




3. \_\_\_\_\_

4) Quale lettera indica meglio -14?



4. \_\_\_\_\_

5) Quale lettera indica meglio -109?



5. \_\_\_\_\_

6) Quale lettera indica meglio -28?




6. \_\_\_\_\_

7) Quale lettera indica meglio -21?




7. \_\_\_\_\_

8) Quale lettera indica meglio -14?




8. \_\_\_\_\_

9) Quale lettera indica meglio -13?



9. \_\_\_\_\_

10) Quale lettera indica meglio -114?



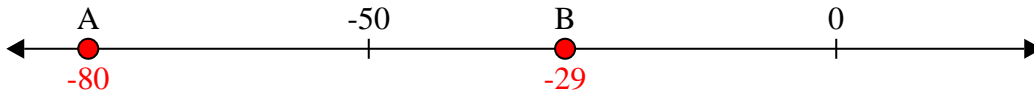
10. \_\_\_\_\_



Risolvi ogni problema.

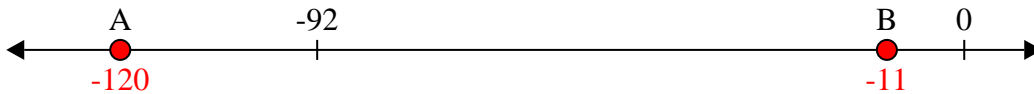
**Risposte**

1) Quale lettera indica meglio -29?



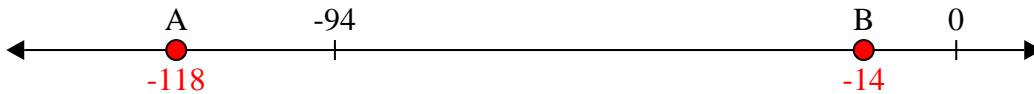
1. **B**

2) Quale lettera indica meglio -120?



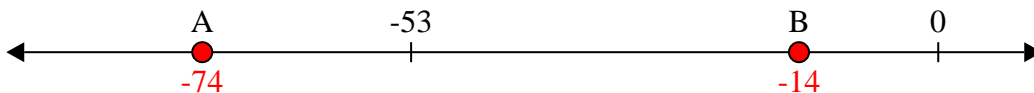
2. **A**

3) Quale lettera indica meglio -118?




3. **A**

4) Quale lettera indica meglio -14?




4. **B**

5) Quale lettera indica meglio -109?




5. **A**

6) Quale lettera indica meglio -28?




6. **B**

7) Quale lettera indica meglio -21?




7. **B**

8) Quale lettera indica meglio -14?



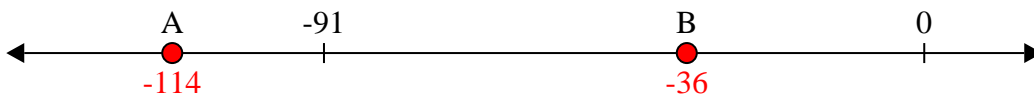
8. **B**

9) Quale lettera indica meglio -13?



9. **B**

10) Quale lettera indica meglio -114?



10. **A**