



Risolvi ogni problema.

Risposte

1) Quale lettera mostra meglio -56?




1. _____

2) Quale lettera mostra meglio -94?



2. _____

3) Quale lettera mostra meglio -28?




3. _____

4) Quale lettera mostra meglio -89?




4. _____

5) Quale lettera mostra meglio -14?



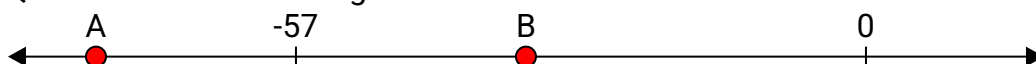
5. _____

6) Quale lettera mostra meglio -79?




6. _____

7) Quale lettera mostra meglio -77?



7. _____

8) Quale lettera mostra meglio -119?



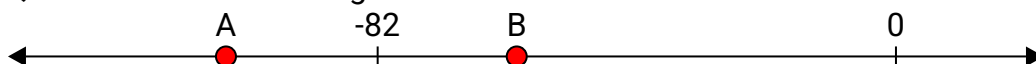
8. _____

9) Quale lettera mostra meglio -110?



9. _____

10) Quale lettera mostra meglio -106?



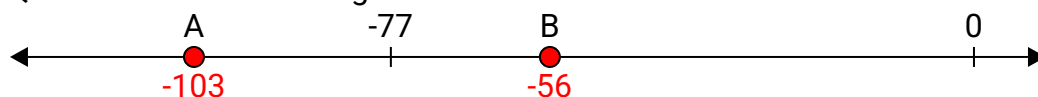
10. _____



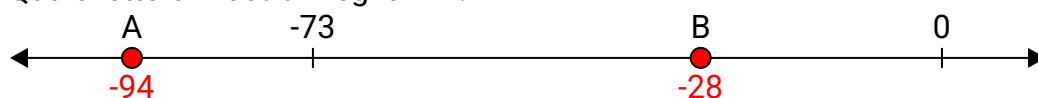
Risolvi ogni problema.

Risposte

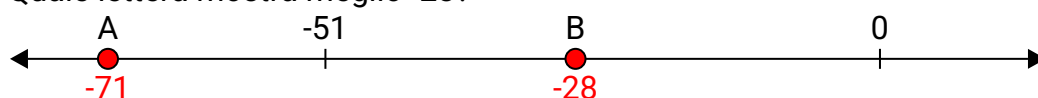
1) Quale lettera mostra meglio -56?

1. **B**


2) Quale lettera mostra meglio -94?

2. **A**


3) Quale lettera mostra meglio -28?

3. **B**


4) Quale lettera mostra meglio -89?

4. **A**

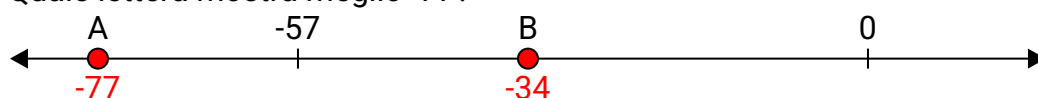
5) Quale lettera mostra meglio -14?

5. **B**


6) Quale lettera mostra meglio -79?

6. **A**

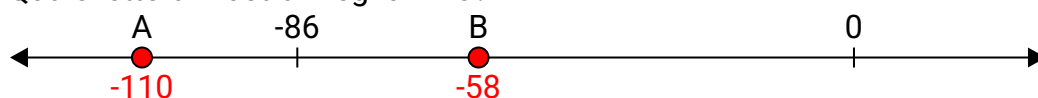
7) Quale lettera mostra meglio -77?

7. **A**

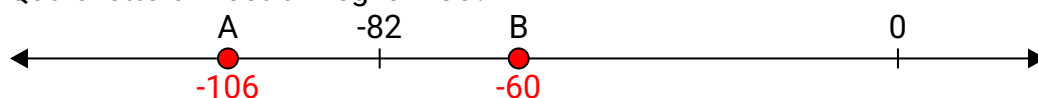
8) Quale lettera mostra meglio -119?

8. **A**

9) Quale lettera mostra meglio -110?

9. **A**

10) Quale lettera mostra meglio -106?

10. **A**