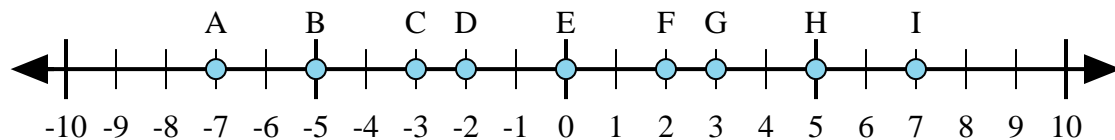




Determina quale lettera nella linea dei numeri rappresenta meglio la risposta a ciascun problema.



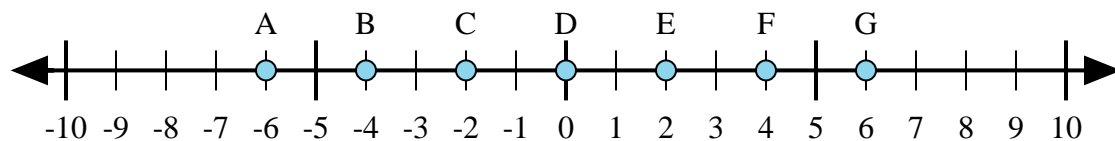
1) $(-5) + 2 =$

2) $(-2) + (-5) =$

3) $2 + 5 =$

4) $(-2) + 5 =$

5) $2 + (-5) =$



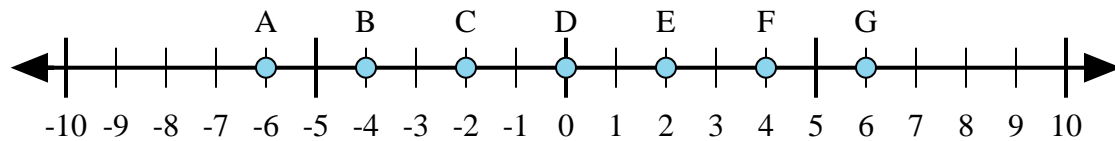
6) $(-2) + 4 =$

7) $(-4) + 2 =$

8) $(-2) + (-4) =$

9) $2 + (-4) =$

10) $2 + 4 =$



11) $4 + 2 =$

12) $(-4) + (-2) =$

13) $(-2) + 4 =$

14) $(-4) + 2 =$

15) $2 + (-4) =$

Risposte

1. _____

2. _____

3. _____

4. _____

5. _____

6. _____

7. _____

8. _____

9. _____

10. _____

11. _____

12. _____

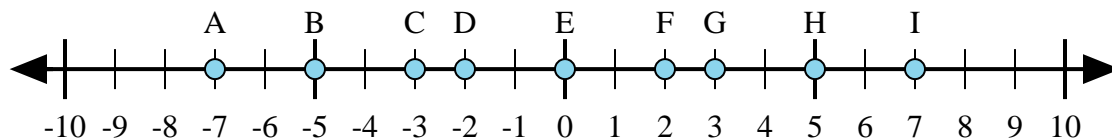
13. _____

14. _____

15. _____



Determina quale lettera nella linea dei numeri rappresenta meglio la risposta a ciascun problema.



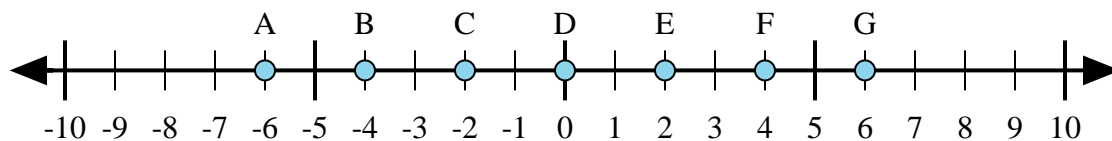
1) $(-5) + 2 =$

2) $(-2) + (-5) =$

3) $2 + 5 =$

4) $(-2) + 5 =$

5) $2 + (-5) =$



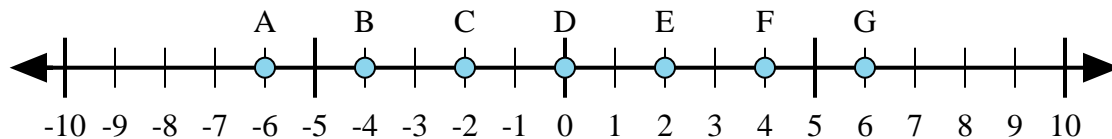
6) $(-2) + 4 =$

7) $(-4) + 2 =$

8) $(-2) + (-4) =$

9) $2 + (-4) =$

10) $2 + 4 =$



11) $4 + 2 =$

12) $(-4) + (-2) =$

13) $(-2) + 4 =$

14) $(-4) + 2 =$

15) $2 + (-4) =$

Risposte1. **C** 2. **A** 3. **I** 4. **G** 5. **C** 6. **E** 7. **C** 8. **A** 9. **C** 10. **G** 11. **G** 12. **A** 13. **E** 14. **C** 15. **C**