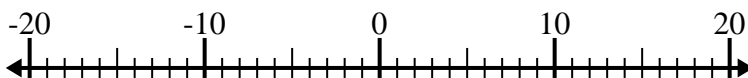


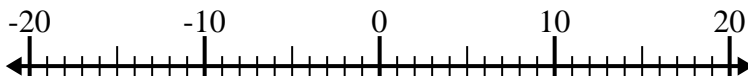


Risolvi ogni operazione. Usa la linea numerata se necessario.

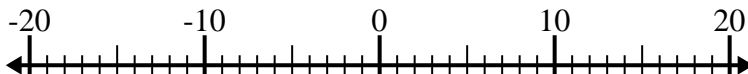
1) $(-6) + 8 =$ _____



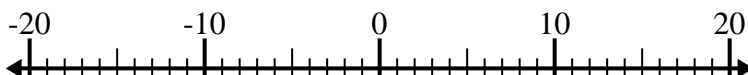
2) $(-9) - 10 =$ _____



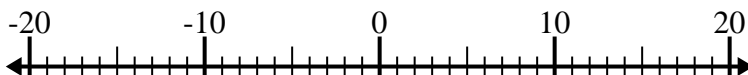
3) $10 + (-4) =$ _____



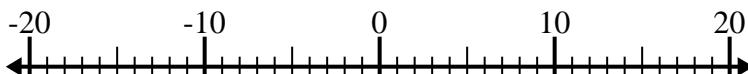
4) $3 - (-9) =$ _____



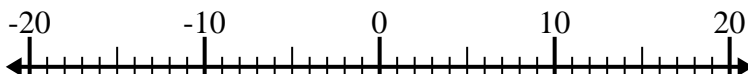
5) $(-4) + 11 =$ _____



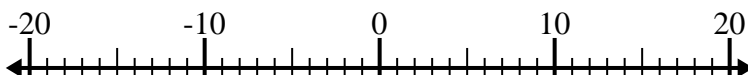
6) $(-14) - (-6) =$ _____



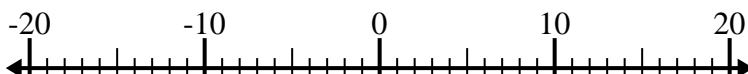
7) $(-9) - (-8) =$ _____



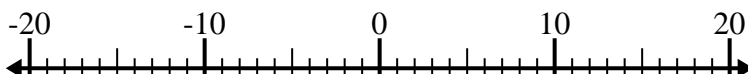
8) $6 + (-1) =$ _____



9) $(-7) + (-6) =$ _____



10) $(-15) + (-5) =$ _____



Risposte

1. _____
2. _____
3. _____
4. _____
5. _____
6. _____
7. _____
8. _____
9. _____
10. _____



Risolvi ogni operazione. Usa la linea numerata se necessario.

1) $(-6) + 8 = \underline{2}$



2) $(-9) - 10 = \underline{-19}$



3) $10 + (-4) = \underline{6}$



4) $3 - (-9) = \underline{12}$



5) $(-4) + 11 = \underline{7}$



6) $(-14) - (-6) = \underline{-8}$



7) $(-9) - (-8) = \underline{-1}$



8) $6 + (-1) = \underline{5}$



9) $(-7) + (-6) = \underline{-13}$



10) $(-15) + (-5) = \underline{-20}$

**Risposte**1. 22. -193. 64. 125. 76. -87. -18. 59. -1310. -20