





Usa le griglie fornite per risolvere ogni operazione.


1)  $40 \times 33 =$




2)  $30 \times 31 =$




3)  $20 \times 27 =$




4)  $20 \times 26 =$



5)  $23 \times 20 =$



6)  $26 \times 20 =$

**Risposte**

1. \_\_\_\_\_

2. \_\_\_\_\_

3. \_\_\_\_\_

4. \_\_\_\_\_

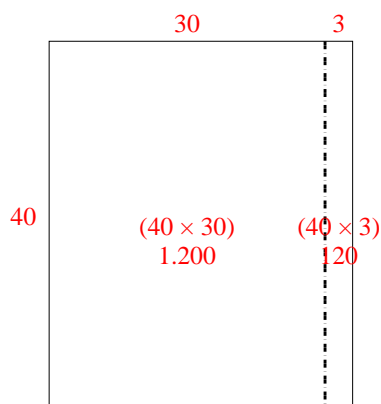
5. \_\_\_\_\_

6. \_\_\_\_\_

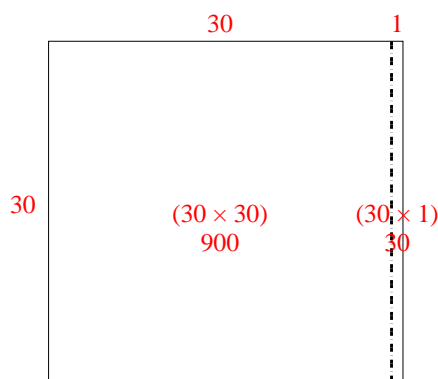


Usa le griglie fornite per risolvere ogni operazione.

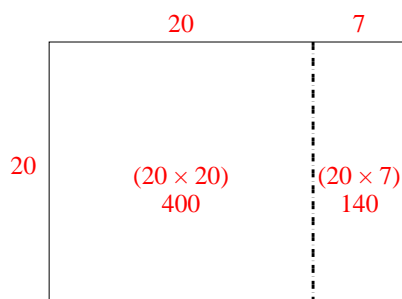
1)  $40 \times 33 =$



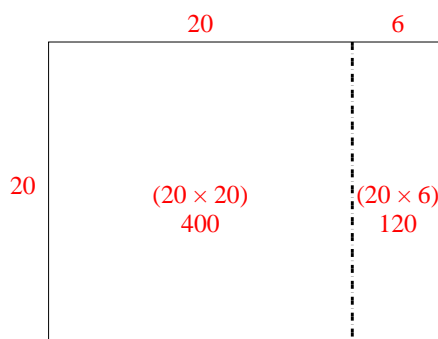
2)  $30 \times 31 =$



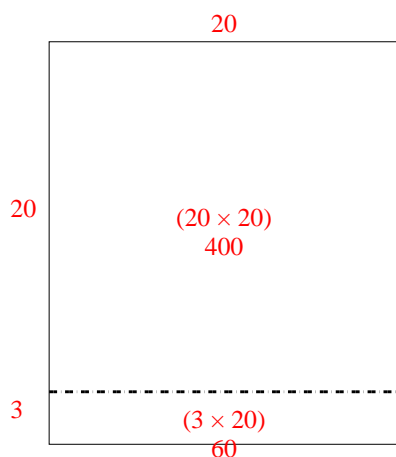
3)  $20 \times 27 =$



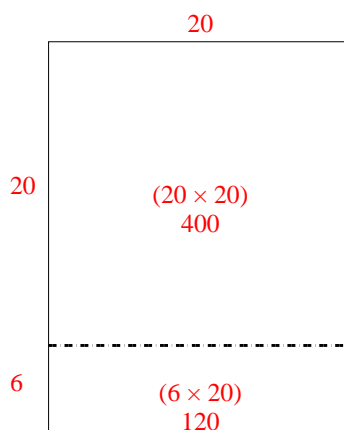
4)  $20 \times 26 =$



5)  $23 \times 20 =$



6)  $26 \times 20 =$

**Risposte**1. **1.320**2. **930**3. **540**4. **520**5. **460**6. **520**