



Usa le griglie fornite per risolvere ogni operazione.

1) $46 \times 20 =$

2) $30 \times 28 =$

3) $22 \times 20 =$

4) $20 \times 23 =$

5) $27 \times 20 =$

6) $20 \times 27 =$

Risposte

1. _____

2. _____

3. _____

4. _____

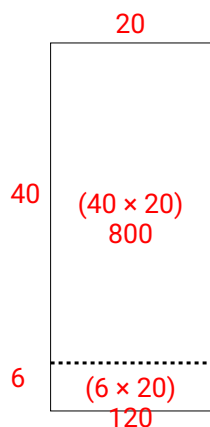
5. _____

6. _____

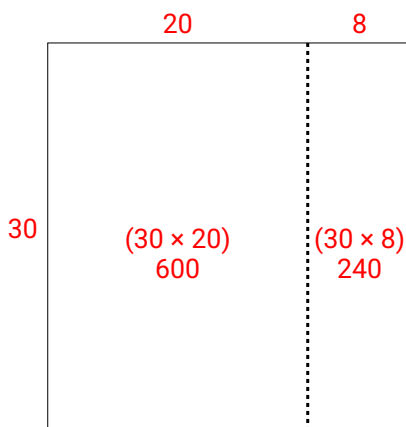


Usa le griglie fornite per risolvere ogni operazione.

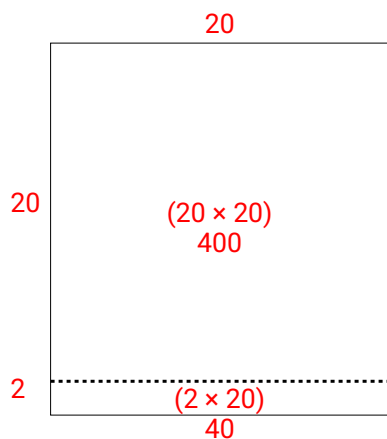
1) $46 \times 20 =$



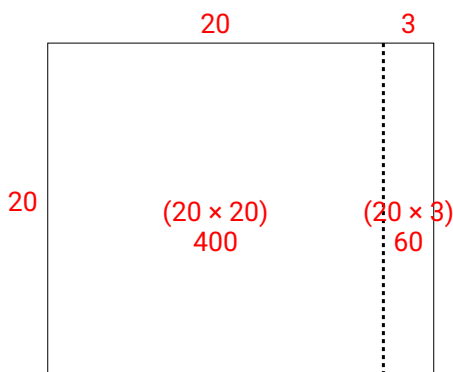
2) $30 \times 28 =$



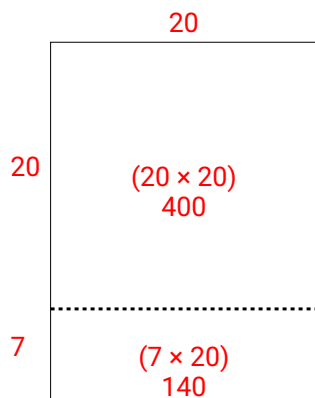
3) $22 \times 20 =$



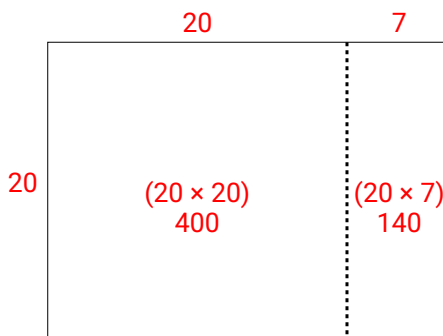
4) $20 \times 23 =$



5) $27 \times 20 =$



6) $20 \times 27 =$

**Risposte**

1. **920**
2. **840**
3. **440**
4. **460**
5. **540**
6. **540**