
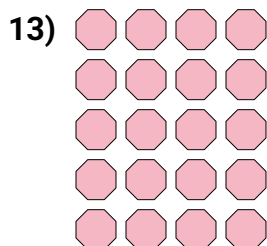

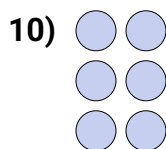

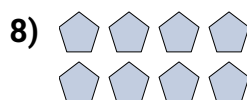
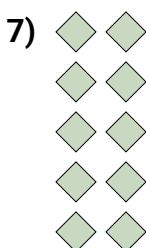
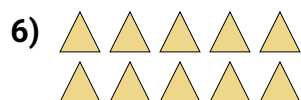
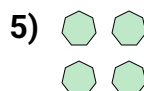

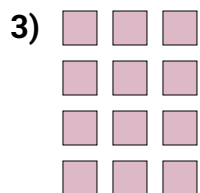






Scrivi un'equazione che esprima il contenuto degli insiemi e trova il numero delle forme.

**Risposte**

Es.  $2 \times 3 = 6$

1. \_\_\_\_\_

2. \_\_\_\_\_

3. \_\_\_\_\_

4. \_\_\_\_\_

5. \_\_\_\_\_

6. \_\_\_\_\_

7. \_\_\_\_\_

8. \_\_\_\_\_

9. \_\_\_\_\_

10. \_\_\_\_\_

11. \_\_\_\_\_


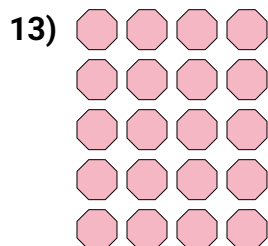

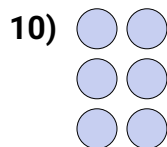

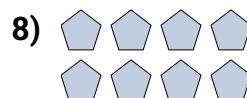
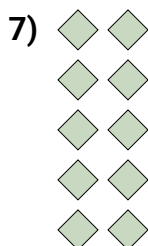
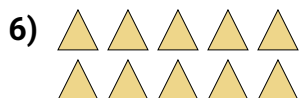
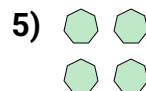

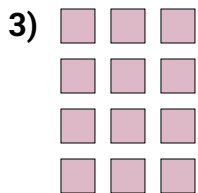
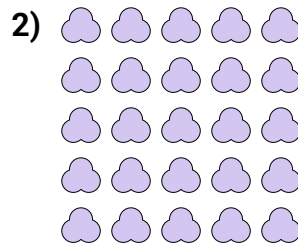

12. \_\_\_\_\_

13. \_\_\_\_\_

14. \_\_\_\_\_



Scrivi un'equazione che esprima il contenuto degli insiemi e trova il numero delle forme.

**Risposte**

Es.  $2 \times 3 = 6$

1.  $3 \times 4 = 12$

2.  $5 \times 5 = 25$

3.  $4 \times 3 = 12$

4.  $4 \times 4 = 16$

5.  $2 \times 2 = 4$

6.  $2 \times 5 = 10$

7.  $5 \times 2 = 10$

8.  $2 \times 4 = 8$

9.  $4 \times 5 = 20$

10.  $3 \times 2 = 6$

11.  $3 \times 5 = 15$

12.  $3 \times 3 = 9$

13.  $5 \times 4 = 20$

14.  $5 \times 3 = 15$