





Usa le unità fornite per misurare la lunghezza delle barre.





Risposte

- 1. _____
- 2. _____
- 3. _____
- 4. _____
- 5. _____
- 6. _____
- 7. _____
- 8. _____
- 9. _____
- 10. _____



Usa le unità fornite per misurare la lunghezza delle barre.



Risposte

1. 10

2. 1

3. 9

4. 2

5. 4

6. 3

7. 12

8. 7

9. 11

10. 6