





Misura la lunghezza e l'altezza di ogni rettangolo in pollici e in centimetri

Es)



1)



2)



3)



4)



**Risposte**

Es. 0 1/2 1 1/2 1,3 3,8

1. \_\_\_\_\_

2. \_\_\_\_\_


3. \_\_\_\_\_

4. \_\_\_\_\_




Misura la lunghezza e l'altezza di ogni rettangolo in pollici e in centimetri

Es)




1)



2)



3)



4)

**Risposte**Es. 0 1/2 1 1/2 1,3 3,81. 5 1 1/2 12,7 3,82. 3 1/2 0 1/2 8,9 1,33. 4 1 10,2 2,54. 4 1/2 0 1/2 11,4 1,3