





Misura la lunghezza e l'altezza di ogni rettangolo in pollici e in centimetri

Es)



1)



2)



3)



4)

**Risposte**Es. 1 1 1/2 2,5 3,8

1. _____

2. _____


3. _____

4. _____




Misura la lunghezza e l'altezza di ogni rettangolo in pollici e in centimetri


Es)



1)



2)



3)



4)

**Risposte**Es. 1 1 1/2 2,5 3,81. 1 1/2 1 1/2 3,8 3,82. 5 1 12,7 2,53. 5 1/2 0 1/2 14 1,34. 0 1/2 1 1/2 1,3 3,8