



Misura la lunghezza e l'altezza di ogni rettangolo in pollici e in centimetri

Es)



Risposte

Es. 2 1/2 1 6,4 2,5


1. _____

2. _____


3. _____

4. _____


1)



2)



3)



4)






Misura la lunghezza e l'altezza di ogni rettangolo in pollici e in centimetri


Es)




1)



2)



3)



4)

**Risposte**Es. 2 1/2 1 6,4 2,51. 4 1/2 1 1/2 11,4 3,82. 3 1 7,6 2,53. 5 1 1/2 12,7 3,84. 2 0 1/2 5,1 1,3