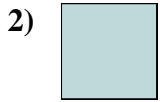




Misura la lunghezza di ogni barra sia in centimetri che in pollici.



Risposte

Es. 3 7 - 8

1. _____

2. _____

3. _____

4. _____

5. _____

6. _____


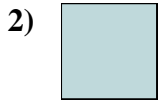
7. _____

8. _____

9. _____



Misura la lunghezza di ogni barra sia in centimetri che in pollici.



Risposte

Es. 3 7 - 8

1. 1 1/2 3 - 4

2. 0 1/2 1 - 2

3. 5 1/2 13 - 14

4. 1 2 - 3

5. 4 1/2 11 - 12

6. 4 10 - 11

7. 5 12 - 13

8. 2 5 - 6

9. 2 1/2 6 - 7