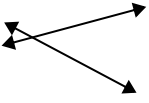




Definisci 'parallele', 'perp'(perpendicolare) o 'inter'(intersezione) per descrivere le linee.

Risposte

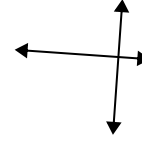
1)



2)



3)



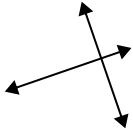
1. _____

2. _____

3. _____

4. _____

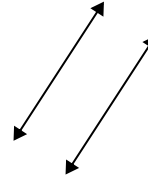
4)



5)



6)



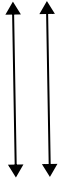
5. _____

6. _____

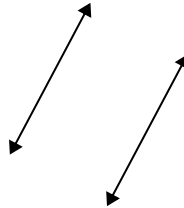
7. _____

8. _____

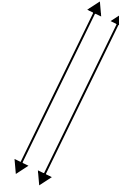
7)



8)



9)



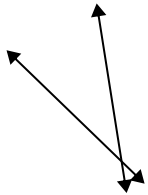
9. _____

10. _____

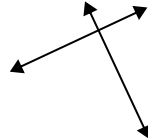
11. _____

12. _____

10)



11)



12)

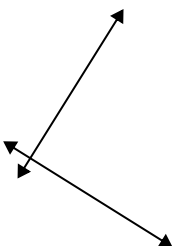


13. _____

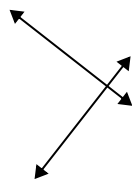
14. _____

15. _____

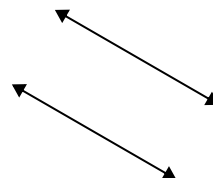
13)



14)



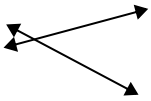
15)





Definisci 'parallele', 'perp'(perpendicolare) o 'inter'(intersezione) per descrivere le linee.

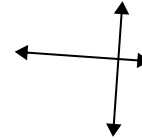
1)



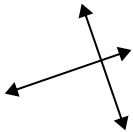
2)



3)



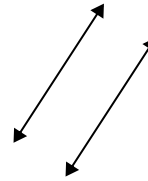
4)



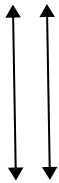
5)



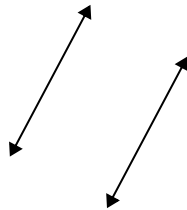
6)



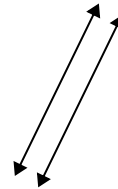
7)



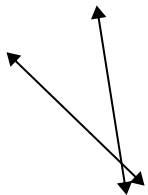
8)



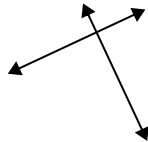
9)



10)



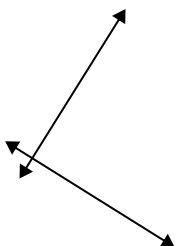
11)



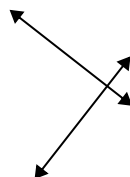
12)



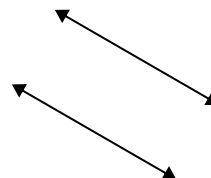
13)



14)



15)



Risposte

1. incidenti

2. incidenti

3. perpendicolari e incidenti

4. perpendicolari e incidenti

5. incidenti

6. parallele

7. parallele

8. parallele

9. parallele

10. incidenti

11. perpendicolari e incidenti

12. incidenti

13. perpendicolari e incidenti

14. perpendicolari e incidenti

15. parallele