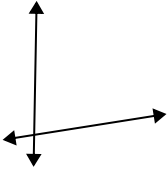




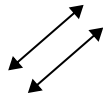
Definisci 'parallele', 'perp'(perpendicolare) o 'inter'(intersezione) per descrivere le linee.

Risposte

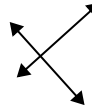
1)



2)



3)



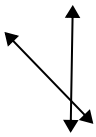
1. _____

2. _____

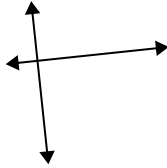
3. _____

4. _____

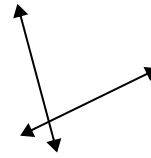
4)



5)



6)



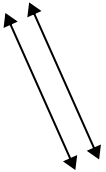
5. _____

6. _____

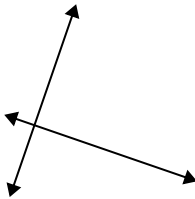
7. _____

8. _____

7)



8)



9)



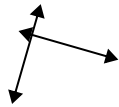
9. _____

10. _____

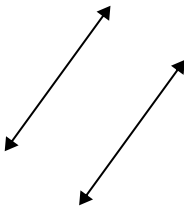
11. _____

12. _____

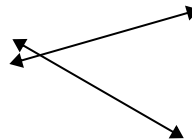
10)



11)



12)

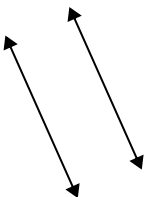


13. _____

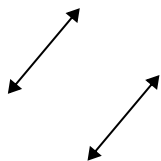
14. _____

15. _____

13)



14)



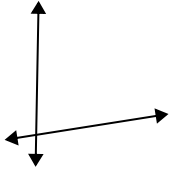
15)



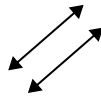


Definisci 'parallele', 'perp'(perpendicolare) o 'inter'(intersezione) per descrivere le linee.

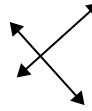
1)



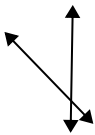
2)



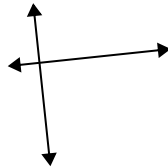
3)



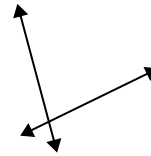
4)



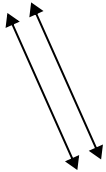
5)



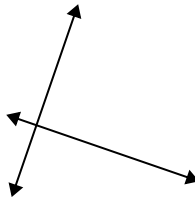
6)



7)



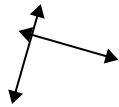
8)



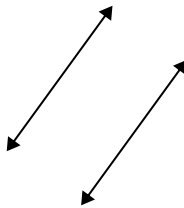
9)



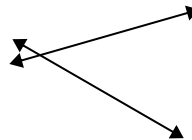
10)



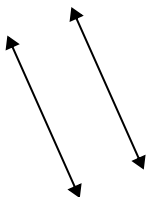
11)



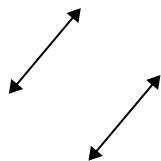
12)



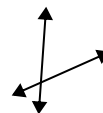
13)



14)



15)



Risposte

1. incidenti

2. parallele

3. perpendicolari e incidenti

4. incidenti

5. perpendicolari e incidenti

6. incidenti

7. parallele

8. perpendicolari e incidenti

9. perpendicolari e incidenti

10. perpendicolari e incidenti

11. parallele

12. incidenti

13. parallele

14. parallele

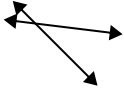
15. incidenti



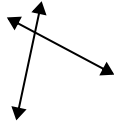
Definisci 'parallele', 'perp'(perpendicolare) o 'inter'(intersezione) per descrivere le linee.

Risposte

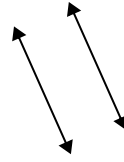
1)



2)



3)



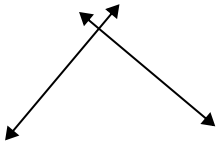
1. _____

2. _____

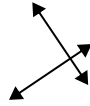
3. _____

4. _____

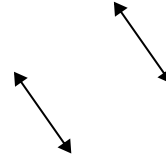
4)



5)



6)



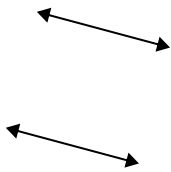
5. _____

6. _____

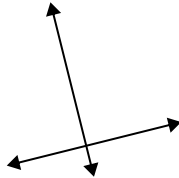
7. _____

8. _____

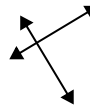
7)



8)



9)



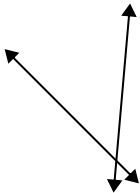
9. _____

10. _____

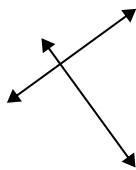
11. _____

12. _____

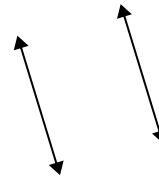
10)



11)



12)



13. _____


14. _____

15. _____

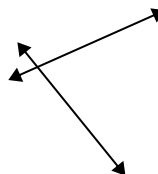
13)



14)



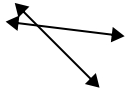
15)



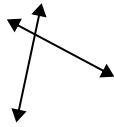


Definisci 'parallele', 'perp'(perpendicolare) o 'inter'(intersezione) per descrivere le linee.

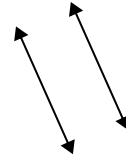
1)



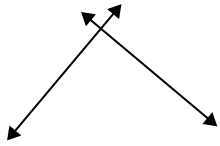
2)



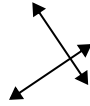
3)



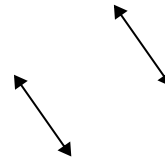
4)



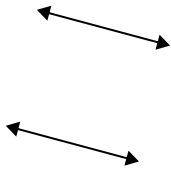
5)



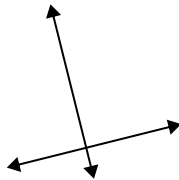
6)



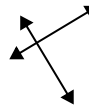
7)



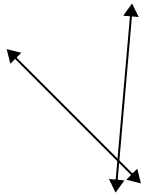
8)



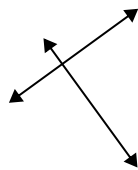
9)



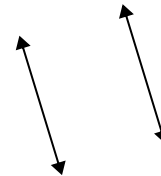
10)



11)




12)



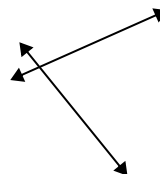
13)



14)



15)



Risposte

1. incidenti

2. incidenti

3. parallele

4. perpendicolari e incidenti

5. perpendicolari e incidenti

6. parallele

7. parallele

8. perpendicolari e incidenti

9. perpendicolari e incidenti

10. incidenti

11. perpendicolari e incidenti

12. parallele

13. incidenti

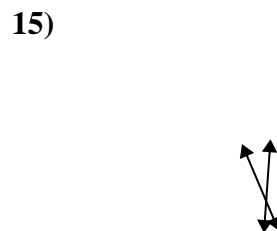
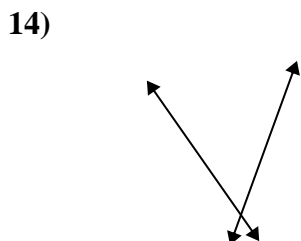
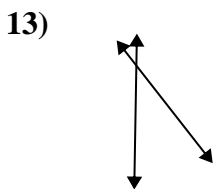
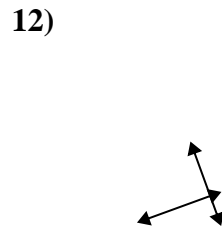
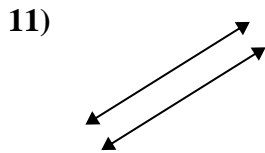
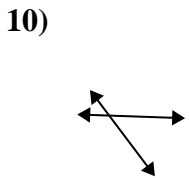
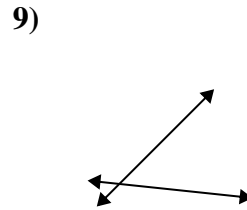
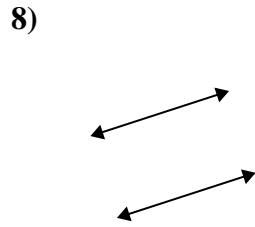
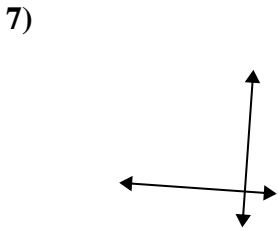
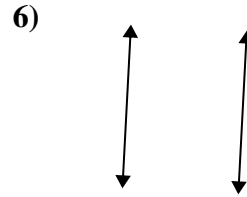
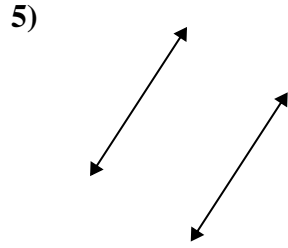
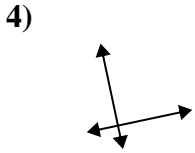
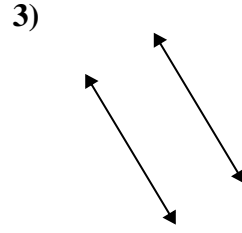
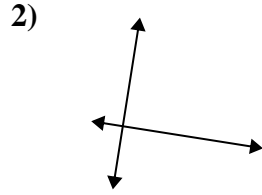
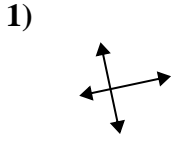
14. parallele

15. incidenti



Definisci 'parallele', 'perp'(perpendicolare) o 'inter'(intersezione) per descrivere le linee.

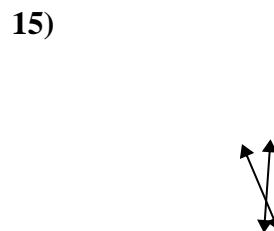
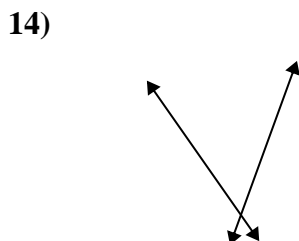
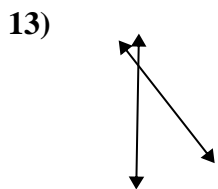
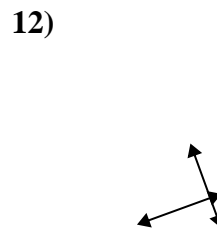
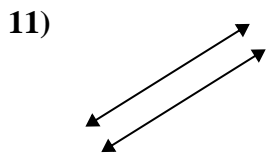
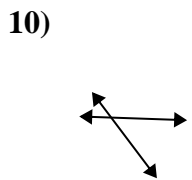
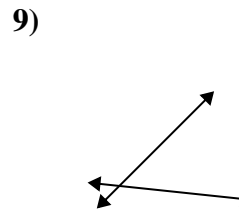
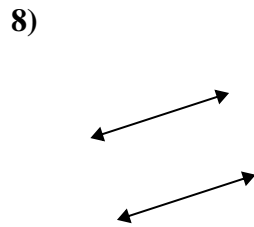
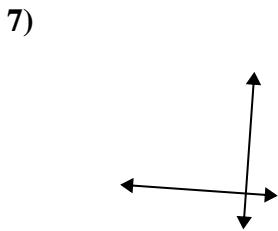
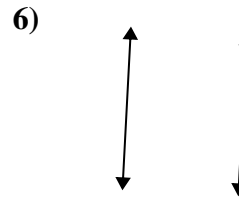
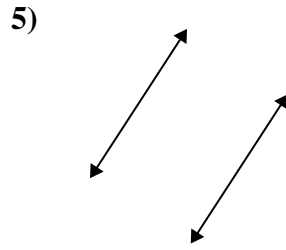
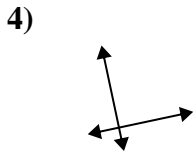
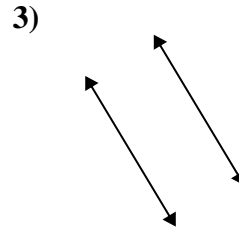
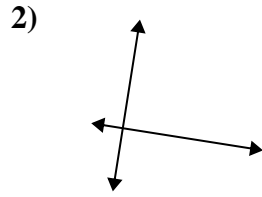
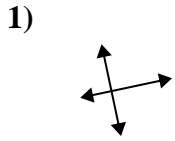
Risposte



1. _____
2. _____
3. _____
4. _____
5. _____
6. _____
7. _____
8. _____
9. _____
10. _____
11. _____
12. _____
13. _____
14. _____
15. _____



Definisci 'parallele', 'perp'(perpendicolare) o 'inter'(intersezione) per descrivere le linee.



Risposte

1. perpendicolari e incidenti

2. perpendicolari e incidenti

3. parallele

4. perpendicolari e incidenti

5. parallele

6. parallele

7. perpendicolari e incidenti

8. parallele

9. incidenti

10. incidenti

11. parallele

12. perpendicolari e incidenti

13. incidenti

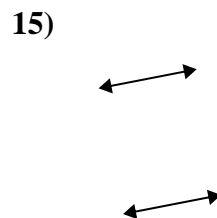
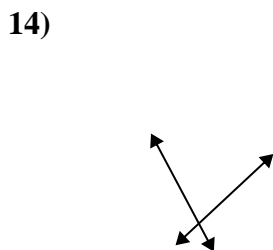
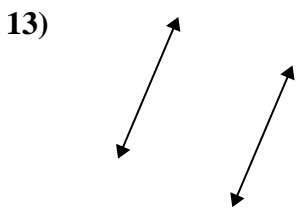
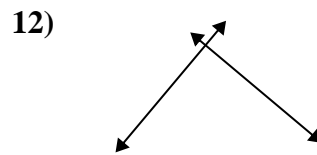
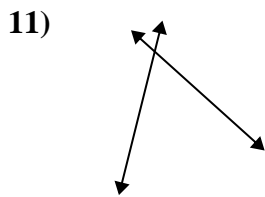
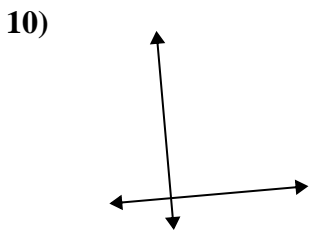
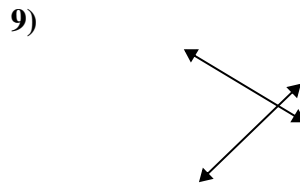
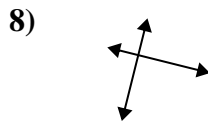
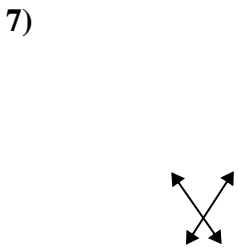
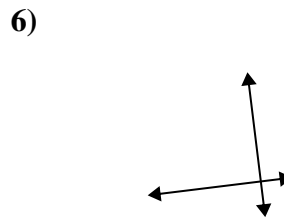
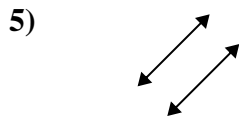
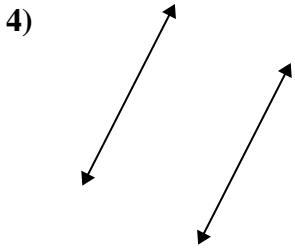
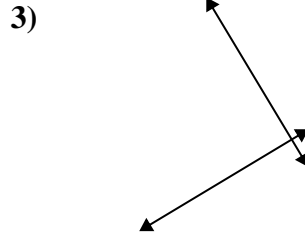
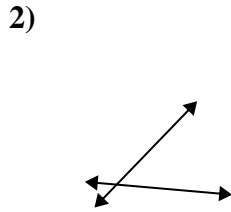
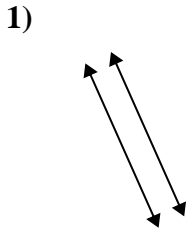
14. incidenti

15. incidenti



Definisci 'parallele', 'perp'(perpendicolare) o 'inter'(intersezione) per descrivere le linee.

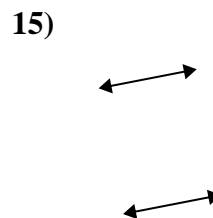
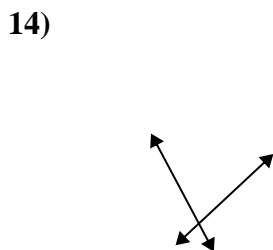
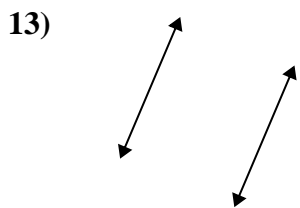
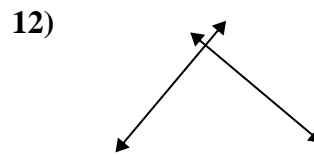
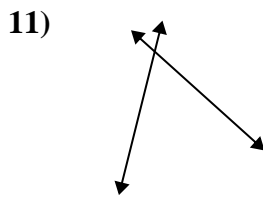
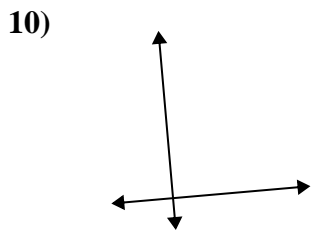
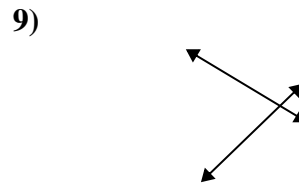
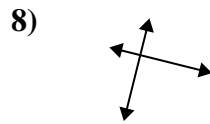
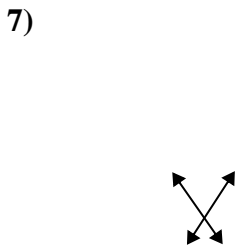
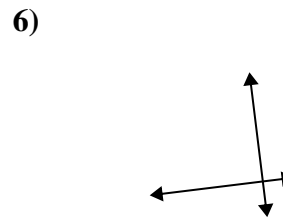
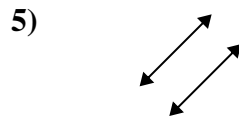
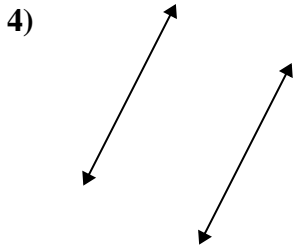
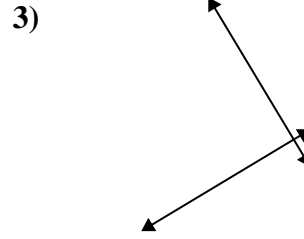
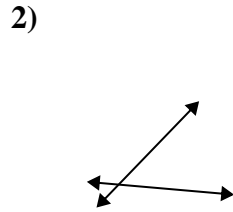
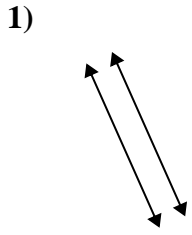
Risposte



1. _____
2. _____
3. _____
4. _____
5. _____
6. _____
7. _____
8. _____
9. _____
10. _____
11. _____
12. _____
13. _____
14. _____
15. _____



Definisci 'parallele', 'perp'(perpendicolare) o 'inter'(intersezione) per descrivere le linee.



Risposte

1. parallele

2. incidenti

3. perpendicolari e incidenti

4. parallele

5. parallele

6. perpendicolari e incidenti

7. incidenti

8. perpendicolari e incidenti

9. incidenti

10. perpendicolari e incidenti

11. incidenti

12. perpendicolari e incidenti

13. parallele

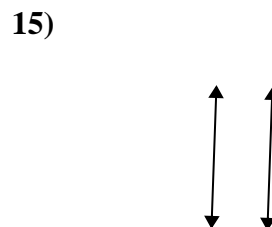
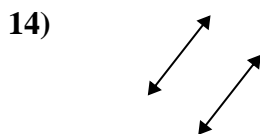
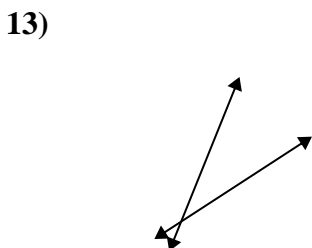
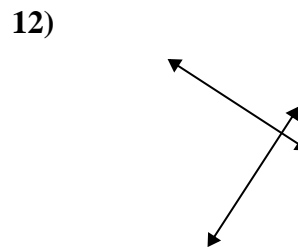
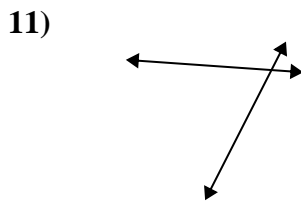
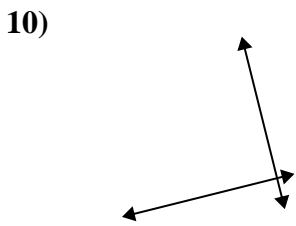
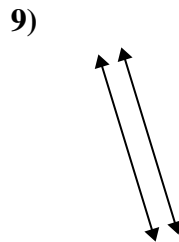
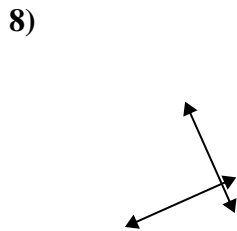
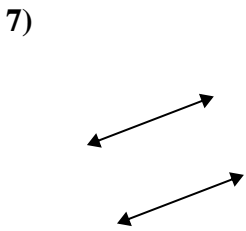
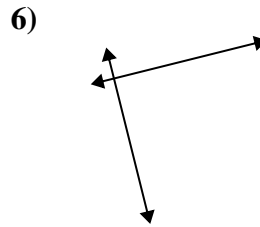
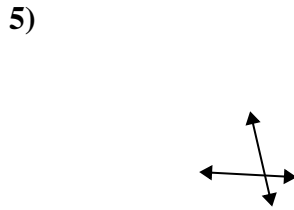
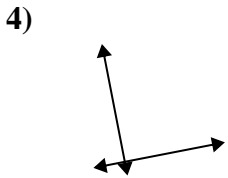
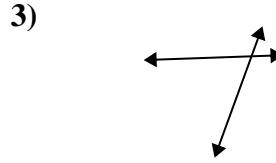
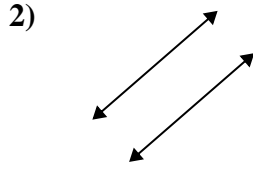
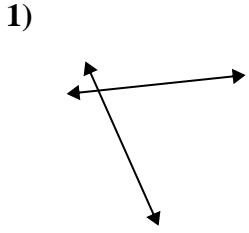
14. incidenti

15. parallele



Definisci 'parallele', 'perp'(perpendicolare) o 'inter'(intersezione) per descrivere le linee.

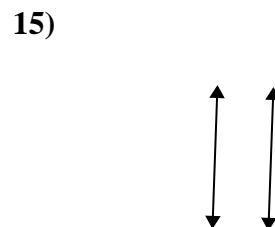
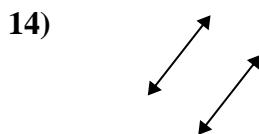
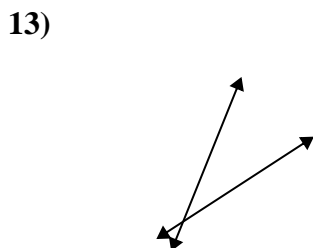
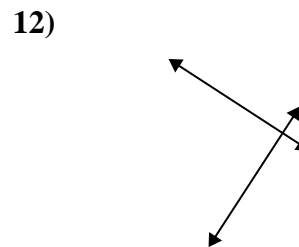
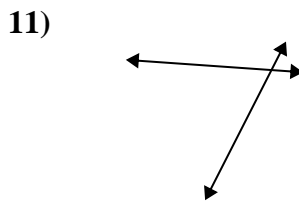
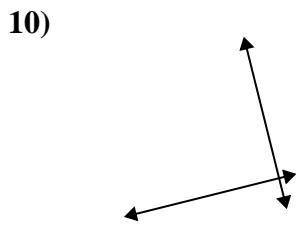
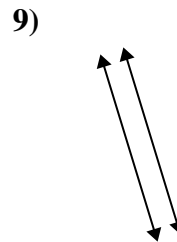
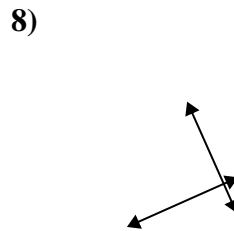
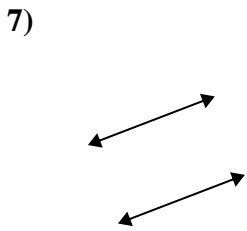
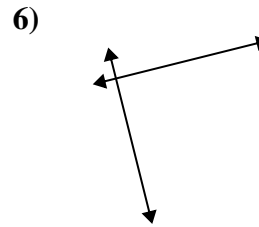
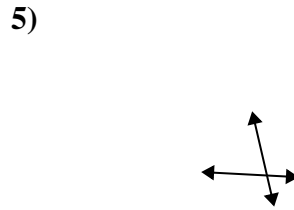
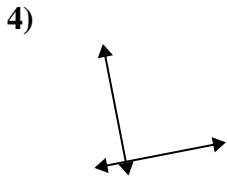
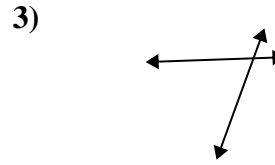
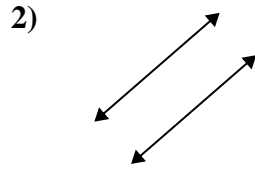
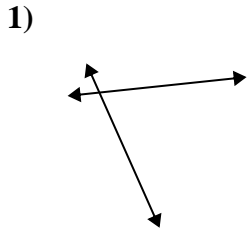
Risposte



1. _____
2. _____
3. _____
4. _____
5. _____
6. _____
7. _____
8. _____
9. _____
10. _____
11. _____
12. _____
13. _____
14. _____
15. _____



Definisci 'parallele', 'perp'(perpendicolare) o 'inter'(intersezione) per descrivere le linee.



Risposte

1. incidenti

2. parallele

3. incidenti

4. perpendicolari e incidenti

5. incidenti

6. perpendicolari e incidenti

7. parallele

8. perpendicolari e incidenti

9. parallele

10. perpendicolari e incidenti

11. incidenti

12. perpendicolari e incidenti

13. incidenti

14. parallele

15. parallele



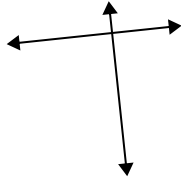
Definisci 'parallele', 'perp'(perpendicolare) o 'inter'(intersezione) per descrivere le linee.

Risposte

1)



2)



3)



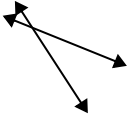
1. _____

2. _____

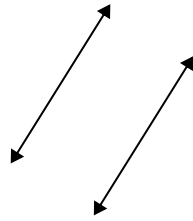
3. _____

4. _____

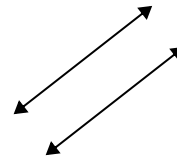
4)



5)



6)



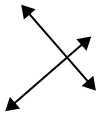
5. _____

6. _____

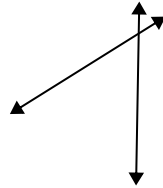
7. _____

8. _____

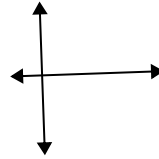
7)



8)



9)



9. _____

10. _____

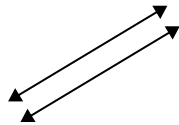
11. _____

12. _____

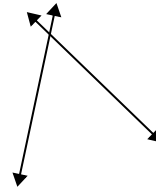
10)



11)



12)

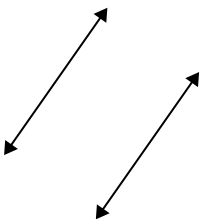


13. _____

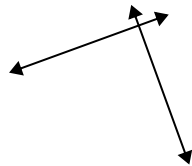
14. _____

15. _____

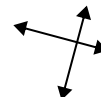
13)



14)



15)



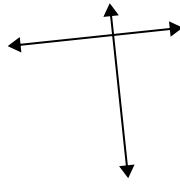


Definisci 'parallele', 'perp'(perpendicolare) o 'inter'(intersezione) per descrivere le linee.

1)



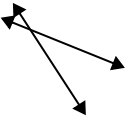
2)



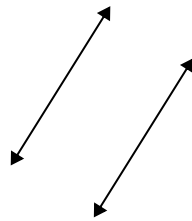
3)



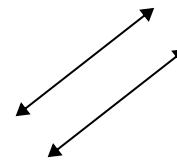
4)



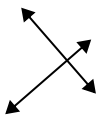
5)



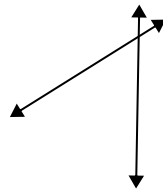
6)



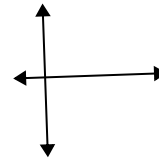
7)



8)



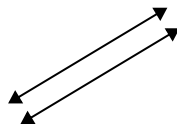
9)



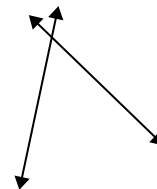
10)



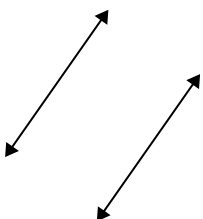
11)



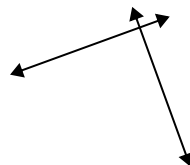
12)



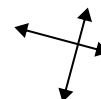
13)



14)



15)



Risposte

1. parallele

2. perpendicolari e incidenti

3. incidenti

4. incidenti

5. parallele

6. parallele

7. perpendicolari e incidenti

8. incidenti

9. perpendicolari e incidenti

10. incidenti

11. parallele

12. incidenti

13. parallele

14. perpendicolari e incidenti

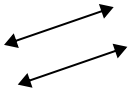
15. perpendicolari e incidenti



Definisci 'parallele', 'perp'(perpendicolare) o 'inter'(intersezione) per descrivere le linee.

Risposte

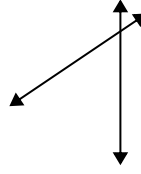
1)



2)



3)



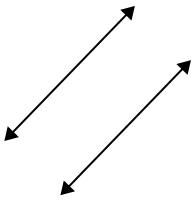
1. _____

2. _____

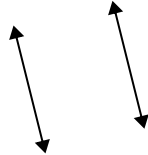
3. _____

4. _____

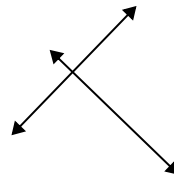
4)



5)



6)



5. _____

6. _____

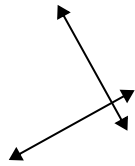
7. _____

8. _____

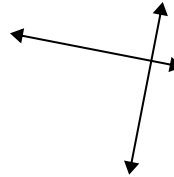
7)



8)



9)



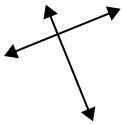
9. _____

10. _____

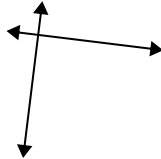
11. _____

12. _____

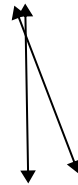
10)



11)



12)

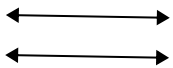


13. _____

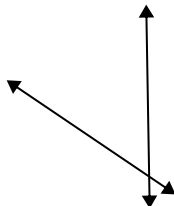
14. _____

15. _____

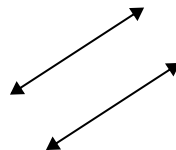
13)



14)



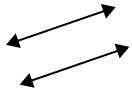
15)





Definisci 'parallele', 'perp'(perpendicolare) o 'inter'(intersezione) per descrivere le linee.

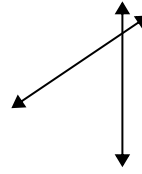
1)



2)



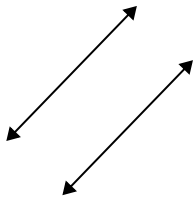
3)



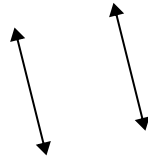
1.

parallele

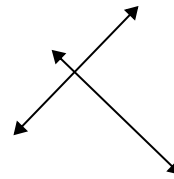
4)



5)



6)



2.

incidenti

3.

incidenti

4.

parallele

5.

parallele

6.

perpendicolari e incidenti

7.

incidenti

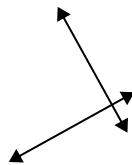
8.

perpendicolari e incidenti

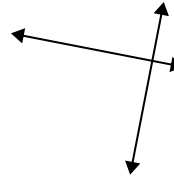
7)



8)



9)



9.

perpendicolari e incidenti

10.

perpendicolari e incidenti

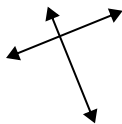
11.

perpendicolari e incidenti

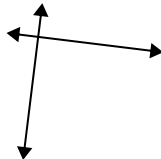
12.

incidenti

10)



11)



12)



13.

parallele

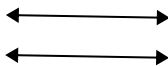
14.

incidenti

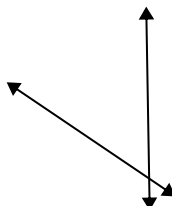
15.

parallele

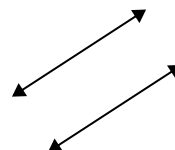
13)



14)



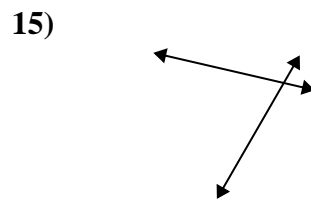
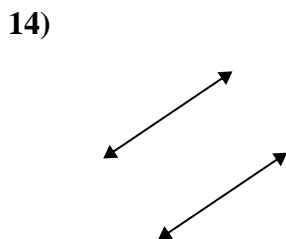
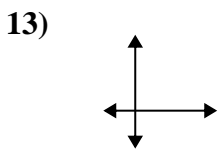
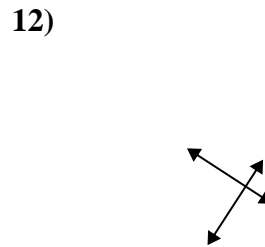
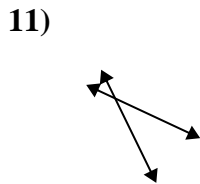
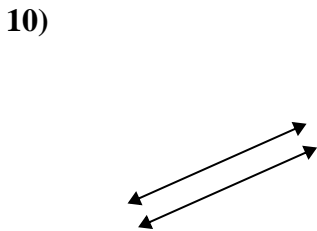
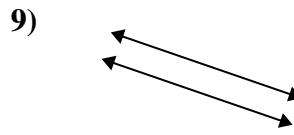
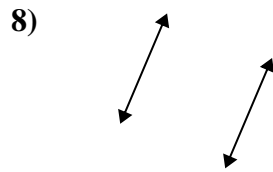
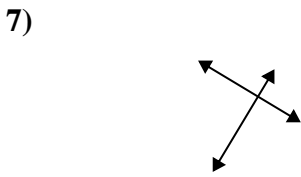
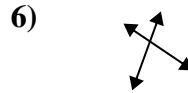
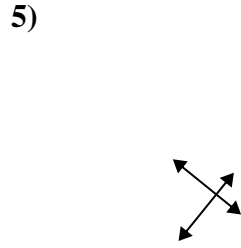
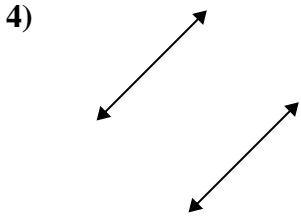
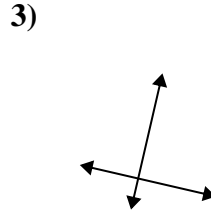
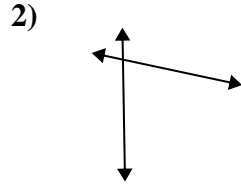
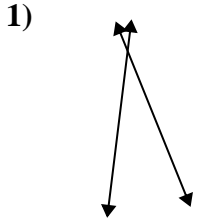
15)





Definisci 'parallele', 'perp'(perpendicolare) o 'inter'(intersezione) per descrivere le linee.

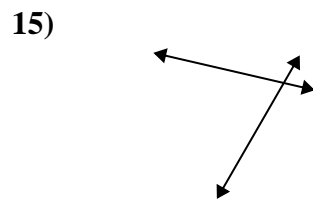
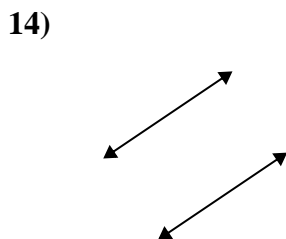
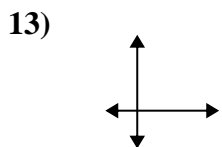
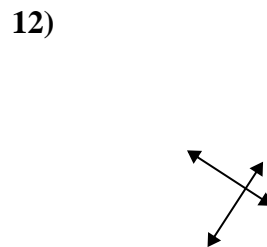
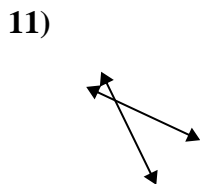
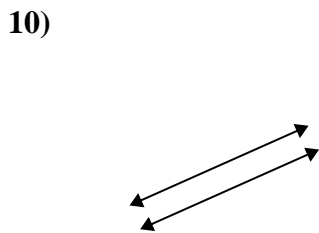
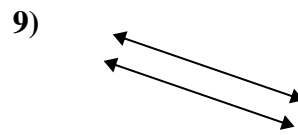
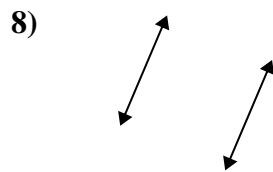
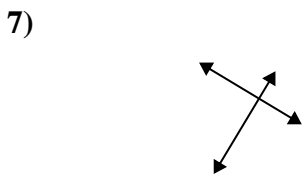
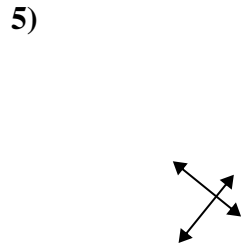
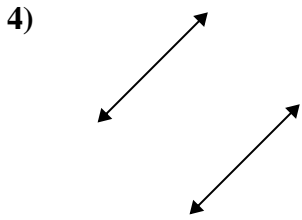
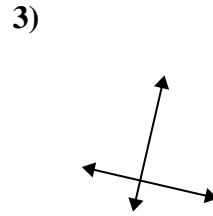
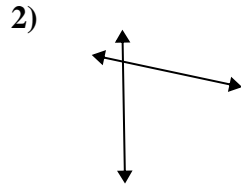
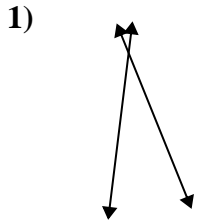
Risposte



1. _____
2. _____
3. _____
4. _____
5. _____
6. _____
7. _____
8. _____
9. _____
10. _____
11. _____
12. _____
13. _____
14. _____
15. _____



Definisci 'parallele', 'perp'(perpendicolare) o 'inter'(intersezione) per descrivere le linee.



Risposte

1. incidenti

2. incidenti

3. perpendicolari e incidenti

4. parallele

5. perpendicolari e incidenti

6. incidenti

7. perpendicolari e incidenti

8. parallele

9. parallele

10. parallele

11. incidenti

12. perpendicolari e incidenti

13. perpendicolari e incidenti

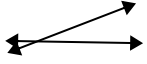
14. parallele

15. incidenti

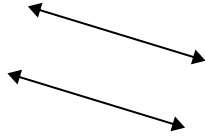


Definisci 'parallele', 'perp'(perpendicolare) o 'inter'(intersezione) per descrivere le linee.

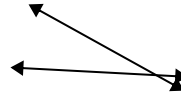
1)



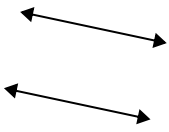
2)



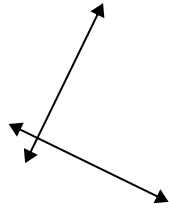
3)



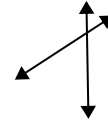
4)



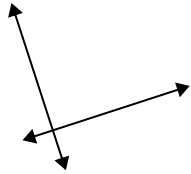
5)



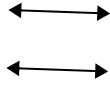
6)



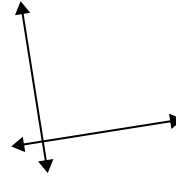
7)



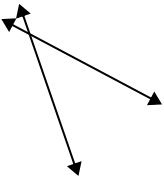
8)



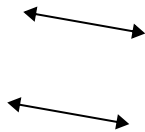
9)



10)



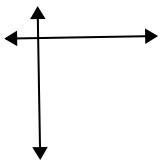
11)



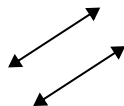
12)



13)



14)



15)



Risposte

1. _____

2. _____

3. _____

4. _____

5. _____

6. _____

7. _____

8. _____

9. _____

10. _____

11. _____

12. _____

13. _____


14. _____

15. _____

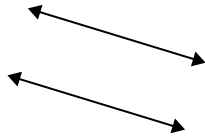


Definisci 'parallele', 'perp'(perpendicolare) o 'inter'(intersezione) per descrivere le linee.

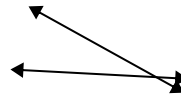
1)



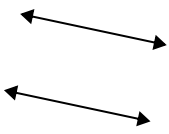
2)



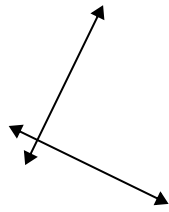
3)



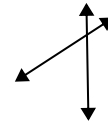
4)



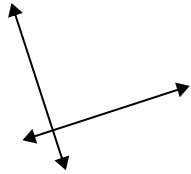
5)



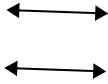
6)



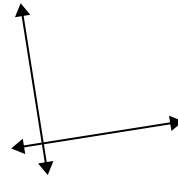
7)



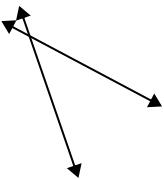
8)



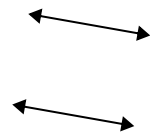
9)



10)



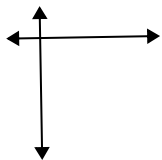
11)



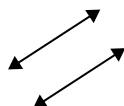
12)



13)



14)



15)



Risposte

1. incidenti

2. parallele

3. incidenti

4. parallele

5. perpendicolari e incidenti

6. incidenti

7. perpendicolari e incidenti

8. parallele

9. perpendicolari e incidenti

10. incidenti

11. parallele

12. incidenti

13. perpendicolari e incidenti

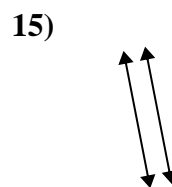
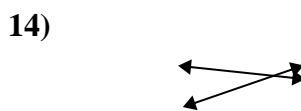
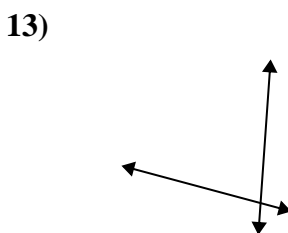
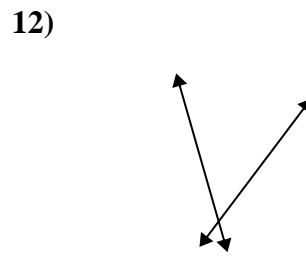
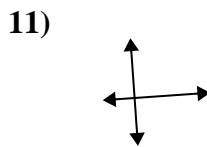
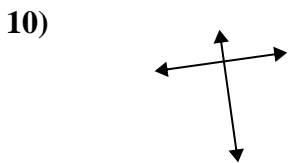
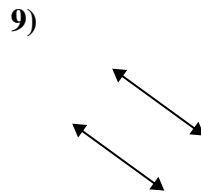
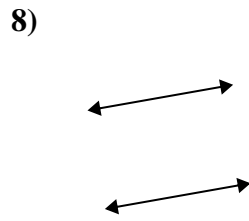
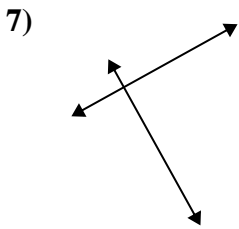
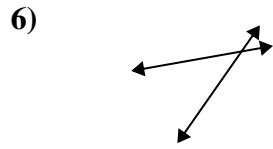
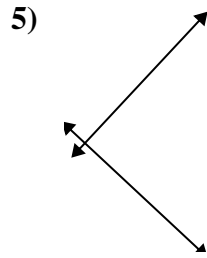
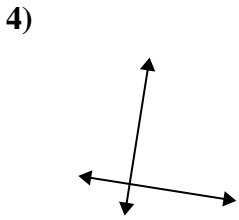
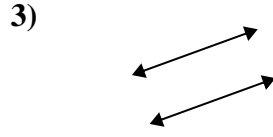
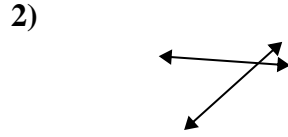
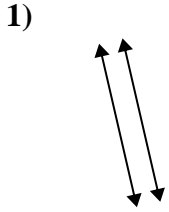
14. parallele

15. perpendicolari e incidenti



Definisci 'parallele', 'perp'(perpendicolare) o 'inter'(intersezione) per descrivere le linee.

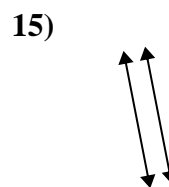
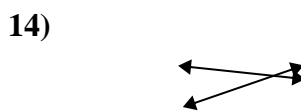
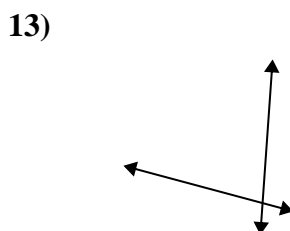
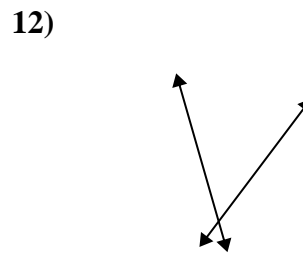
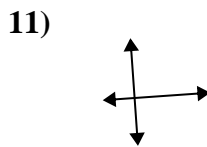
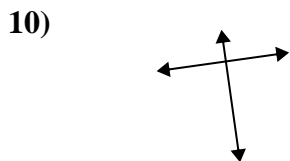
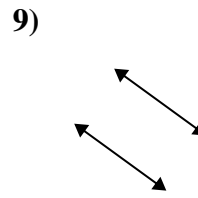
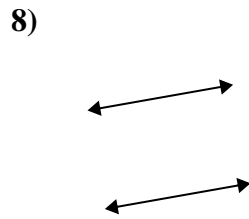
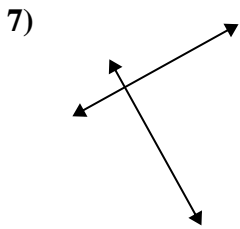
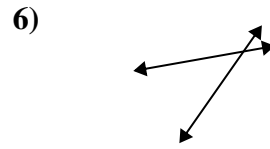
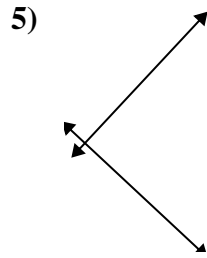
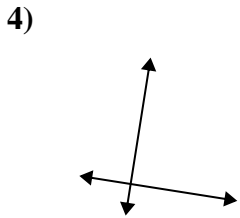
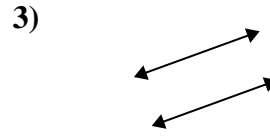
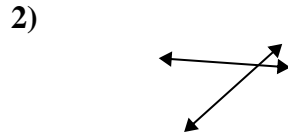
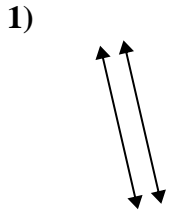
Risposte



1. _____
2. _____
3. _____
4. _____
5. _____
6. _____
7. _____
8. _____
9. _____
10. _____
11. _____
12. _____
13. _____
14. _____
15. _____



Definisci 'parallele', 'perp'(perpendicolare) o 'inter'(intersezione) per descrivere le linee.



Risposte

1. parallele

2. incidenti

3. parallele

4. perpendicolari e incidenti

5. perpendicolari e incidenti

6. incidenti

7. perpendicolari e incidenti

8. parallele

9. parallele

10. perpendicolari e incidenti

11. perpendicolari e incidenti

12. incidenti

13. incidenti

14. incidenti

15. parallele