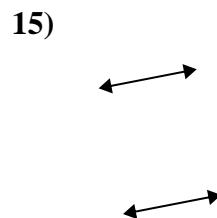
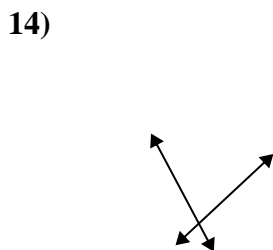
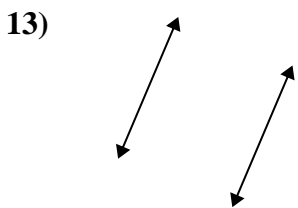
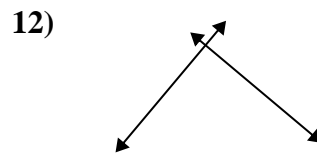
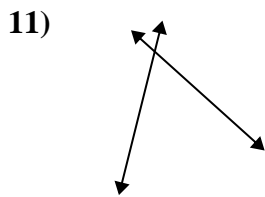
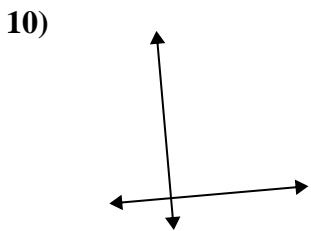
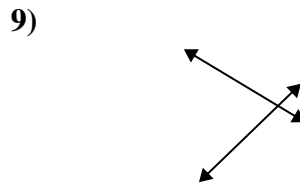
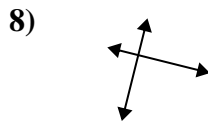
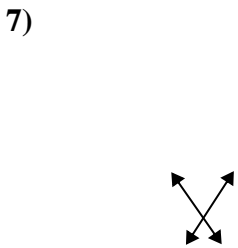
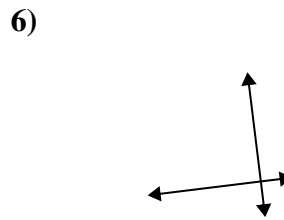
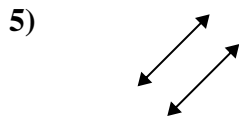
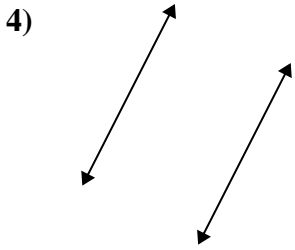
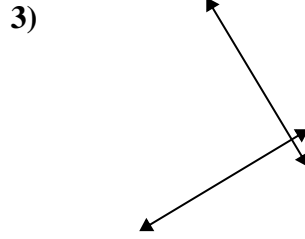
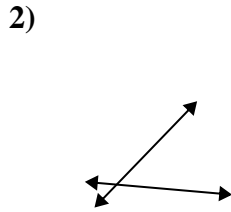
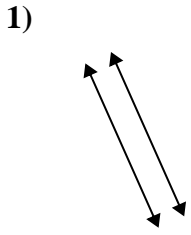




Definisci 'parallele', 'perp'(perpendicolare) o 'inter'(intersezione) per descrivere le linee.

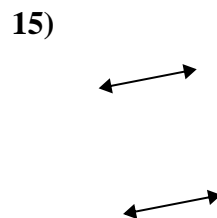
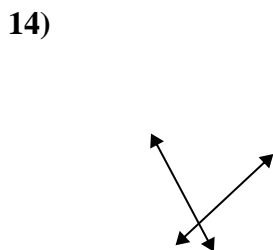
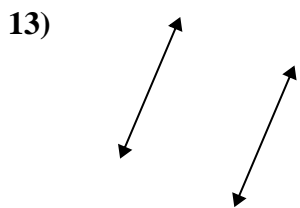
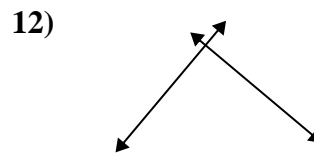
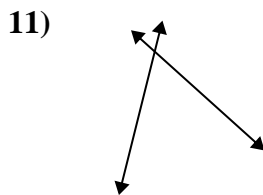
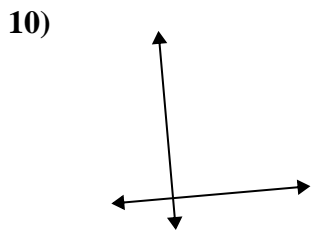
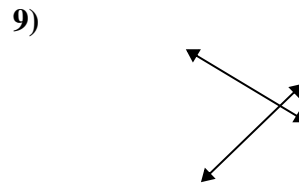
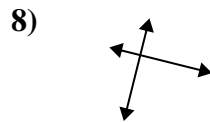
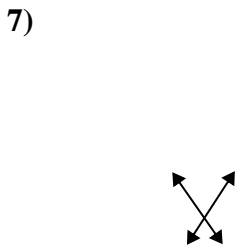
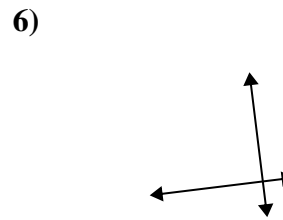
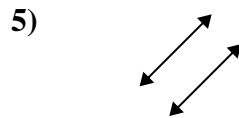
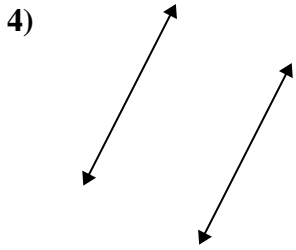
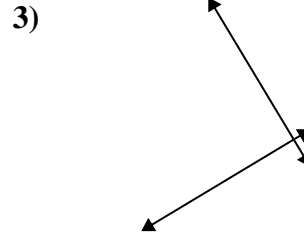
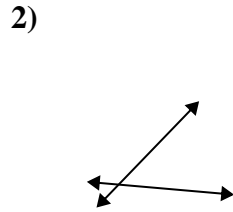
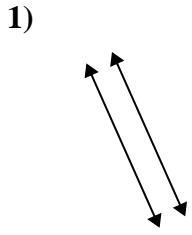
Risposte



1. _____
2. _____
3. _____
4. _____
5. _____
6. _____
7. _____
8. _____
9. _____
10. _____
11. _____
12. _____
13. _____
14. _____
15. _____



Definisci 'parallele', 'perp'(perpendicolare) o 'inter'(intersezione) per descrivere le linee.



Risposte

1. parallele

2. incidenti

3. perpendicolari e incidenti

4. parallele

5. parallele

6. perpendicolari e incidenti

7. incidenti

8. perpendicolari e incidenti

9. incidenti

10. perpendicolari e incidenti

11. incidenti

12. perpendicolari e incidenti

13. parallele

14. incidenti

15. parallele