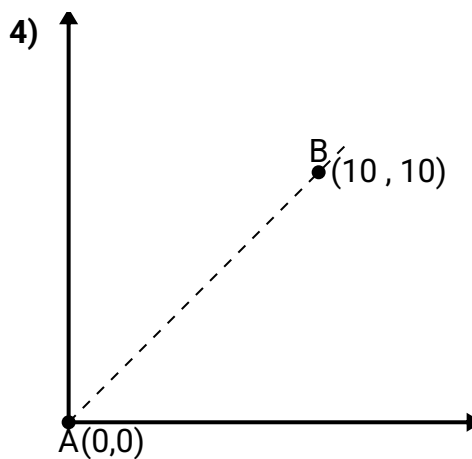
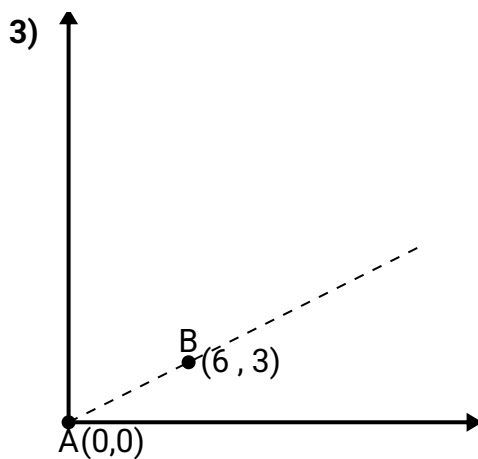
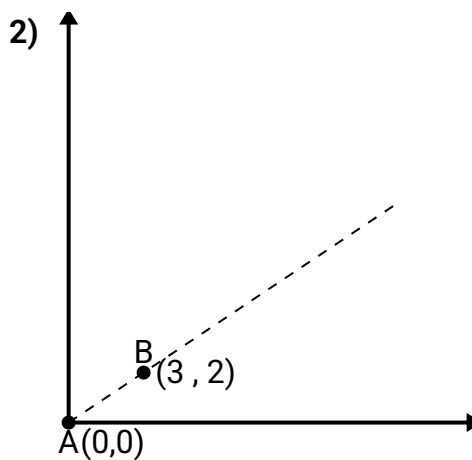
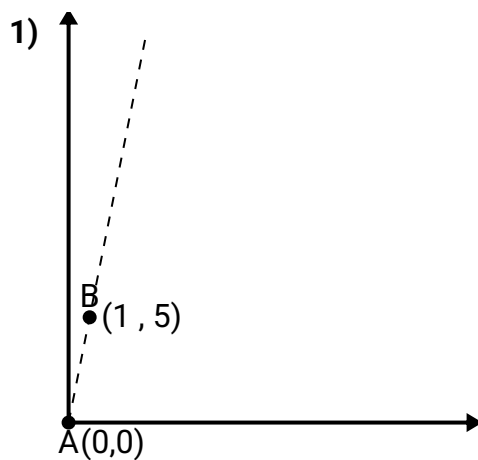




Usa la legge del coseno per trovare l'angolo del punto B rispetto al punto A.

**Risposte**

1. \_\_\_\_\_

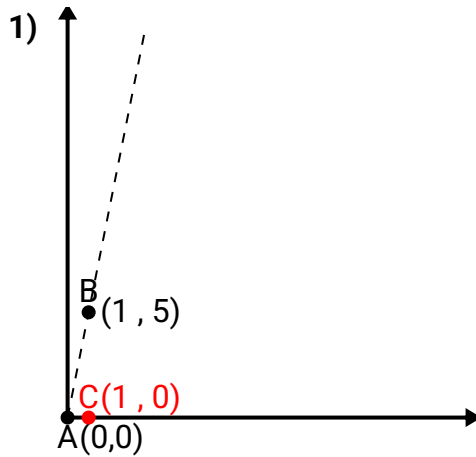
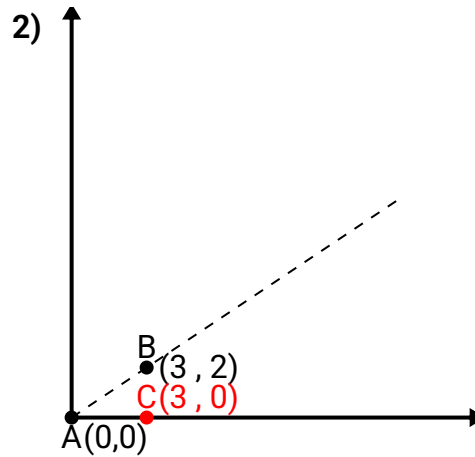
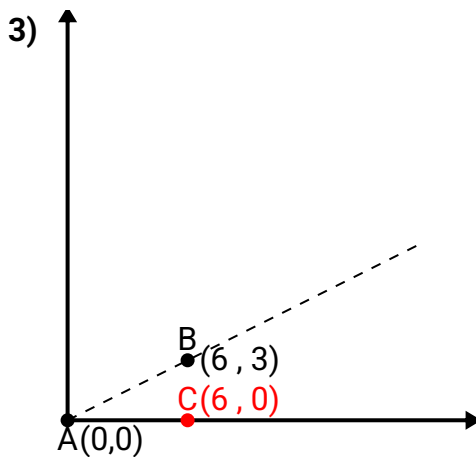
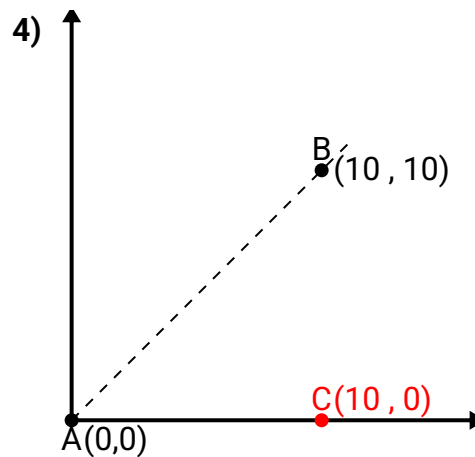
2. \_\_\_\_\_

3. \_\_\_\_\_

4. \_\_\_\_\_



Usa la legge del coseno per trovare l'angolo del punto B rispetto al punto A.

**Risposte** $\overline{AB}$  length = 5.1 $\overline{AC}$  length = 1 $\overline{BC}$  length = 5 $\overline{AB}$  length = 3.61 $\overline{AC}$  length = 3 $\overline{BC}$  length = 2 $\overline{AB}$  length = 6.71 $\overline{AC}$  length = 6 $\overline{BC}$  length = 3 $\overline{AB}$  length = 14.14 $\overline{AC}$  length = 10 $\overline{BC}$  length = 10

1. **78,69**
2. **33,69**
3. **26,57**
4. **45**