



**Risolvi ogni problema.****Risposte**

1) 12:15

A.




B.




2) 6:30

A.




B.




3) 7:00

A.




B.




4) 8:00

A.




B.



5) 2:00

A.




B.




6) 2:00

A.




B.




7) 12:15

A.




B.




8) 2:30

A.



B.




9) 9:30

A.




B.




10) 3:00

A.



B.



11) 6:15

A.



B.




12) 8:45

A.



B.



1. _____

2. _____

3. _____

4. _____

5. _____

6. _____

7. _____

8. _____

9. _____

10. _____

11. _____

12. _____




Risolvi ogni problema.


Risposte

1) 12:15

A.




B.




2) 6:30

A.




B.




3) 7:00

A.




B.




4) 8:00

A.




B.




5) 2:00

A.




B.




6) 2:00

A.




B.




7) 12:15

A.




B.




8) 2:30

A.




B.




9) 9:30

A.




B.




10) 3:00

A.



B.



11) 6:15

A.



B.




12) 8:45

A.



B.

1. **B** 2. **B** 3. **B** 4. **B** 5. **B** 6. **A** 7. **B** 8. **A** 9. **A** 10. **B** 11. **B** 12. **B**