

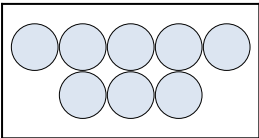
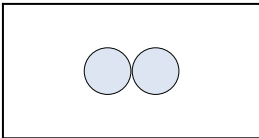








Esprimi il problema visivo come un'equazione con risposta.

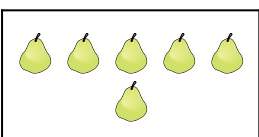

Risposte

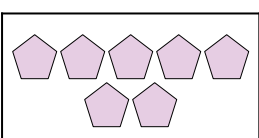
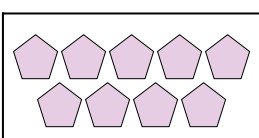
1)  + 

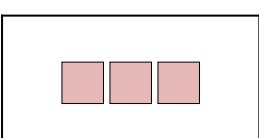
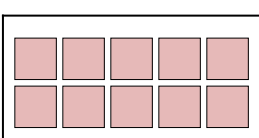
2)  + 

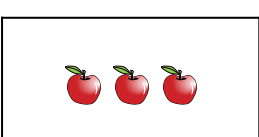
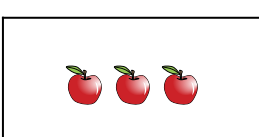
3)  + 

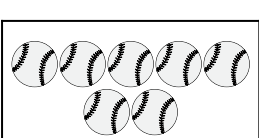
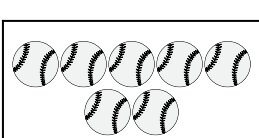
4)  + 

5)  + 

6)  + 

7)  + 

8)  + 

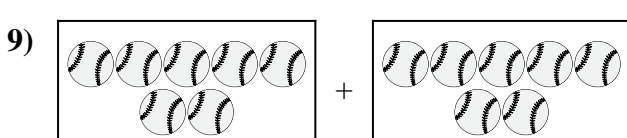
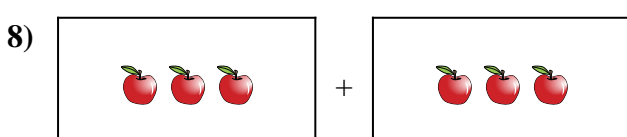
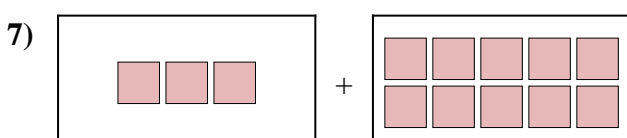
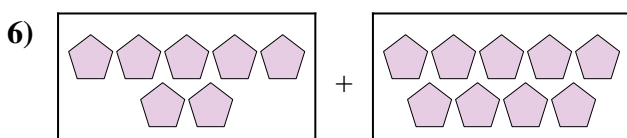
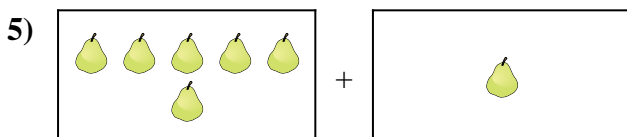
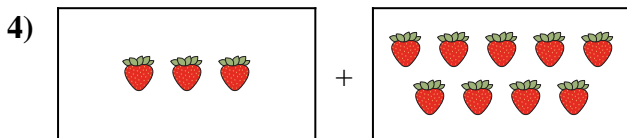
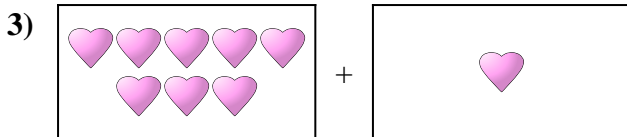
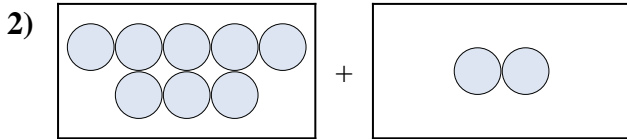

9)  + 

10)  + 

1. _____
2. _____
3. _____
4. _____
5. _____
6. _____
7. _____
8. _____
9. _____
10. _____



Esprimi il problema visivo come un'equazione con risposta.



Risposte

1. $9 + 1 = 10$

2. $8 + 2 = 10$

3. $8 + 1 = 9$

4. $3 + 9 = 12$

5. $6 + 1 = 7$

6. $7 + 9 = 16$

7. $3 + 10 = 13$

8. $3 + 3 = 6$

9. $7 + 7 = 14$

10. $5 + 2 = 7$