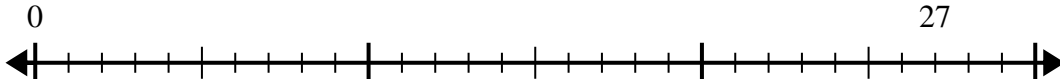


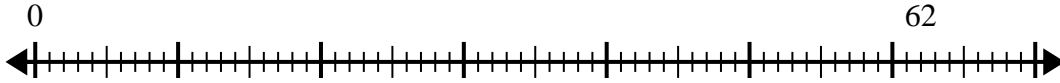


Usa la linea dei numeri per risolvere il problema della divisione.

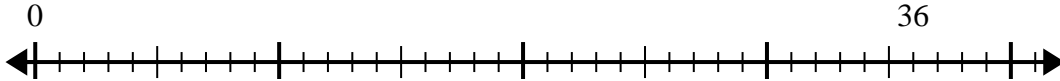
1)  $27:4=$   
0



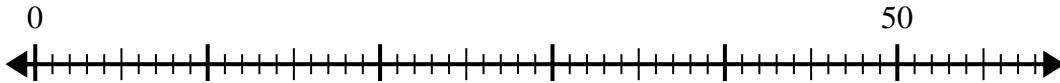
2)  $62:8=$   
0



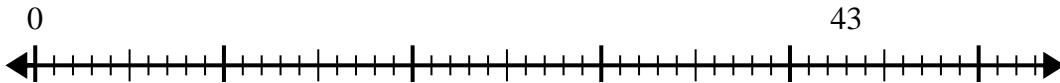
3)  $36:5=$   
0



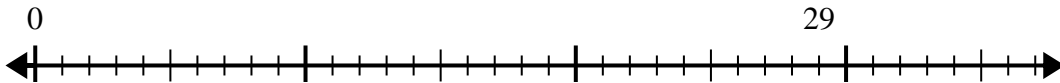
4)  $50:8=$   
0



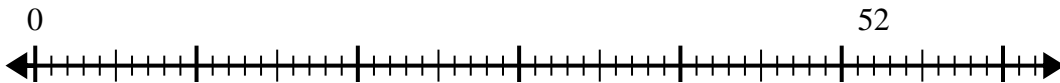
5)  $43:6=$   
0



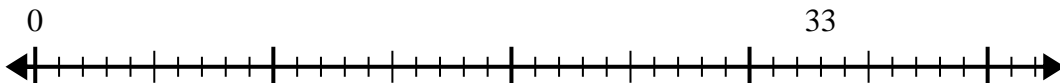
6)  $29:6=$   
0



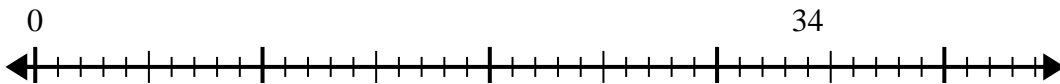
7)  $52:6=$   
0



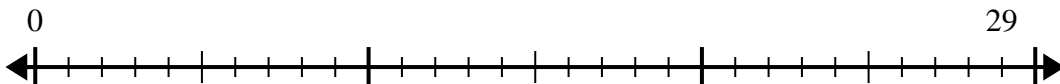
8)  $33:5=$   
0



9)  $34:7=$   
0



10)  $29:4=$   
0



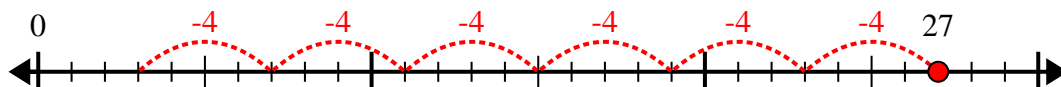
**Risposte**

1. \_\_\_\_\_
2. \_\_\_\_\_
3. \_\_\_\_\_
4. \_\_\_\_\_
5. \_\_\_\_\_
6. \_\_\_\_\_
7. \_\_\_\_\_
8. \_\_\_\_\_
9. \_\_\_\_\_
10. \_\_\_\_\_

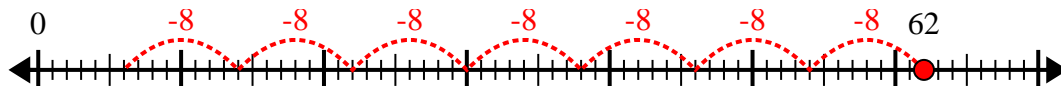


Usa la linea dei numeri per risolvere il problema della divisione.

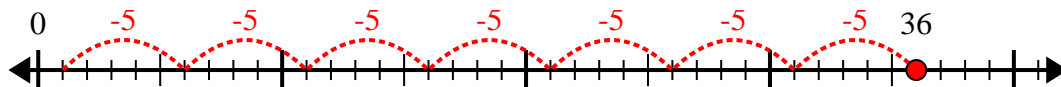
1)  $27:4=$



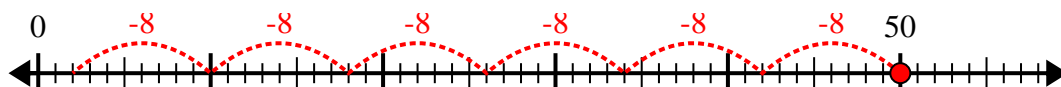
2)  $62:8=$



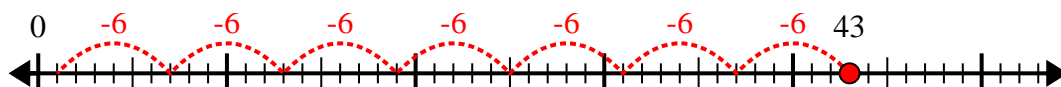
3)  $36:5=$



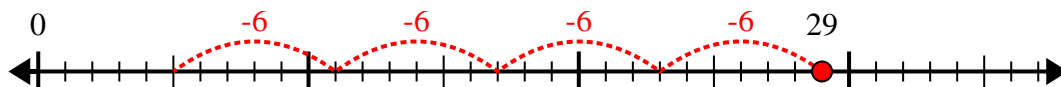
4)  $50:8=$



5)  $43:6=$



6)  $29:6=$



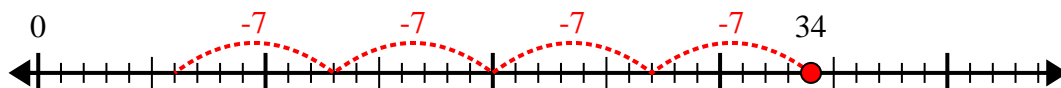
7)  $52:6=$



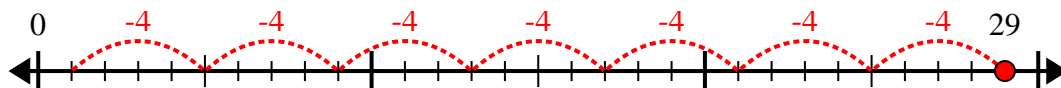
8)  $33:5=$



9)  $34:7=$



10)  $29:4=$



**Risposte**

1. 6r3

2. 7r6

3. 7r1

4. 6r2

5. 7r1

6. 4r5

7. 8r4

8. 6r3

9. 4r6

10. 7r1