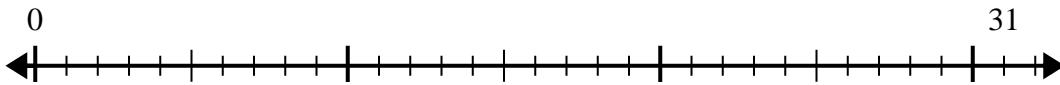


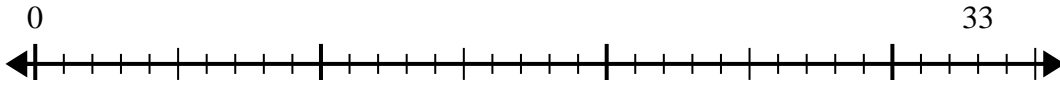


Usa la linea dei numeri per risolvere il problema della divisione.

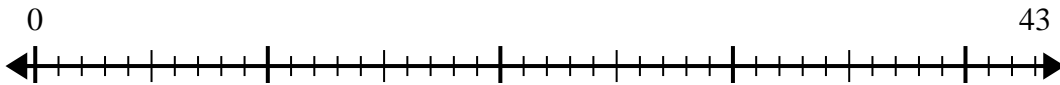
1) $31:6=$



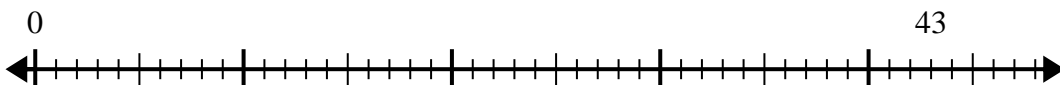
2) $33:4=$



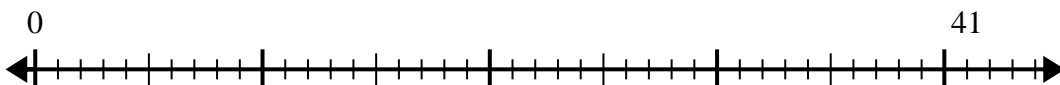
3) $43:7=$



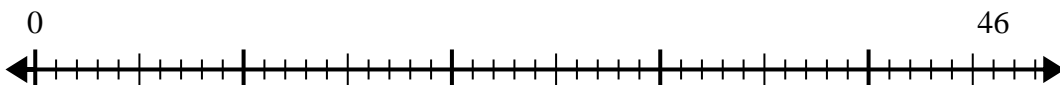
4) $43:5=$



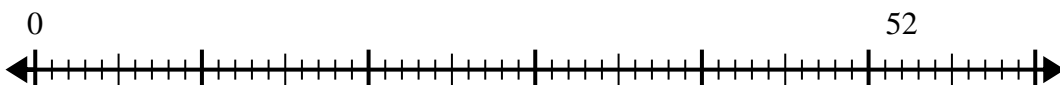
5) $41:8=$



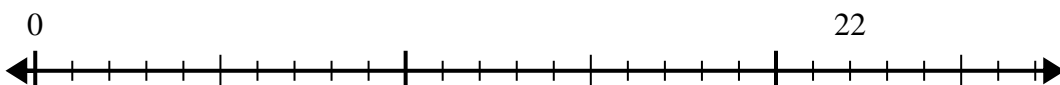
6) $46:6=$



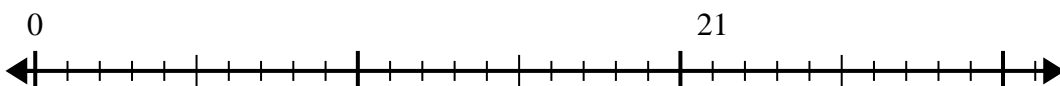
7) $52:6=$



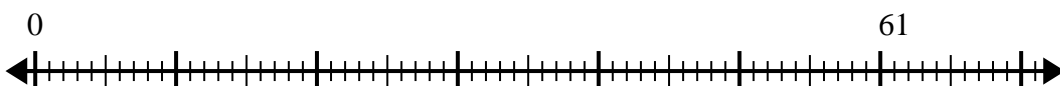
8) $22:4=$



9) $21:5=$



10) $61:8=$



Risposte

1. _____
2. _____
3. _____
4. _____
5. _____
6. _____
7. _____
8. _____
9. _____
10. _____

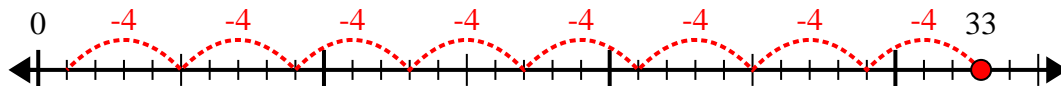


Usa la linea dei numeri per risolvere il problema della divisione.

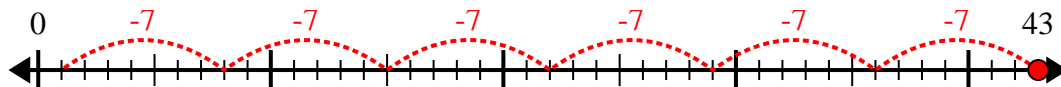
1) $31:6=$



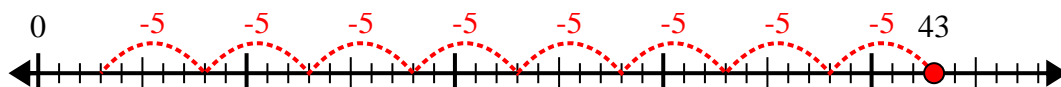
2) $33:4=$



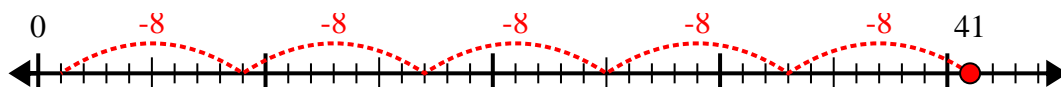
3) $43:7=$



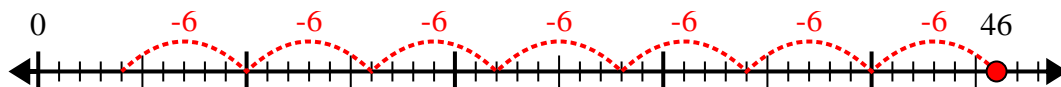
4) $43:5=$



5) $41:8=$



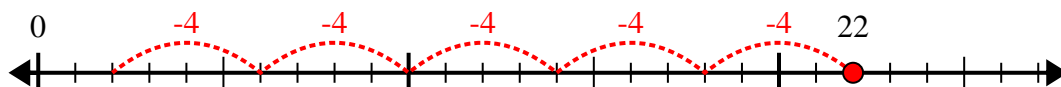
6) $46:6=$



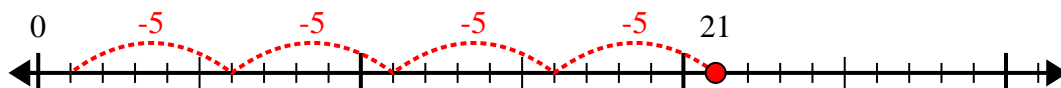
7) $52:6=$



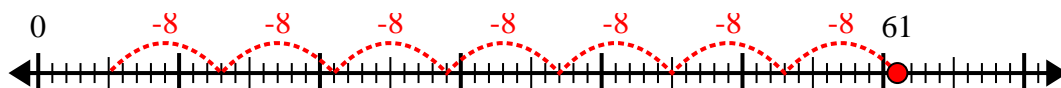
8) $22:4=$



9) $21:5=$



10) $61:8=$



Risposte

1. 5r1

2. 8r1

3. 6r1

4. 8r3

5. 5r1

6. 7r4

7. 8r4

8. 5r2

9. 4r1

10. 7r5