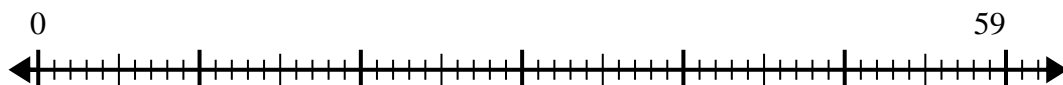


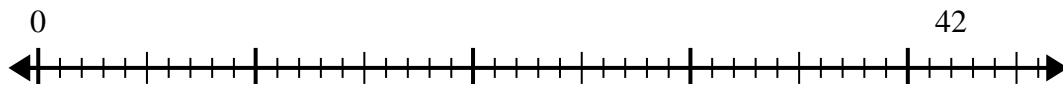


Usa la linea dei numeri per risolvere il problema della divisione.

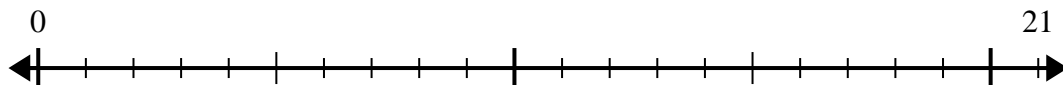
1) $59:7=$



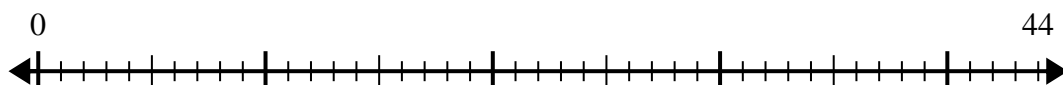
2) $42:5=$



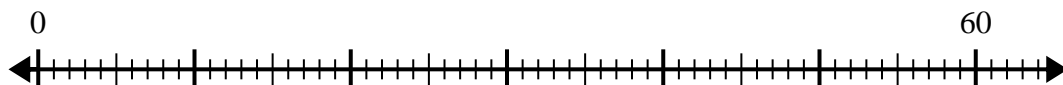
3) $21:4=$



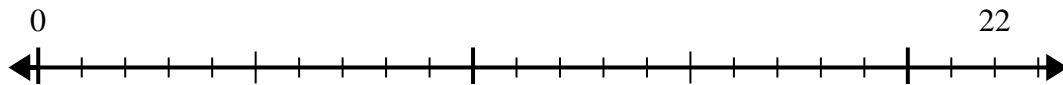
4) $44:7=$



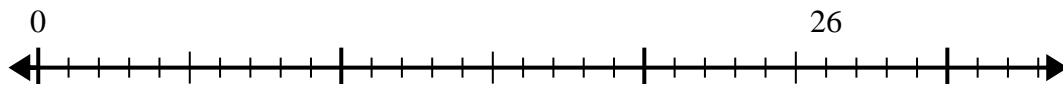
5) $60:8=$



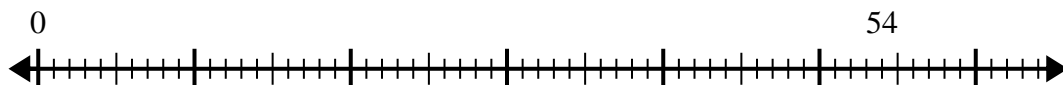
6) $22:5=$



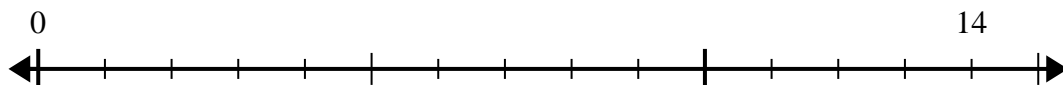
7) $26:4=$



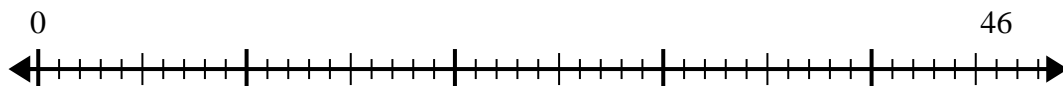
8) $54:8=$



9) $14:4=$



10) $46:6=$



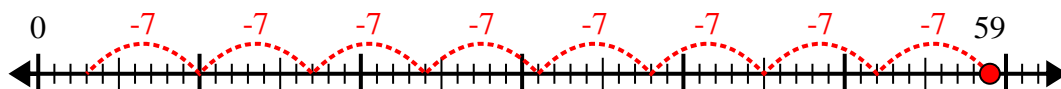
Risposte

- 1. _____
- 2. _____
- 3. _____
- 4. _____
- 5. _____
- 6. _____
- 7. _____
- 8. _____
- 9. _____
- 10. _____

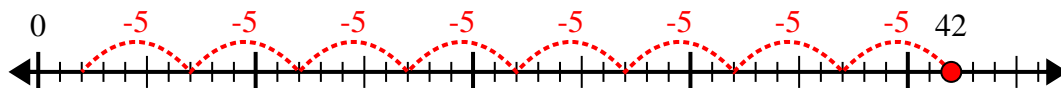


Usa la linea dei numeri per risolvere il problema della divisione.

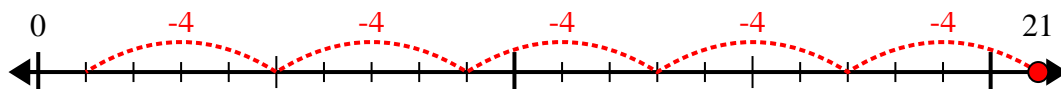
1) $59:7=$



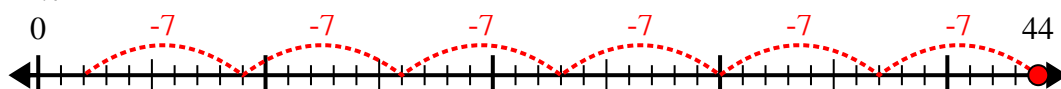
2) $42:5=$



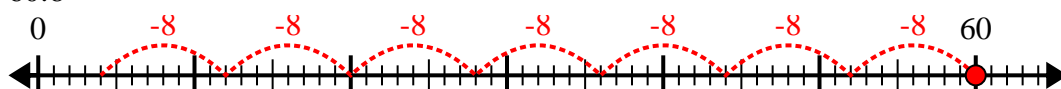
3) $21:4=$



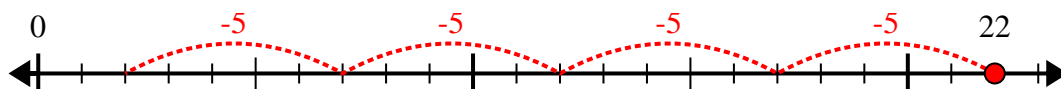
4) $44:7=$



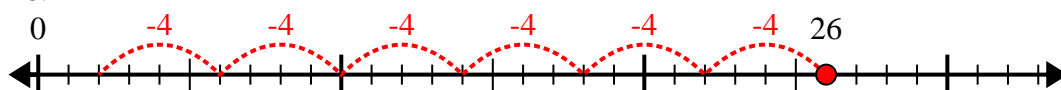
5) $60:8=$



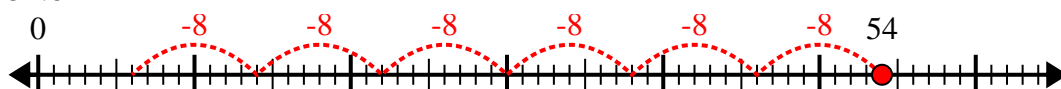
6) $22:5=$



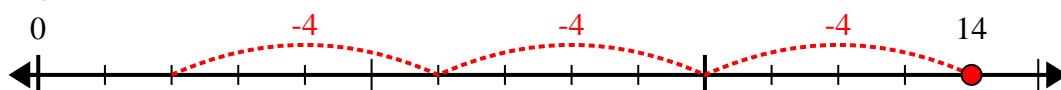
7) $26:4=$



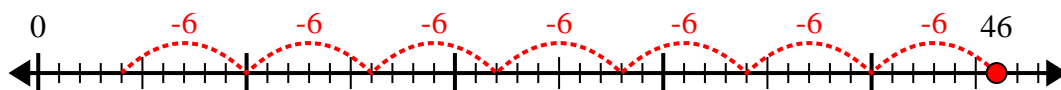
8) $54:8=$



9) $14:4=$



10) $46:6=$



Risposte

1. 8r3

2. 8r2

3. 5r1

4. 6r2

5. 7r4

6. 4r2

7. 6r2

8. 6r6

9. 3r2

10. 7r4