

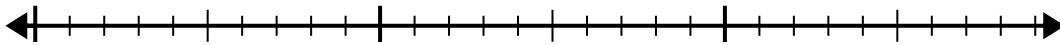


Usa la linea dei numeri per risolvere il problema della divisione.

1) $25:6=$

0

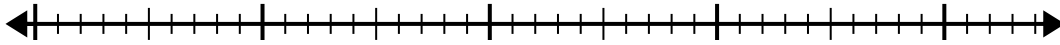
25



2) $38:7=$

0

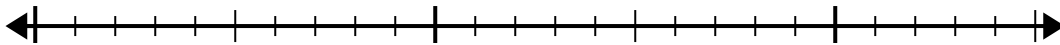
38



3) $20:6=$

0

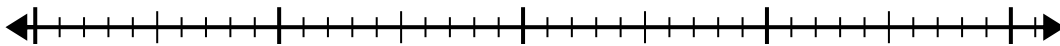
20



4) $35:6=$

0

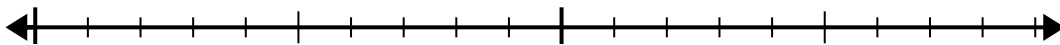
35



5) $18:5=$

0

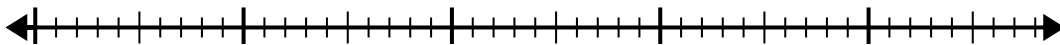
18



6) $46:6=$

0

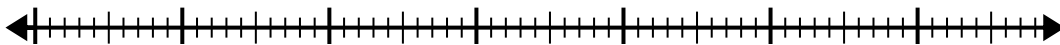
46



7) $60:8=$

0

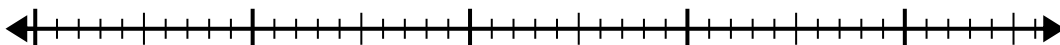
60



8) $45:7=$

0

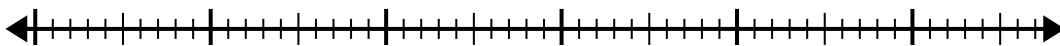
45



9) $53:8=$

0

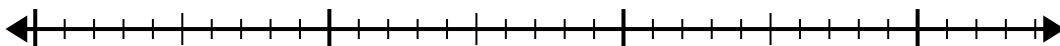
53



10) $29:4=$

0

29



Risposte

1. _____

2. _____

3. _____

4. _____

5. _____

6. _____

7. _____

8. _____

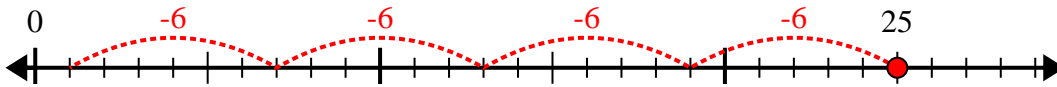
9. _____

10. _____

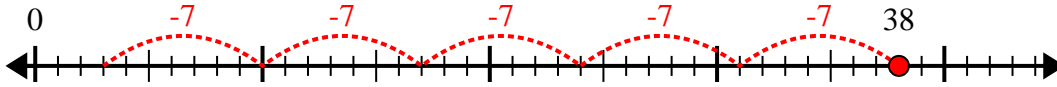


Usa la linea dei numeri per risolvere il problema della divisione.

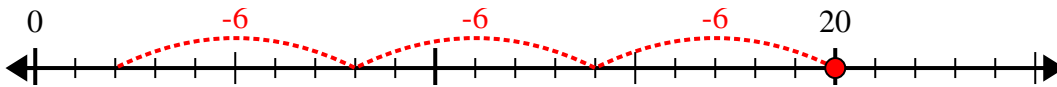
1) $25:6=$



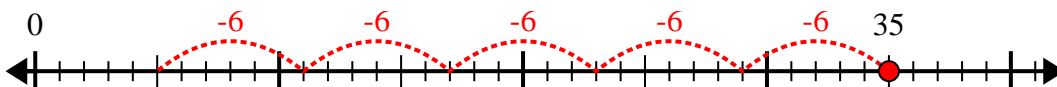
2) $38:7=$



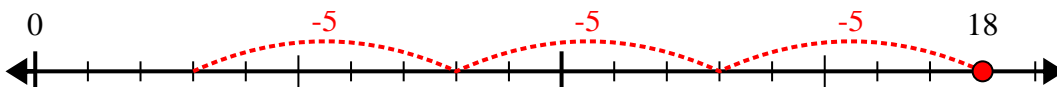
3) $20:6=$



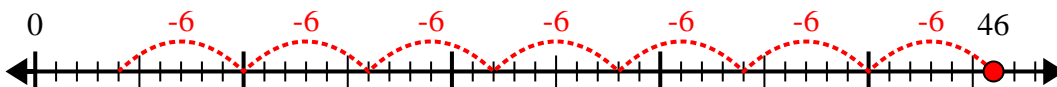
4) $35:6=$



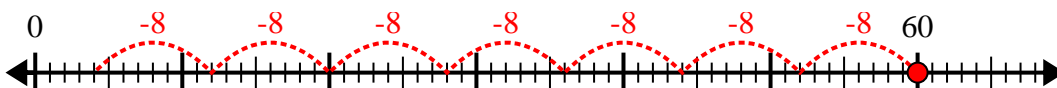
5) $18:5=$



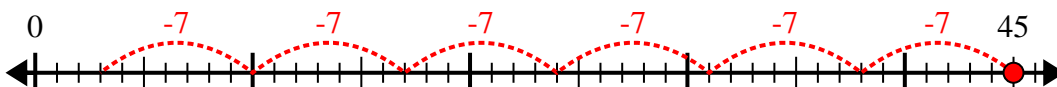
6) $46:6=$



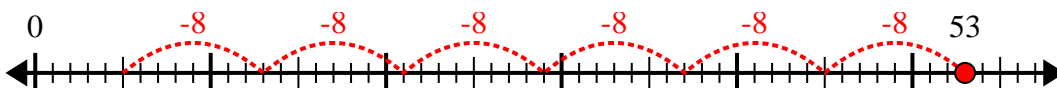
7) $60:8=$



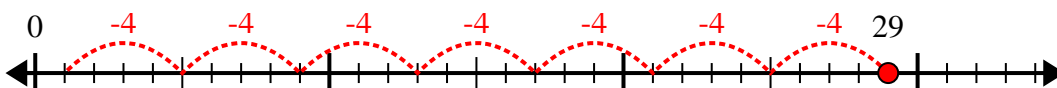
8) $45:7=$



9) $53:8=$



10) $29:4=$



Risposte

1. 4r1

2. 5r3

3. 3r2

4. 5r5

5. 3r3

6. 7r4

7. 7r4

8. 6r3

9. 6r5

10. 7r1