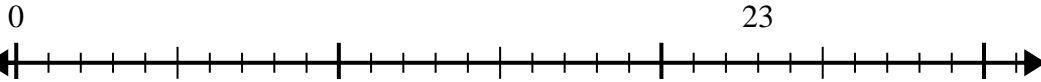


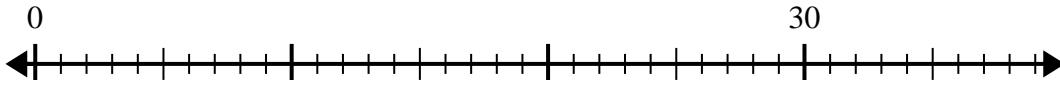


Usa la linea dei numeri per risolvere il problema della divisione.

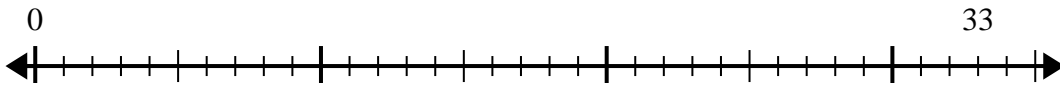
1) $23:5=$



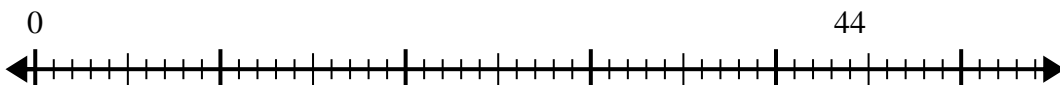
2) $30:4=$



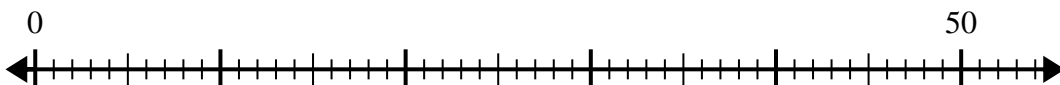
3) $33:6=$



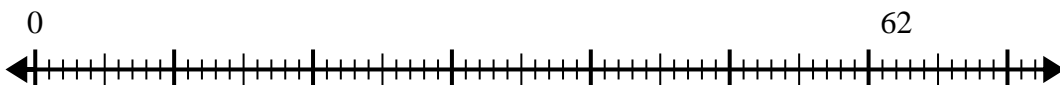
4) $44:6=$



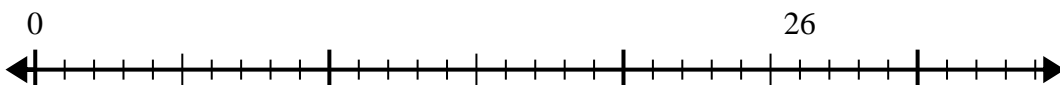
5) $50:6=$



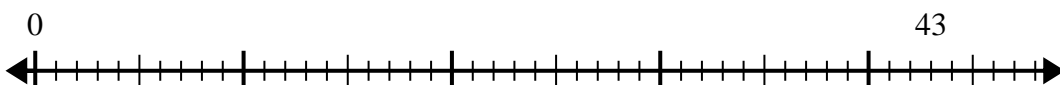
6) $62:8=$



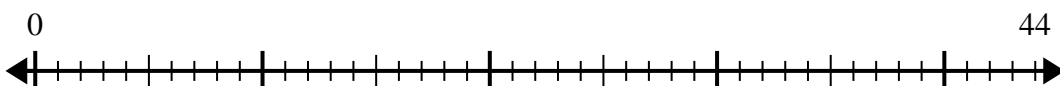
7) $26:6=$



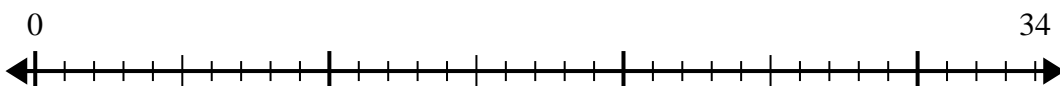
8) $43:8=$



9) $44:7=$



10) $34:4=$



Risposte

1. _____
2. _____
3. _____
4. _____
5. _____
6. _____
7. _____
8. _____
9. _____
10. _____

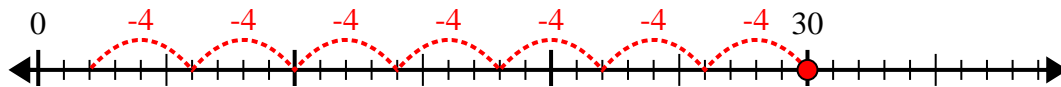


Usa la linea dei numeri per risolvere il problema della divisione.

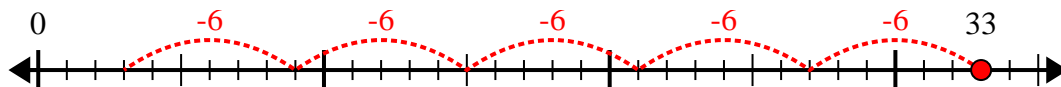
1) $23:5=$



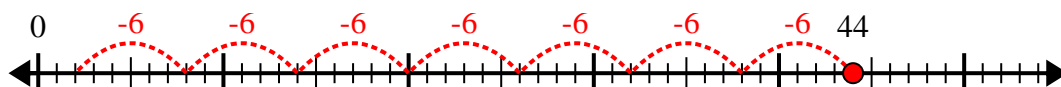
2) $30:4=$



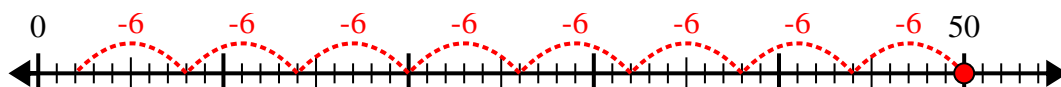
3) $33:6=$



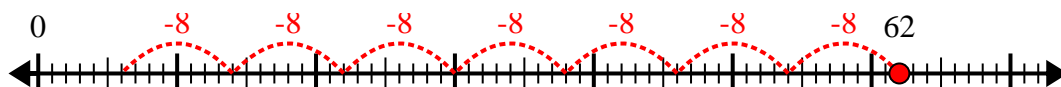
4) $44:6=$



5) $50:6=$



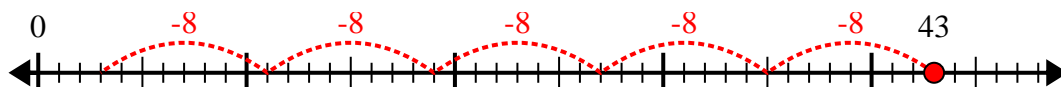
6) $62:8=$



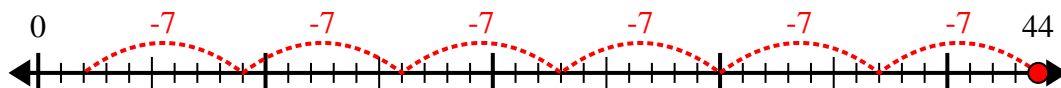
7) $26:6=$



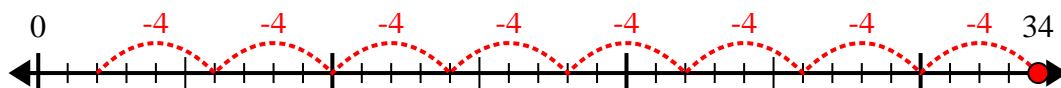
8) $43:8=$



9) $44:7=$



10) $34:4=$



Risposte

1. 4r3

2. 7r2

3. 5r3

4. 7r2

5. 8r2

6. 7r6

7. 4r2

8. 5r3

9. 6r2

10. 8r2