

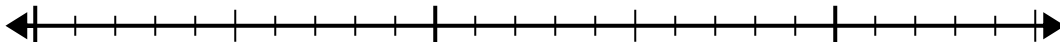


Usa la linea dei numeri per risolvere il problema della divisione.

1) $21:5=$

0

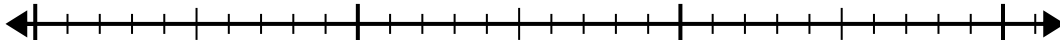
21



2) $25:6=$

0

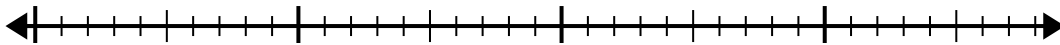
25



3) $38:8=$

0

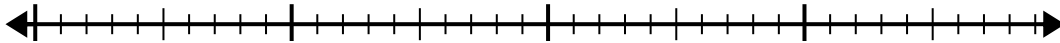
38



4) $29:7=$

0

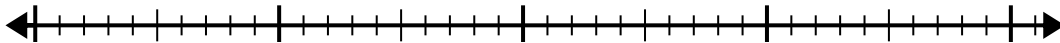
29



5) $39:5=$

0

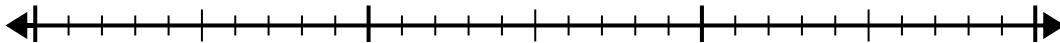
39



6) $29:4=$

0

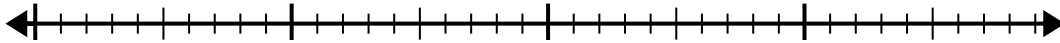
29



7) $32:6=$

0

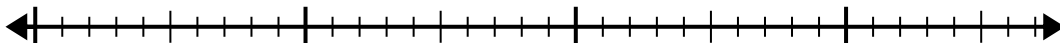
32



8) $33:4=$

0

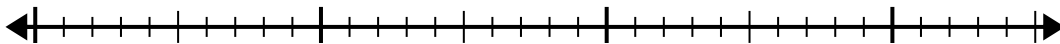
33



9) $25:4=$

0

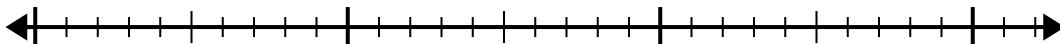
25



10) $26:7=$

0

26



Risposte

1. _____

2. _____

3. _____

4. _____

5. _____

6. _____

7. _____

8. _____

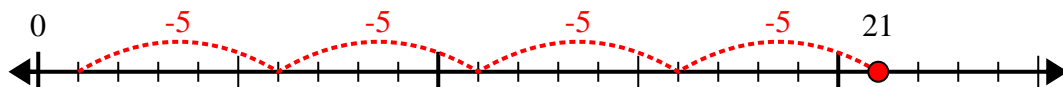
9. _____

10. _____

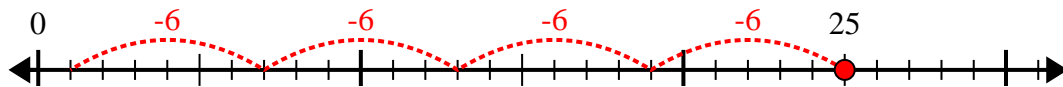


Usa la linea dei numeri per risolvere il problema della divisione.

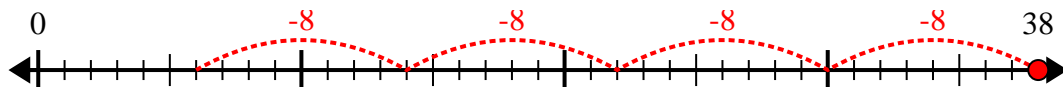
1) $21:5=$



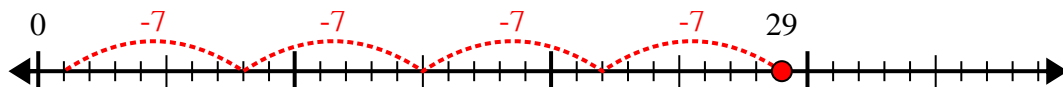
2) $25:6=$



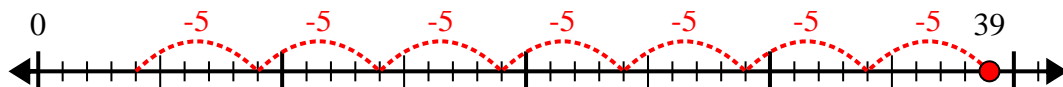
3) $38:8=$



4) $29:7=$



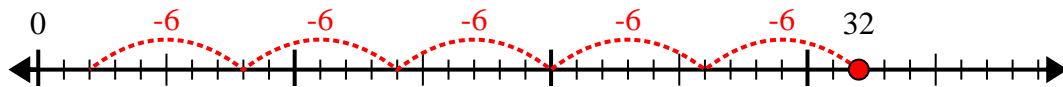
5) $39:5=$



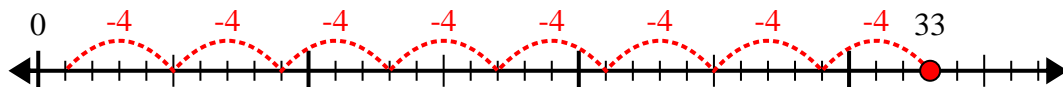
6) $29:4=$



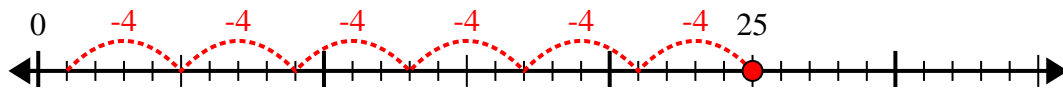
7) $32:6=$



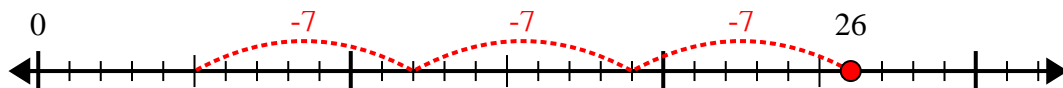
8) $33:4=$



9) $25:4=$



10) $26:7=$



Risposte

1. 4r1

2. 4r1

3. 4r6

4. 4r1

5. 7r4

6. 7r1

7. 5r2

8. 8r1

9. 6r1

10. 3r5