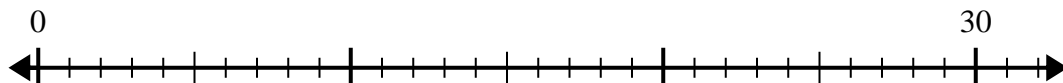


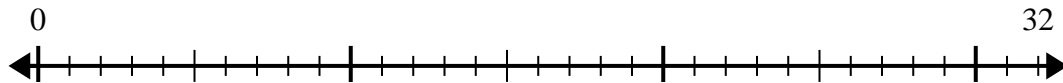


Usa la linea dei numeri per risolvere il problema della divisione.

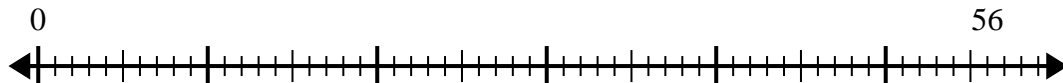
1) $30:5=$



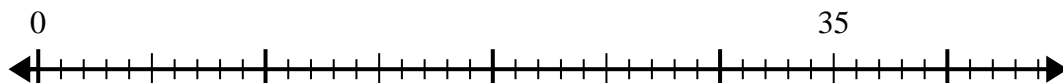
2) $32:4=$



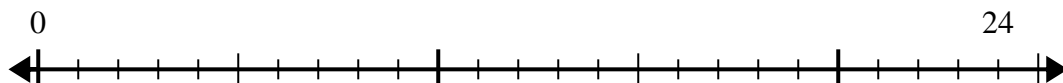
3) $56:7=$



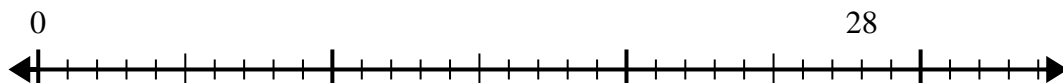
4) $35:7=$



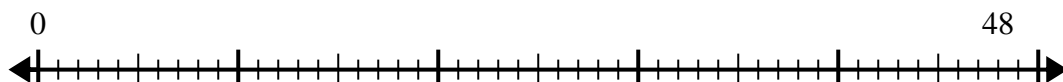
5) $24:6=$



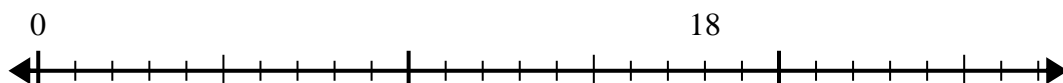
6) $28:4=$



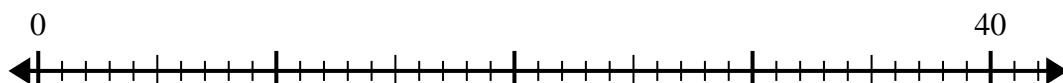
7) $48:6=$



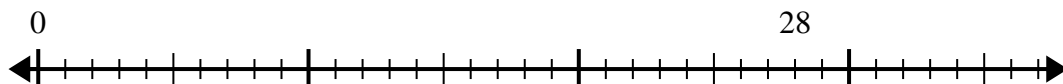
8) $18:6=$



9) $40:5=$



10) $28:7=$



Risposte

1. _____

2. _____

3. _____

4. _____

5. _____

6. _____

7. _____

8. _____

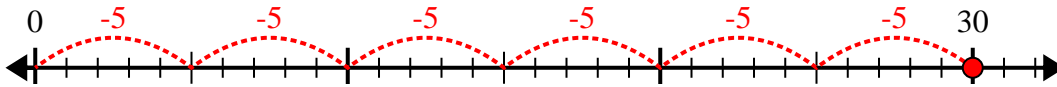
9. _____

10. _____

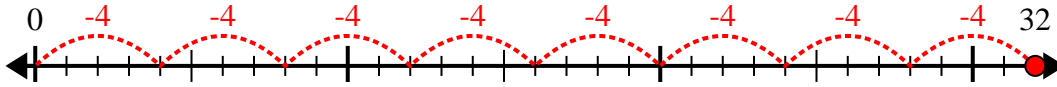


Usa la linea dei numeri per risolvere il problema della divisione.

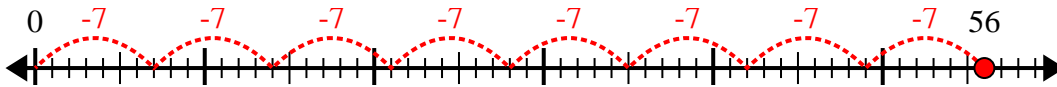
1) $30:5=$



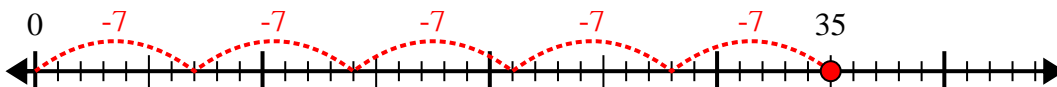
2) $32:4=$



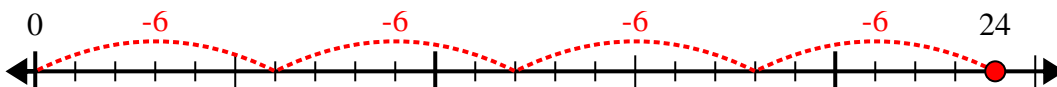
3) $56:7=$



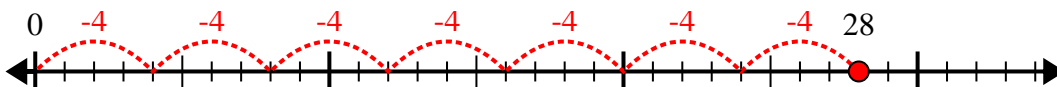
4) $35:7=$



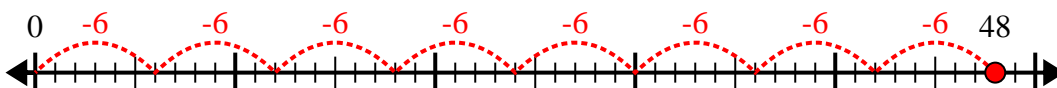
5) $24:6=$



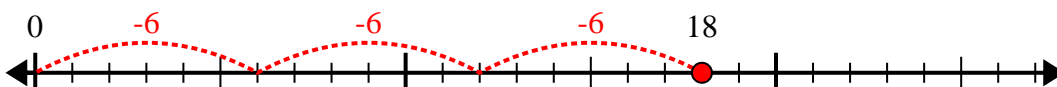
6) $28:4=$



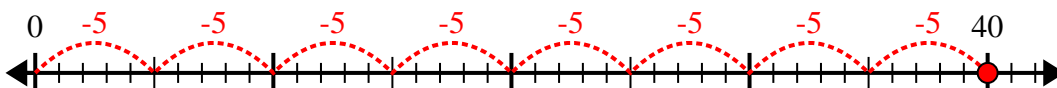
7) $48:6=$



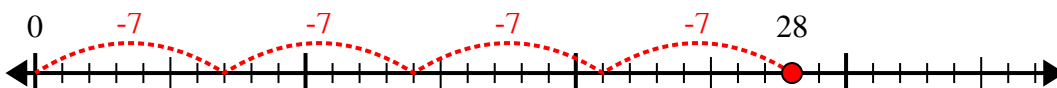
8) $18:6=$



9) $40:5=$



10) $28:7=$



Risposte

1. 6

2. 8

3. 8

4. 5

5. 4

6. 7

7. 8

8. 3

9. 8

10. 4