

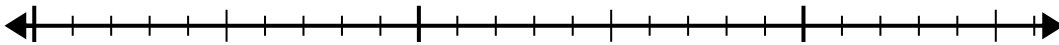


Usa la linea dei numeri per risolvere il problema della divisione.

1)  $20:5=$

0

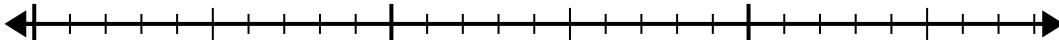
20



2)  $24:6=$

0

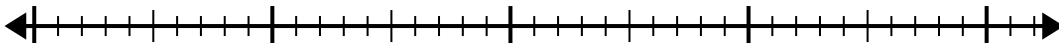
24



3)  $32:8=$

0

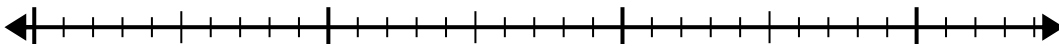
32



4)  $28:7=$

0

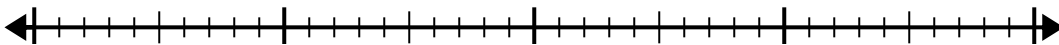
28



5)  $35:5=$

0

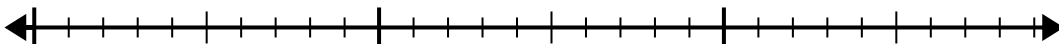
35



6)  $28:4=$

0

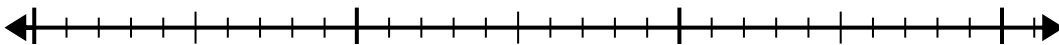
28



7)  $30:6=$

0

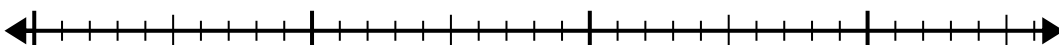
30



8)  $32:4=$

0

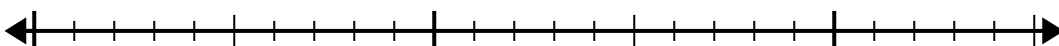
32



9)  $24:4=$

0

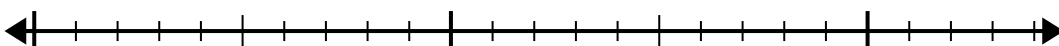
24



10)  $21:7=$

0

21



**Risposte**

1. \_\_\_\_\_

2. \_\_\_\_\_

3. \_\_\_\_\_

4. \_\_\_\_\_

5. \_\_\_\_\_

6. \_\_\_\_\_

7. \_\_\_\_\_

8. \_\_\_\_\_

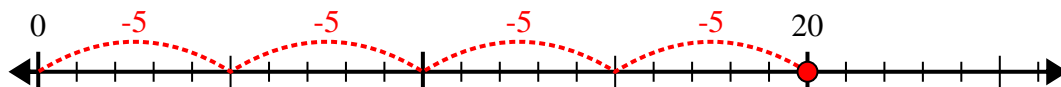
9. \_\_\_\_\_

10. \_\_\_\_\_

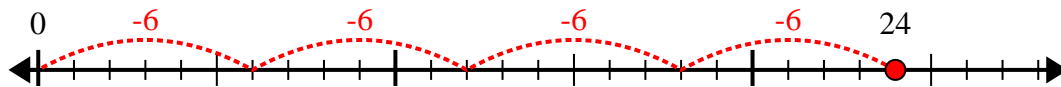


Usa la linea dei numeri per risolvere il problema della divisione.

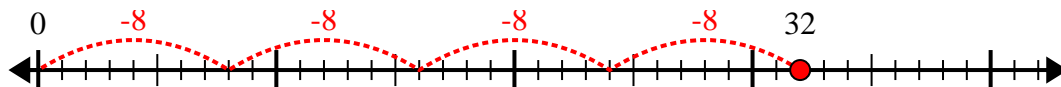
1)  $20:5=$



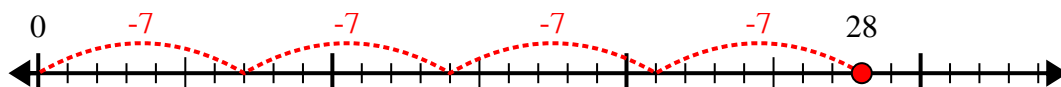
2)  $24:6=$



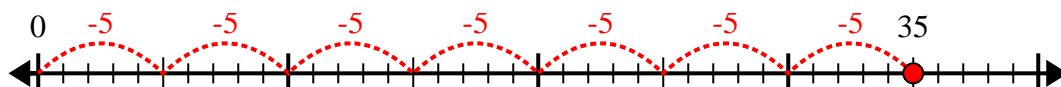
3)  $32:8=$



4)  $28:7=$



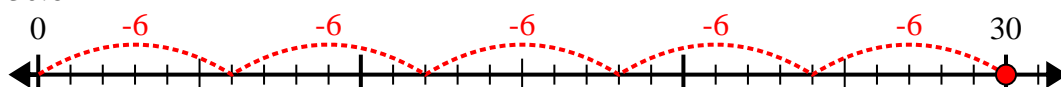
5)  $35:5=$



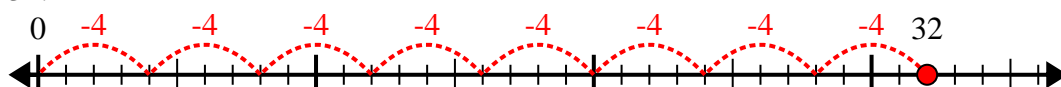
6)  $28:4=$



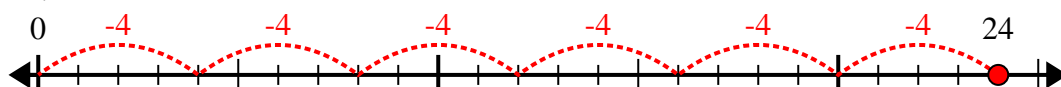
7)  $30:6=$



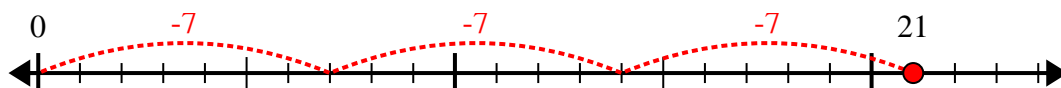
8)  $32:4=$



9)  $24:4=$



10)  $21:7=$



**Risposte**

1. 4

2. 4

3. 4

4. 4

5. 7

6. 7

7. 5

8. 8

9. 6

10. 3

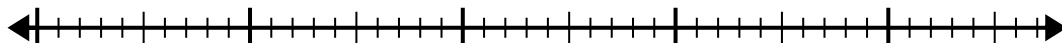


Usa la linea dei numeri per risolvere il problema della divisione.

1)  $40:5=$

0

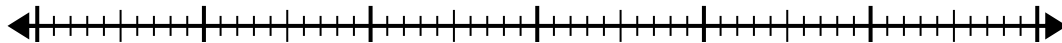
40



2)  $56:7=$

0

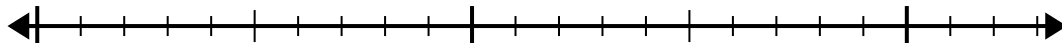
56



3)  $15:5=$

0

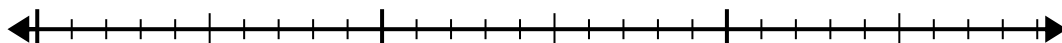
15



4)  $28:4=$

0

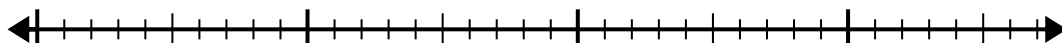
28



5)  $35:7=$

0

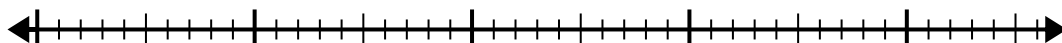
35



6)  $40:8=$

0

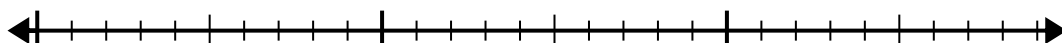
40



7)  $24:4=$

0

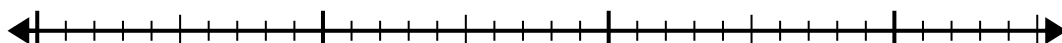
24



8)  $30:5=$

0

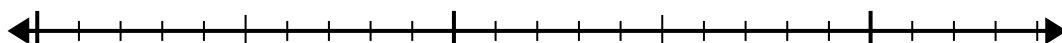
30



9)  $20:4=$

0

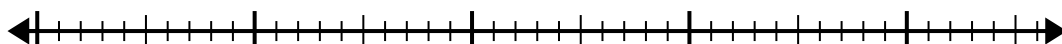
20



10)  $42:6=$

0

42



**Risposte**

1. \_\_\_\_\_

2. \_\_\_\_\_

3. \_\_\_\_\_

4. \_\_\_\_\_

5. \_\_\_\_\_

6. \_\_\_\_\_

7. \_\_\_\_\_

8. \_\_\_\_\_

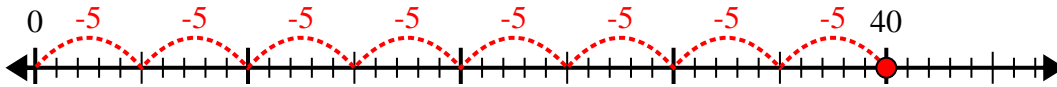
9. \_\_\_\_\_

10. \_\_\_\_\_

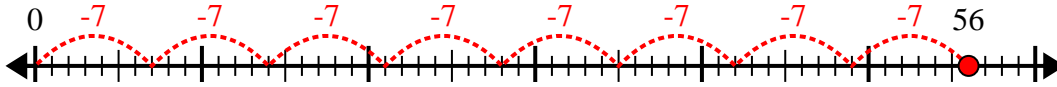


Usa la linea dei numeri per risolvere il problema della divisione.

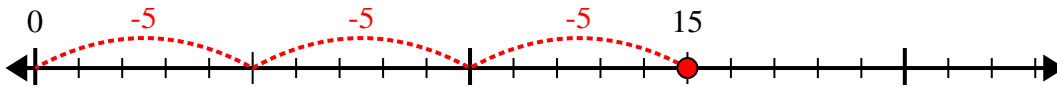
1)  $40:5=$



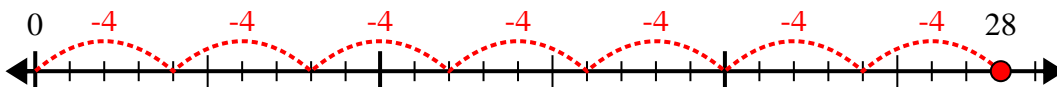
2)  $56:7=$



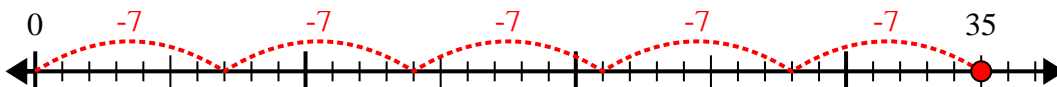
3)  $15:5=$



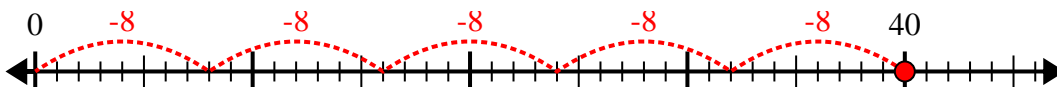
4)  $28:4=$



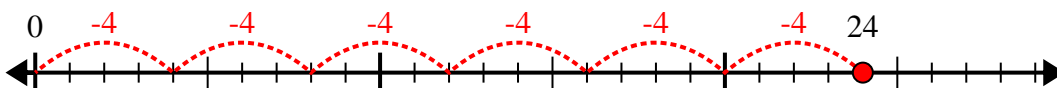
5)  $35:7=$



6)  $40:8=$



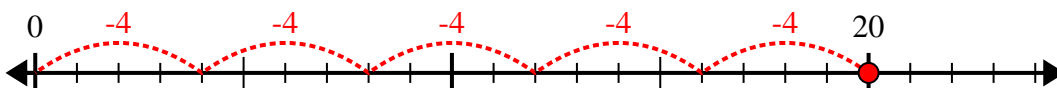
7)  $24:4=$



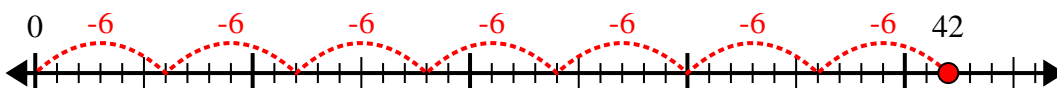
8)  $30:5=$



9)  $20:4=$



10)  $42:6=$



**Risposte**

1. 8

2. 8

3. 3

4. 7

5. 5

6. 5

7. 6

8. 6

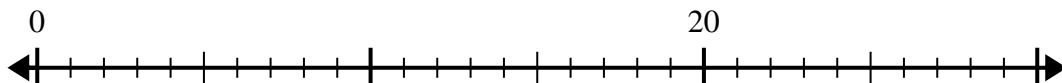
9. 5

10. 7

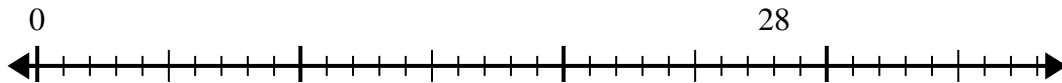


Usa la linea dei numeri per risolvere il problema della divisione.

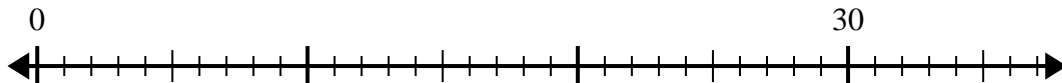
1)  $20:5=$



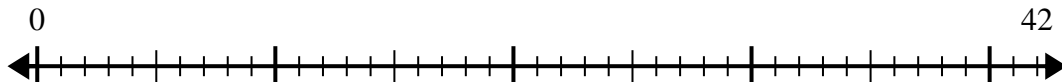
2)  $28:4=$



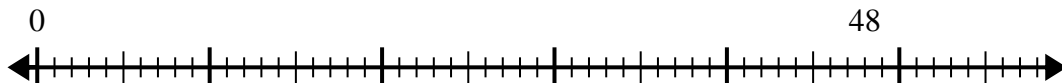
3)  $30:6=$



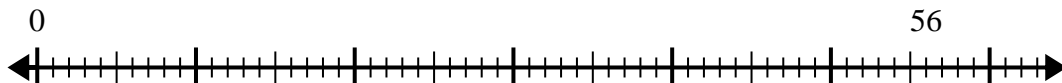
4)  $42:6=$



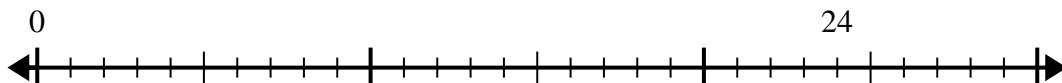
5)  $48:6=$



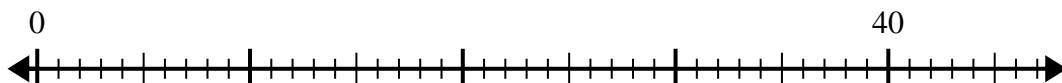
6)  $56:8=$



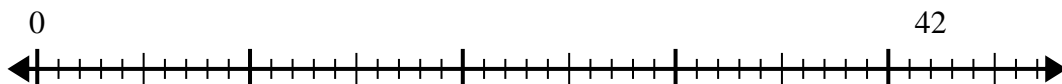
7)  $24:6=$



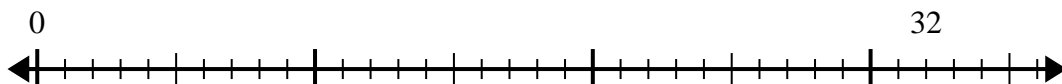
8)  $40:8=$



9)  $42:7=$



10)  $32:4=$



**Risposte**

1. \_\_\_\_\_

2. \_\_\_\_\_

3. \_\_\_\_\_

4. \_\_\_\_\_

5. \_\_\_\_\_

6. \_\_\_\_\_

7. \_\_\_\_\_

8. \_\_\_\_\_

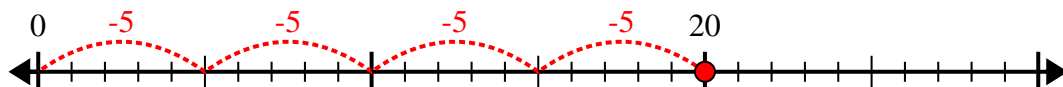
9. \_\_\_\_\_

10. \_\_\_\_\_

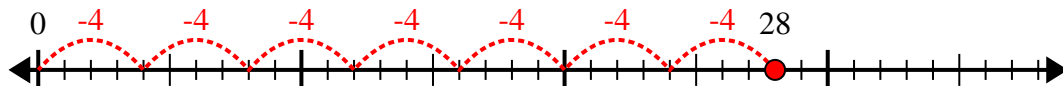


Usa la linea dei numeri per risolvere il problema della divisione.

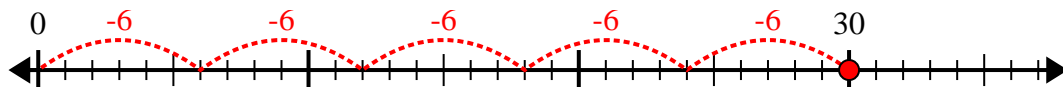
1)  $20:5=$



2)  $28:4=$



3)  $30:6=$



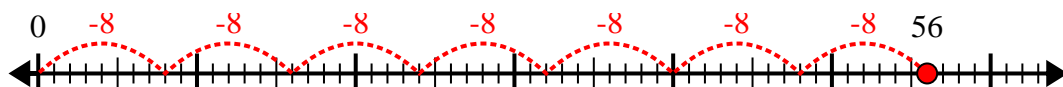
4)  $42:6=$



5)  $48:6=$



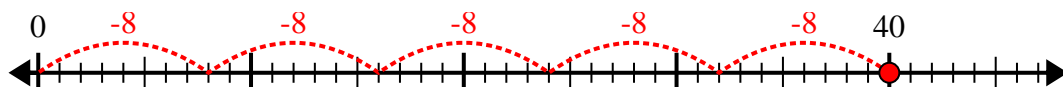
6)  $56:8=$



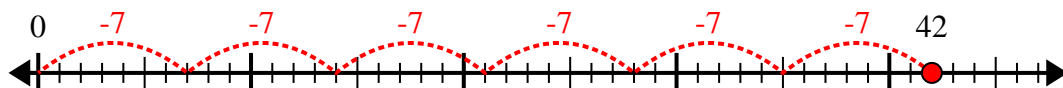
7)  $24:6=$



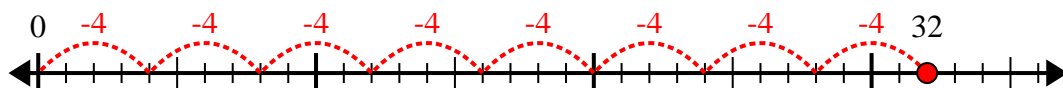
8)  $40:8=$



9)  $42:7=$



10)  $32:4=$



**Risposte**

1. 4

2. 7

3. 5

4. 7

5. 8

6. 7

7. 4

8. 5

9. 6

10. 8

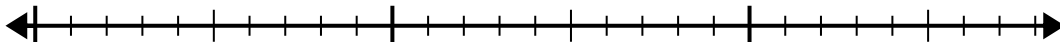


Usa la linea dei numeri per risolvere il problema della divisione.

1)  $24:6=$

0

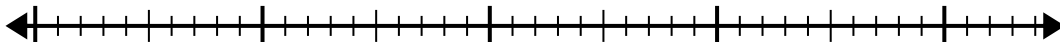
24



2)  $35:7=$

0

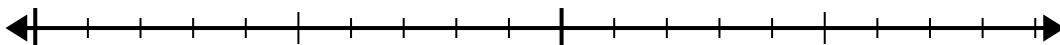
35



3)  $18:6=$

0

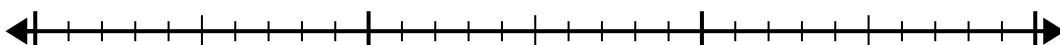
18



4)  $30:6=$

0

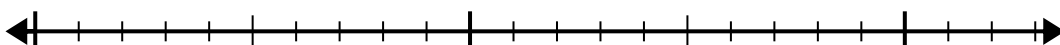
30



5)  $15:5=$

0

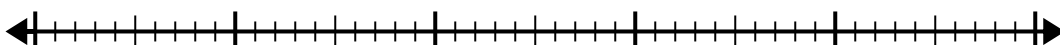
15



6)  $42:6=$

0

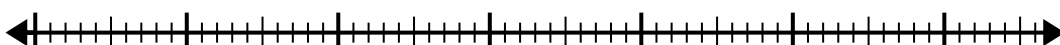
42



7)  $56:8=$

0

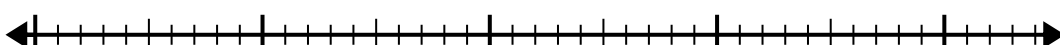
56



8)  $42:7=$

0


42



9)  $48:8=$

0

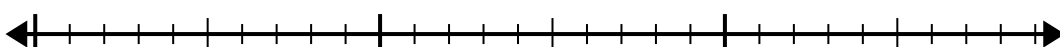
48



10)  $28:4=$

0

28

**Risposte**

1. \_\_\_\_\_

2. \_\_\_\_\_

3. \_\_\_\_\_

4. \_\_\_\_\_

5. \_\_\_\_\_

6. \_\_\_\_\_

7. \_\_\_\_\_

8. \_\_\_\_\_

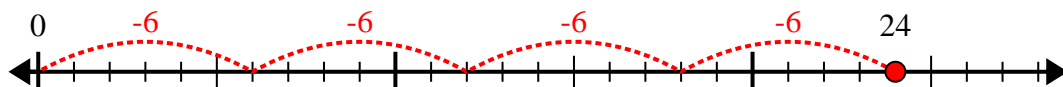
9. \_\_\_\_\_

10. \_\_\_\_\_

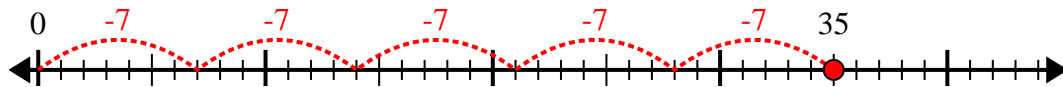


Usa la linea dei numeri per risolvere il problema della divisione.

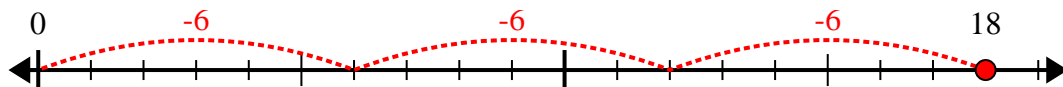
1)  $24:6=$



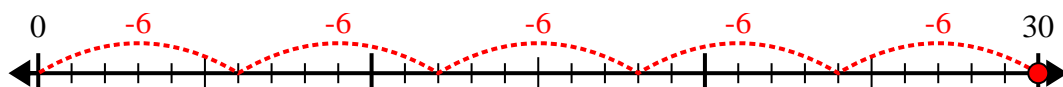
2)  $35:7=$



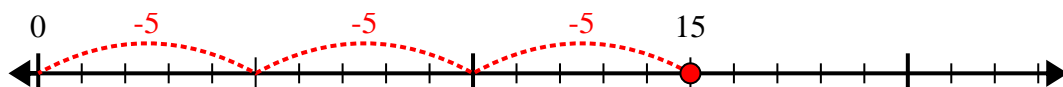
3)  $18:6=$



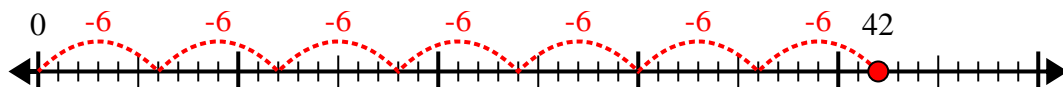
4)  $30:6=$



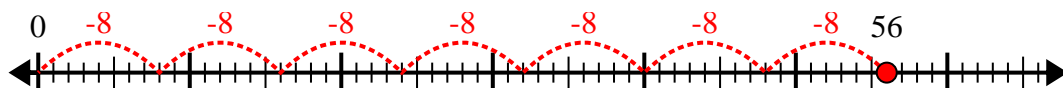
5)  $15:5=$



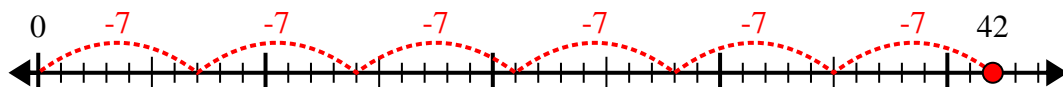
6)  $42:6=$



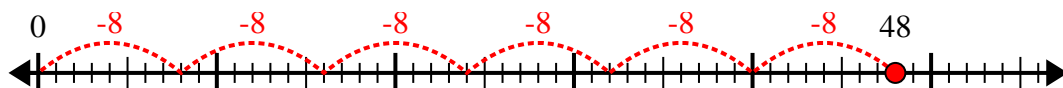
7)  $56:8=$



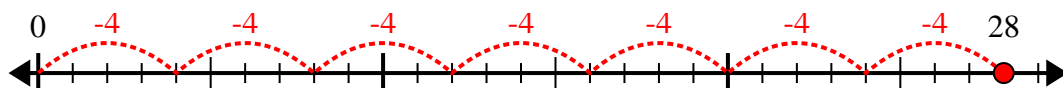
8)  $42:7=$



9)  $48:8=$



10)  $28:4=$



**Risposte**

1. 4

2. 5

3. 3

4. 5

5. 3

6. 7

7. 7

8. 6

9. 6

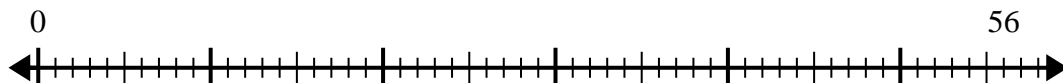
10. 7



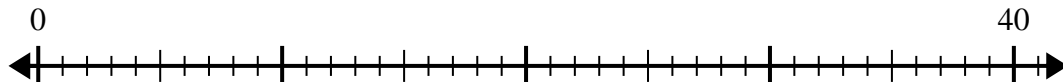


Usa la linea dei numeri per risolvere il problema della divisione.

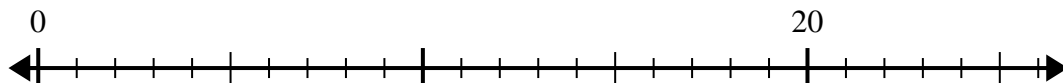
1)  $56:7=$



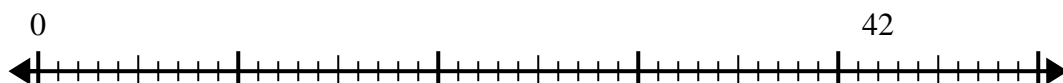
2)  $40:5=$



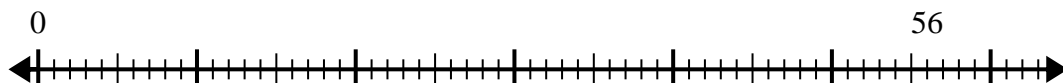
3)  $20:4=$



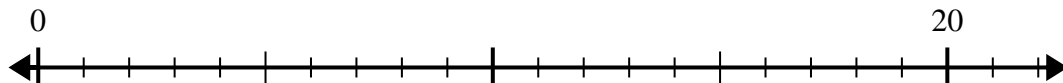
4)  $42:7=$



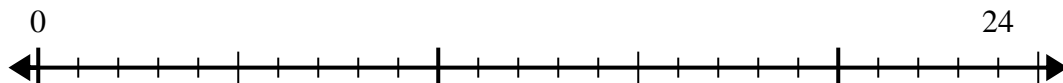
5)  $56:8=$



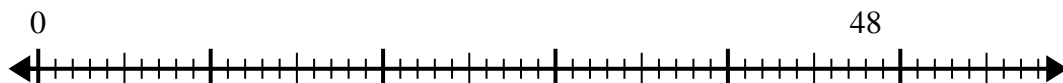
6)  $20:5=$



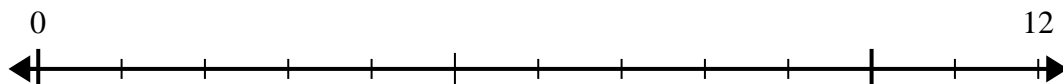
7)  $24:4=$



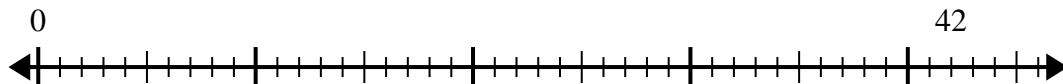
8)  $48:8=$



9)  $12:4=$



10)  $42:6=$

**Risposte**

1. \_\_\_\_\_

2. \_\_\_\_\_

3. \_\_\_\_\_

4. \_\_\_\_\_

5. \_\_\_\_\_

6. \_\_\_\_\_

7. \_\_\_\_\_

8. \_\_\_\_\_

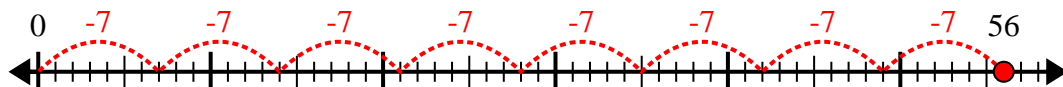
9. \_\_\_\_\_

10. \_\_\_\_\_

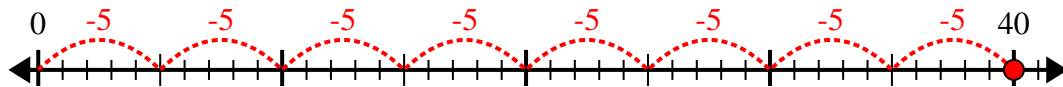


Usa la linea dei numeri per risolvere il problema della divisione.

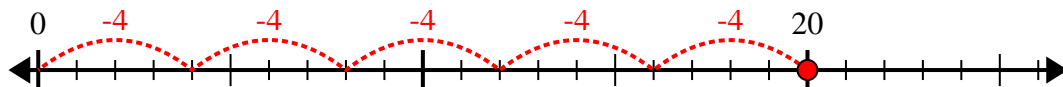
1)  $56:7=$



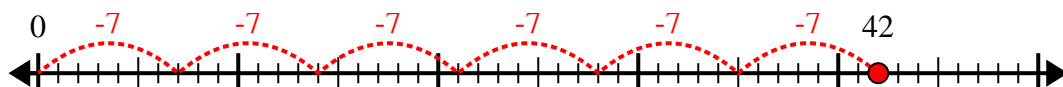
2)  $40:5=$



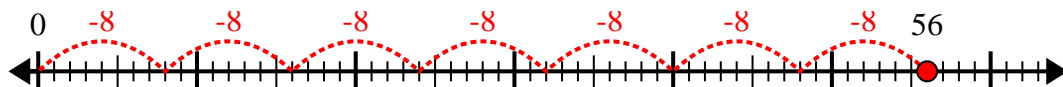
3)  $20:4=$



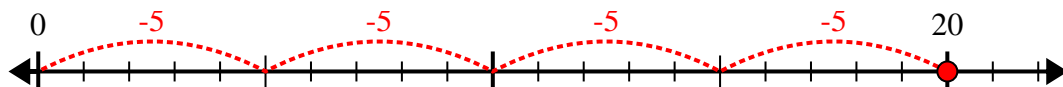
4)  $42:7=$



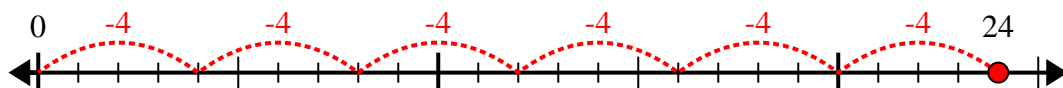
5)  $56:8=$



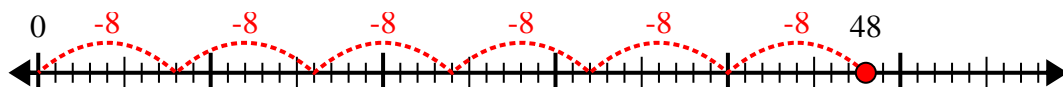
6)  $20:5=$



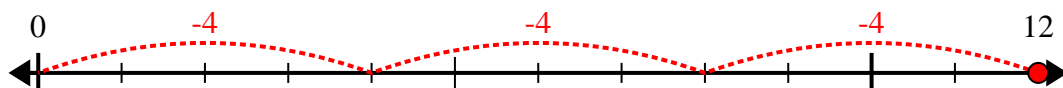
7)  $24:4=$



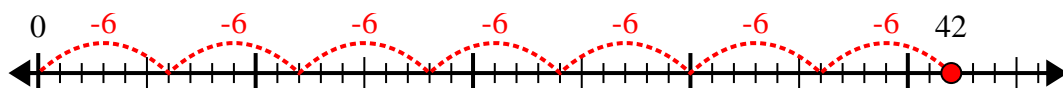
8)  $48:8=$



9)  $12:4=$



10)  $42:6=$



**Risposte**

1. 8

2. 8

3. 5

4. 6

5. 7

6. 4

7. 6

8. 6

9. 3

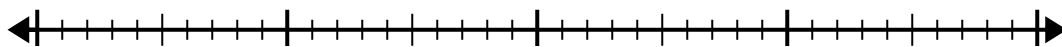
10. 7



Usa la linea dei numeri per risolvere il problema della divisione.

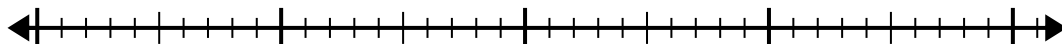
1)  $30:6=$

0 30



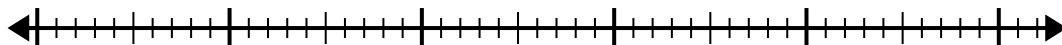
2)  $32:4=$

0 32



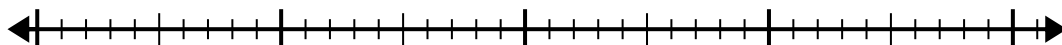
3)  $42:7=$

0 42



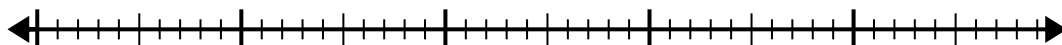
4)  $40:5=$

0 40



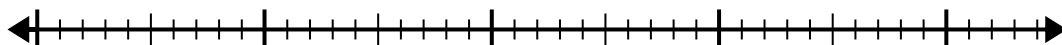
5)  $40:8=$

0 40



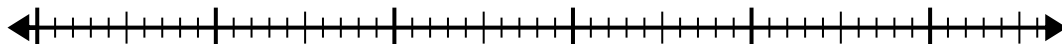
6)  $42:6=$

0 42



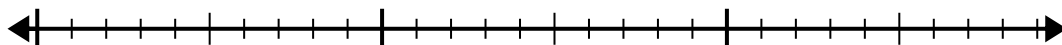
7)  $48:6=$

0 48



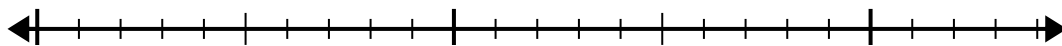
8)  $20:4=$

0 20



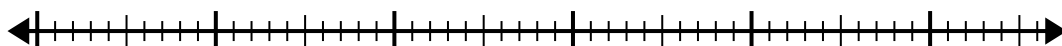
9)  $20:5=$

0 20



10)  $56:8=$

0 56



**Risposte**

1. \_\_\_\_\_

2. \_\_\_\_\_

3. \_\_\_\_\_

4. \_\_\_\_\_

5. \_\_\_\_\_

6. \_\_\_\_\_

7. \_\_\_\_\_

8. \_\_\_\_\_

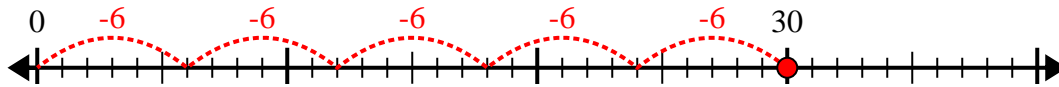
9. \_\_\_\_\_

10. \_\_\_\_\_

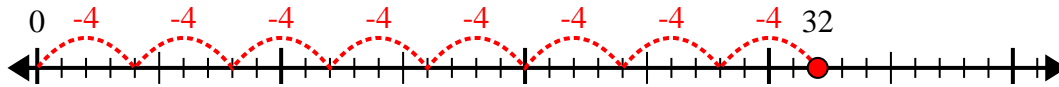


Usa la linea dei numeri per risolvere il problema della divisione.

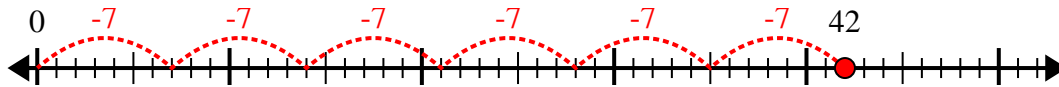
1)  $30:6=$



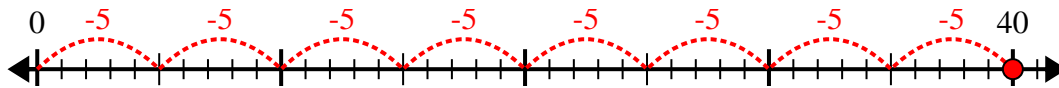
2)  $32:4=$



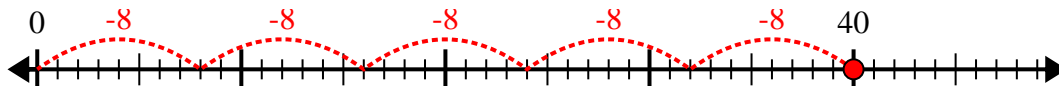
3)  $42:7=$



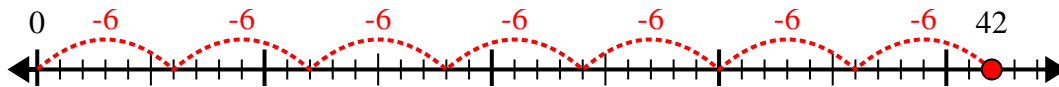
4)  $40:5=$



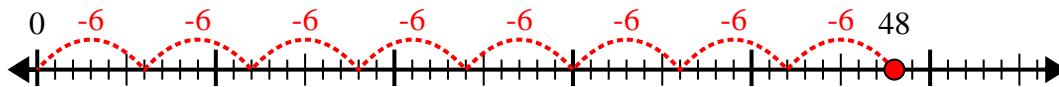
5)  $40:8=$



6)  $42:6=$



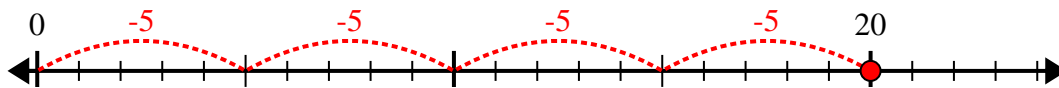
7)  $48:6=$



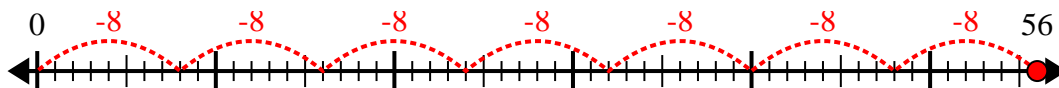
8)  $20:4=$



9)  $20:5=$



10)  $56:8=$



**Risposte**

1. 5

2. 8

3. 6

4. 8

5. 5

6. 7

7. 8

8. 5

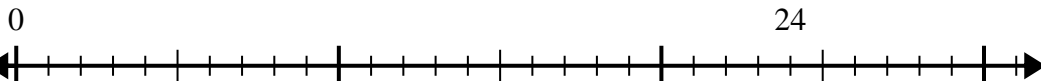
9. 4

10. 7

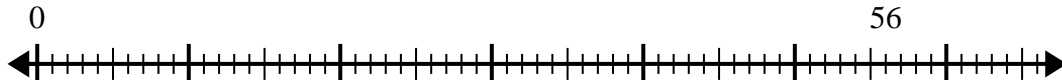


Usa la linea dei numeri per risolvere il problema della divisione.

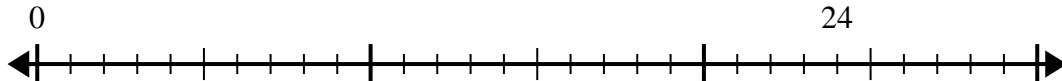
1)  $24:8=$



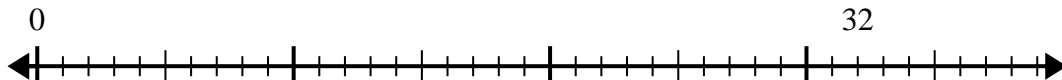
2)  $56:8=$



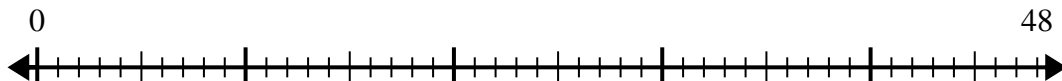
3)  $24:4=$



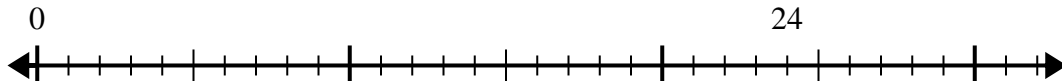
4)  $32:4=$



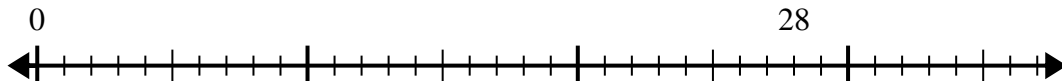
5)  $48:8=$



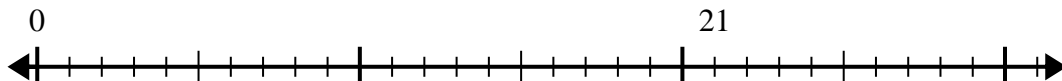
6)  $24:6=$



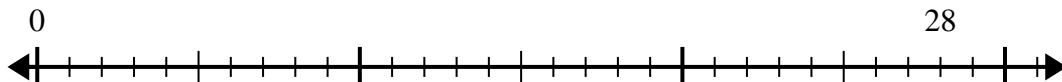
7)  $28:4=$



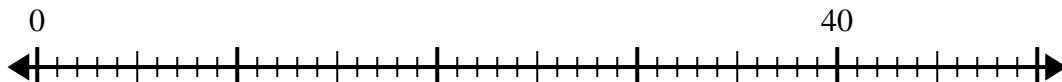
8)  $21:7=$



9)  $28:7=$



10)  $40:5=$



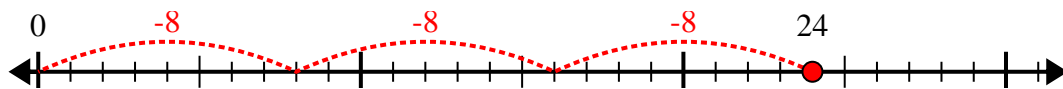
**Risposte**

1. \_\_\_\_\_
2. \_\_\_\_\_
3. \_\_\_\_\_
4. \_\_\_\_\_
5. \_\_\_\_\_
6. \_\_\_\_\_
7. \_\_\_\_\_
8. \_\_\_\_\_
9. \_\_\_\_\_
10. \_\_\_\_\_

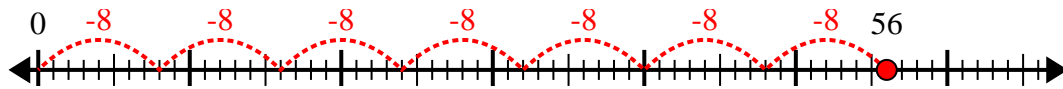


Usa la linea dei numeri per risolvere il problema della divisione.

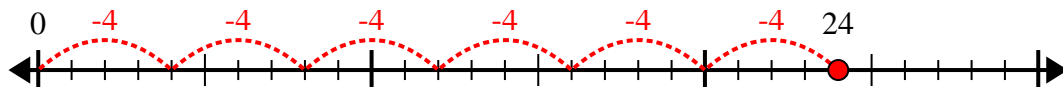
1)  $24:8=$



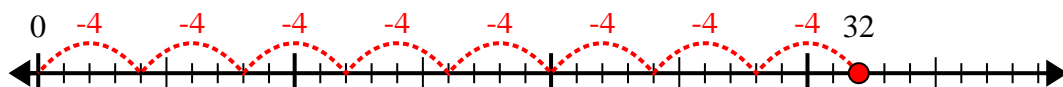
2)  $56:8=$



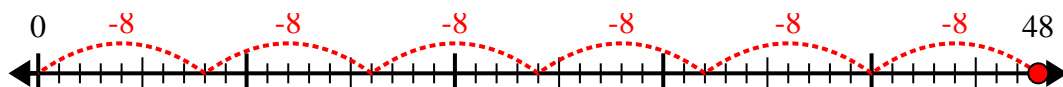
3)  $24:4=$



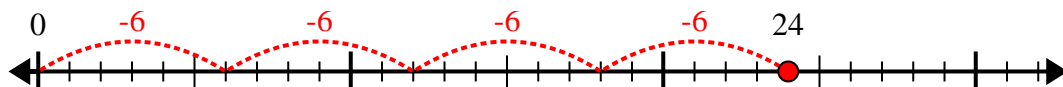
4)  $32:4=$



5)  $48:8=$



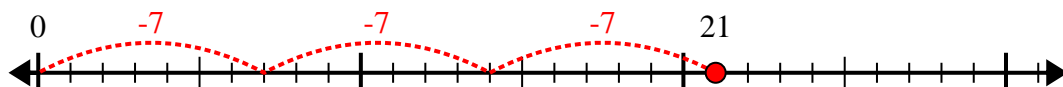
6)  $24:6=$



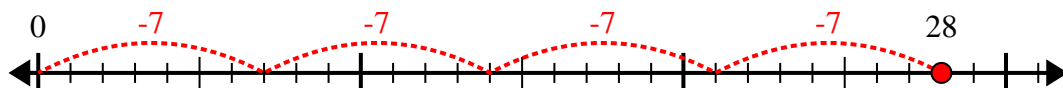
7)  $28:4=$



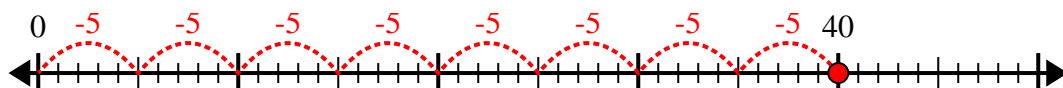
8)  $21:7=$



9)  $28:7=$



10)  $40:5=$



**Risposte**

1. 3

2. 7

3. 6

4. 8

5. 6

6. 4

7. 7

8. 3

9. 4

10. 8

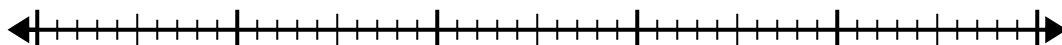


Usa la linea dei numeri per risolvere il problema della divisione.

1)  $40:5=$

0

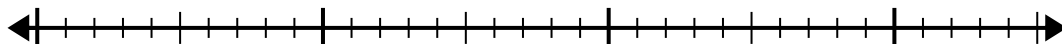
40



2)  $28:4=$

0

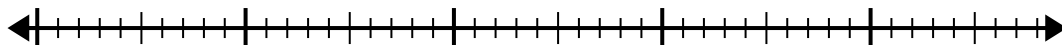
28



3)  $42:6=$

0

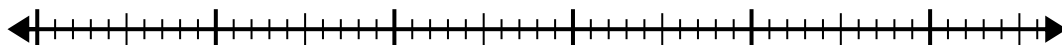
42



4)  $56:8=$

0

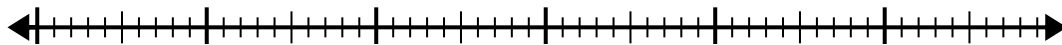
56



5)  $56:7=$

0

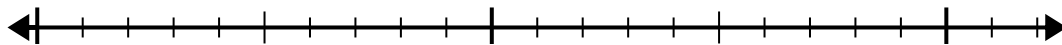
56



6)  $20:5=$

0

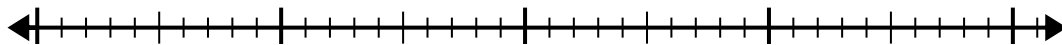
20



7)  $35:7=$

0

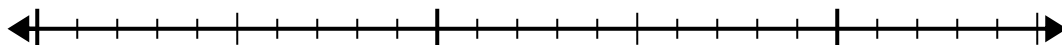
35



8)  $24:8=$

0

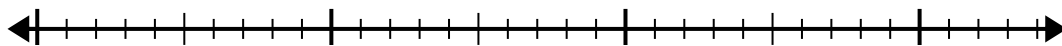
24



9)  $30:5=$

0

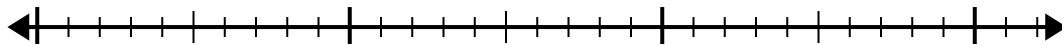
30



10)  $32:4=$

0

32

**Risposte**

1. \_\_\_\_\_

2. \_\_\_\_\_

3. \_\_\_\_\_

4. \_\_\_\_\_

5. \_\_\_\_\_

6. \_\_\_\_\_

7. \_\_\_\_\_

8. \_\_\_\_\_

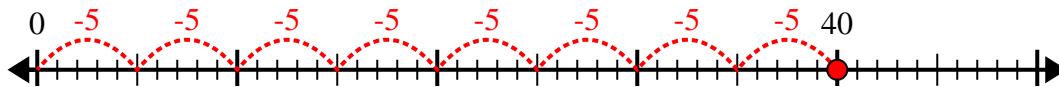
9. \_\_\_\_\_

10. \_\_\_\_\_

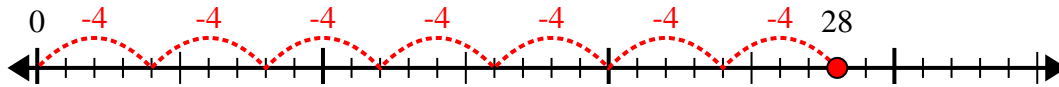


Usa la linea dei numeri per risolvere il problema della divisione.

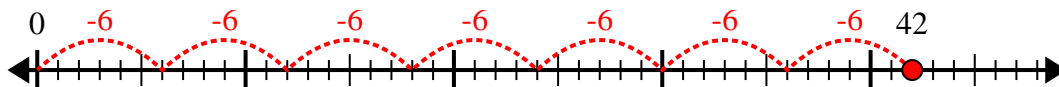
1)  $40:5=$



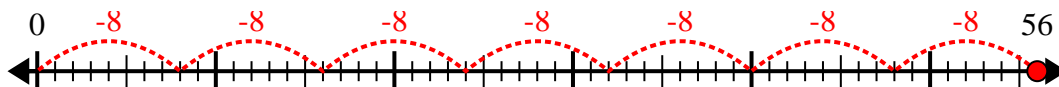
2)  $28:4=$



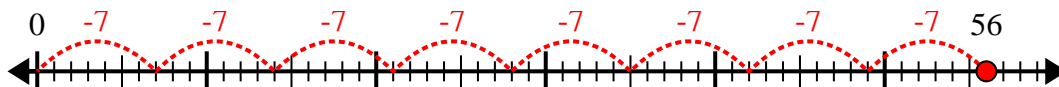
3)  $42:6=$



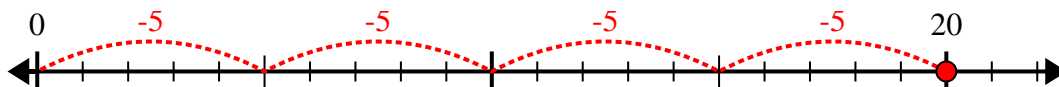
4)  $56:8=$



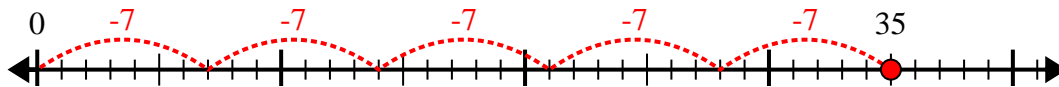
5)  $56:7=$



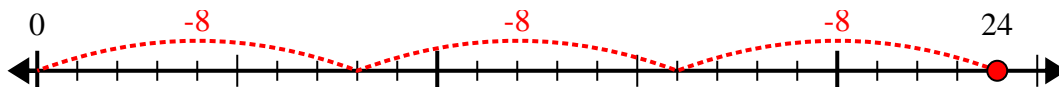
6)  $20:5=$



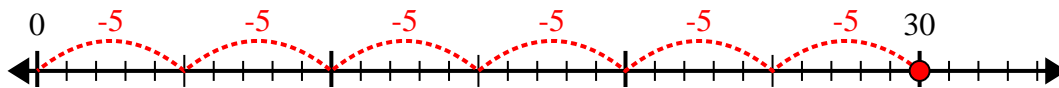
7)  $35:7=$



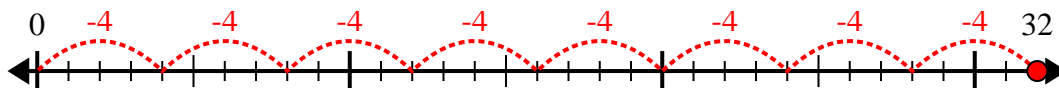
8)  $24:8=$



9)  $30:5=$



10)  $32:4=$



**Risposte**

1. 8

2. 7

3. 7

4. 7

5. 8

6. 4

7. 5

8. 3

9. 6

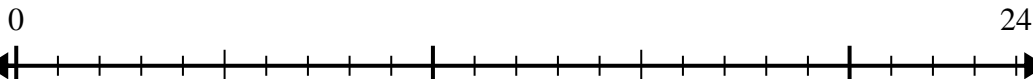
10. 8



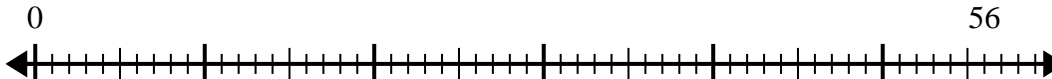


Usa la linea dei numeri per risolvere il problema della divisione.

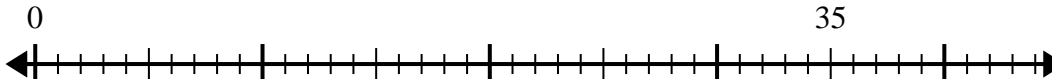
1)  $24:4=$



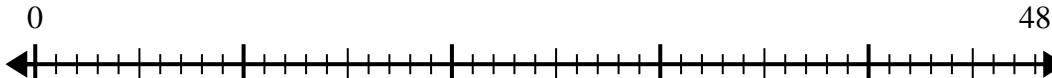
2)  $56:8=$



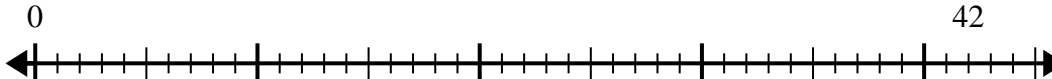
3)  $35:5=$



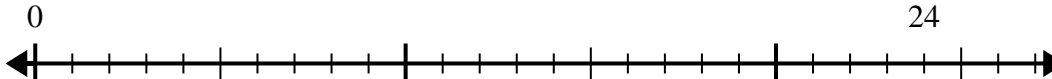
4)  $48:8=$



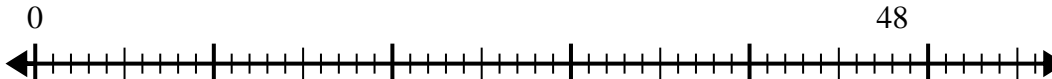
5)  $42:6=$



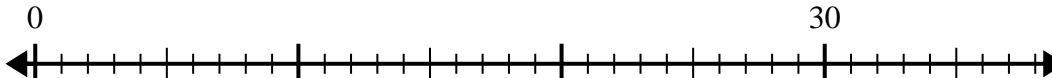
6)  $24:6=$



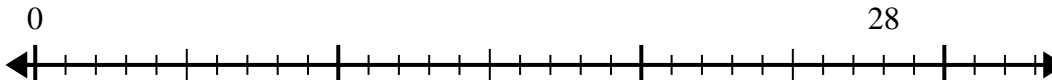
7)  $48:6=$



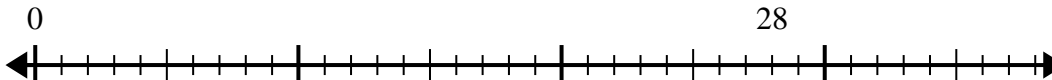
8)  $30:5=$



9)  $28:7=$



10)  $28:4=$



**Risposte**

1. \_\_\_\_\_

2. \_\_\_\_\_

3. \_\_\_\_\_

4. \_\_\_\_\_

5. \_\_\_\_\_

6. \_\_\_\_\_

7. \_\_\_\_\_

8. \_\_\_\_\_

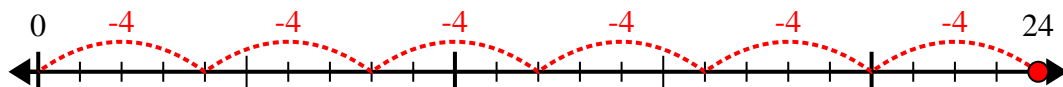
9. \_\_\_\_\_

10. \_\_\_\_\_

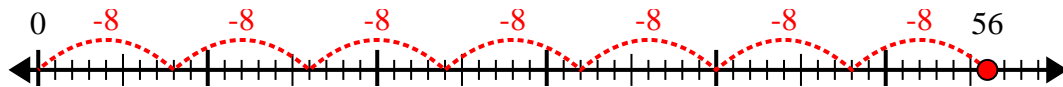


Usa la linea dei numeri per risolvere il problema della divisione.

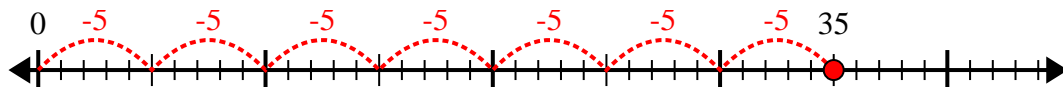
1)  $24:4=$



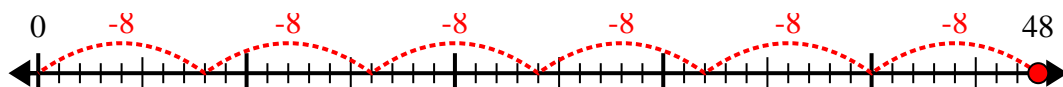
2)  $56:8=$



3)  $35:5=$



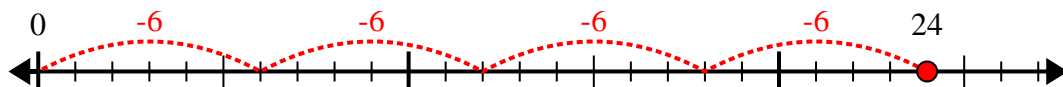
4)  $48:8=$



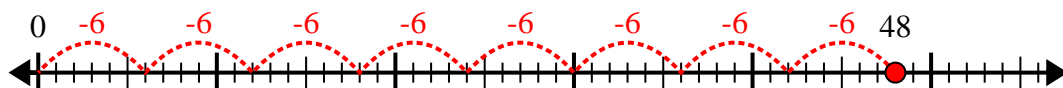
5)  $42:6=$



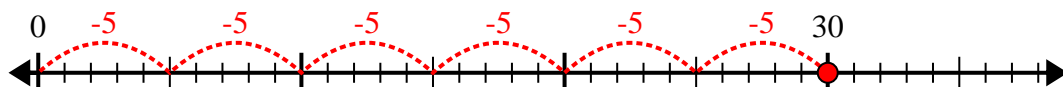
6)  $24:6=$



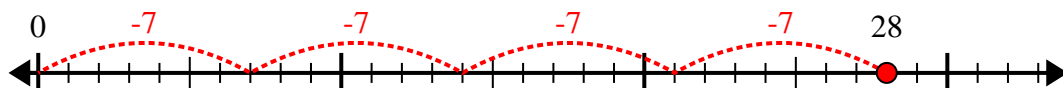
7)  $48:6=$



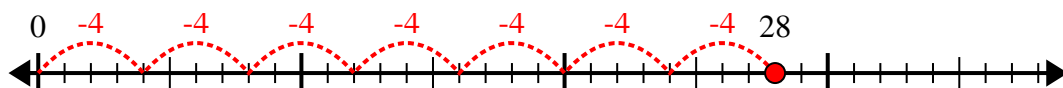
8)  $30:5=$



9)  $28:7=$



10)  $28:4=$



**Risposte**

1. 6

2. 7

3. 7

4. 6

5. 7

6. 4

7. 8

8. 6

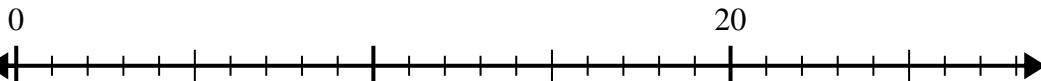
9. 4

10. 7

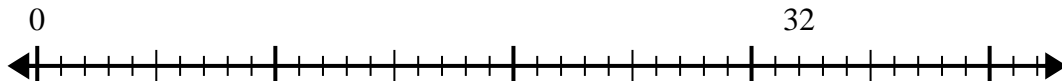


Usa la linea dei numeri per risolvere il problema della divisione.

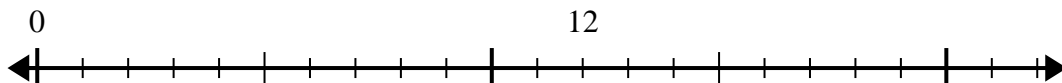
1)  $20:4=$



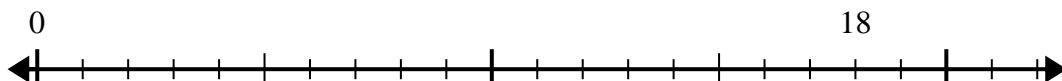
2)  $32:8=$



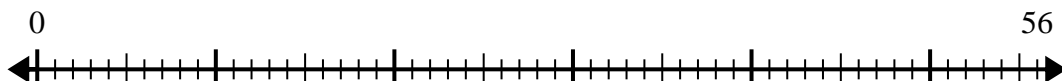
3)  $12:4=$



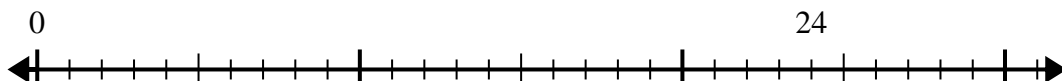
4)  $18:6=$



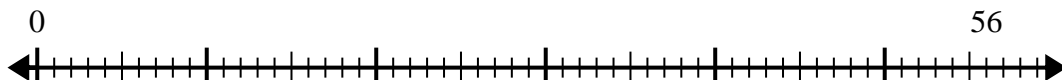
5)  $56:8=$



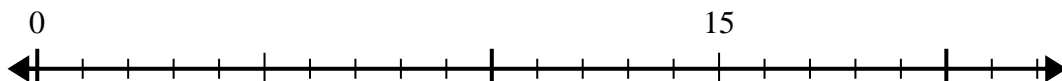
6)  $24:8=$



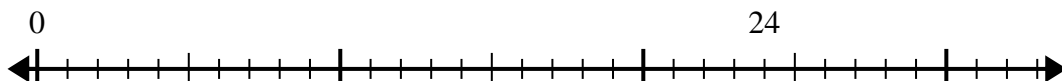
7)  $56:7=$



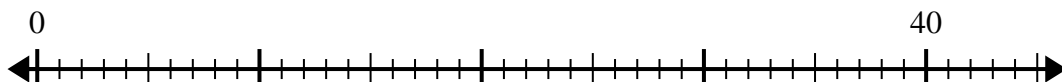
8)  $15:5=$



9)  $24:4=$



10)  $40:5=$

**Risposte**

1. \_\_\_\_\_

2. \_\_\_\_\_

3. \_\_\_\_\_

4. \_\_\_\_\_

5. \_\_\_\_\_

6. \_\_\_\_\_

7. \_\_\_\_\_

8. \_\_\_\_\_

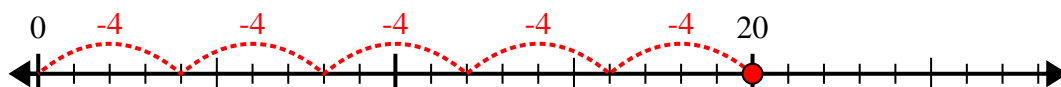
9. \_\_\_\_\_

10. \_\_\_\_\_



Usa la linea dei numeri per risolvere il problema della divisione.

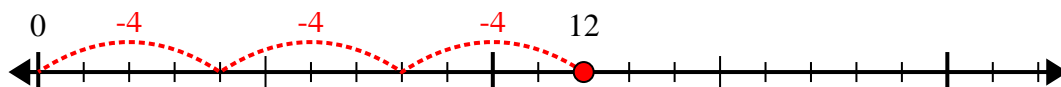
1)  $20:4=$



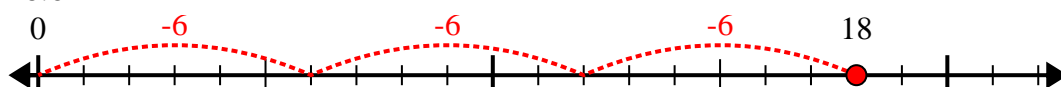
2)  $32:8=$



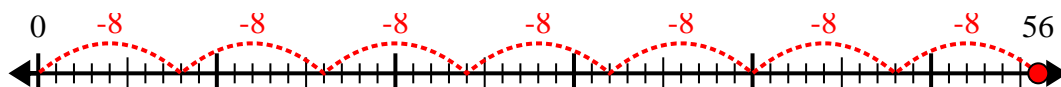
3)  $12:4=$



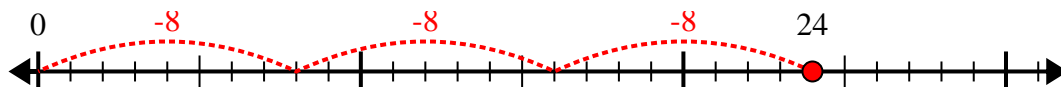
4)  $18:6=$



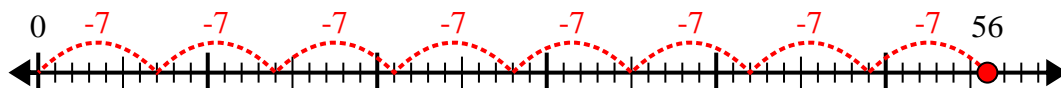
5)  $56:8=$



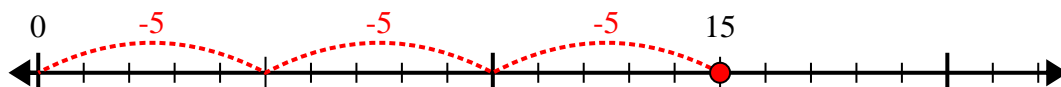
6)  $24:8=$



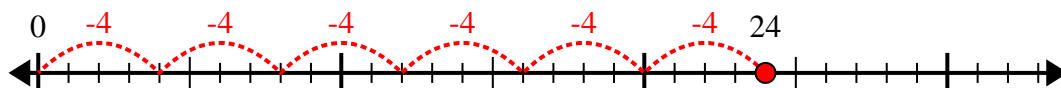
7)  $56:7=$



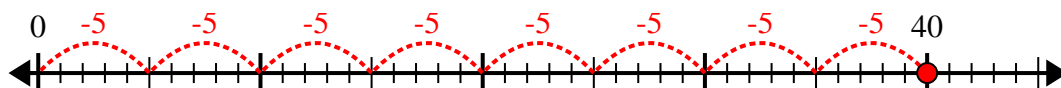
8)  $15:5=$



9)  $24:4=$



10)  $40:5=$



**Risposte**

1. 5

2. 4

3. 3

4. 3

5. 7

6. 3

7. 8

8. 3

9. 6

10. 8