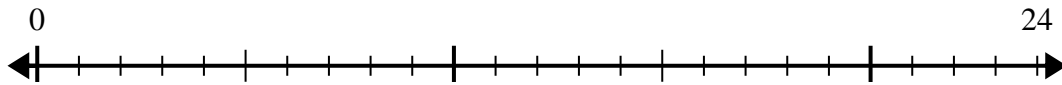


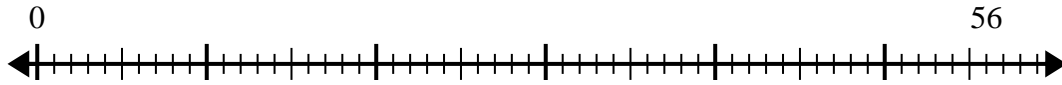


Usa la linea dei numeri per risolvere il problema della divisione.

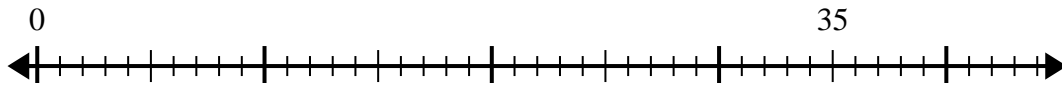
1) $24:4=$



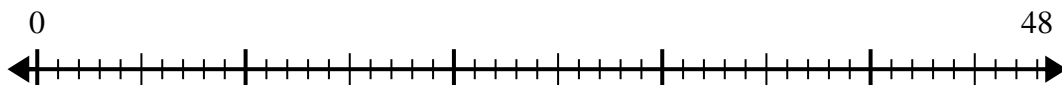
2) $56:8=$



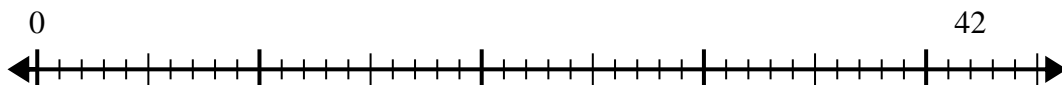
3) $35:5=$



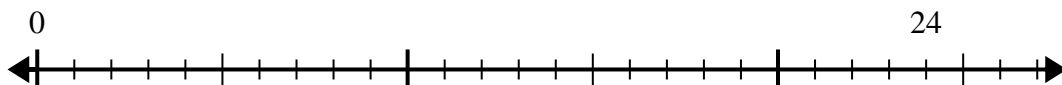
4) $48:8=$



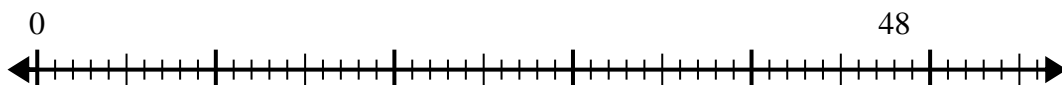
5) $42:6=$



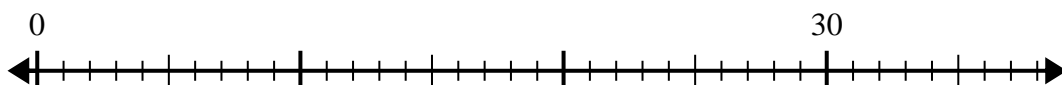
6) $24:6=$



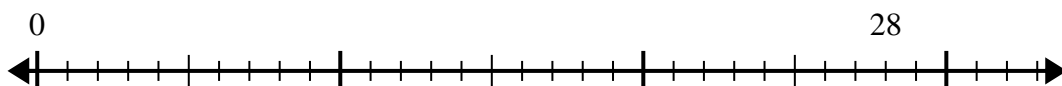
7) $48:6=$



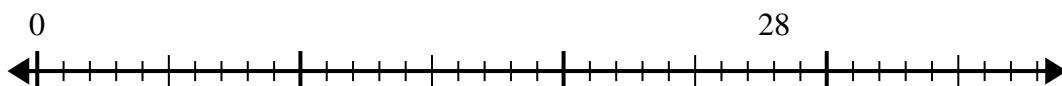
8) $30:5=$



9) $28:7=$



10) $28:4=$



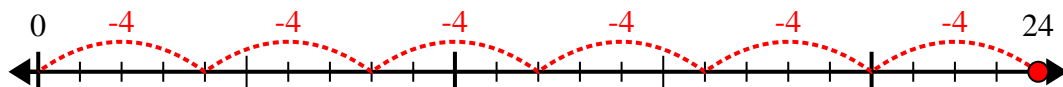
Risposte

- 1. _____
- 2. _____
- 3. _____
- 4. _____
- 5. _____
- 6. _____
- 7. _____
- 8. _____
- 9. _____
- 10. _____

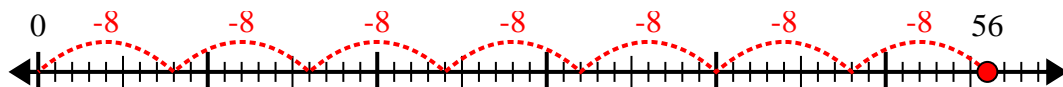


Usa la linea dei numeri per risolvere il problema della divisione.

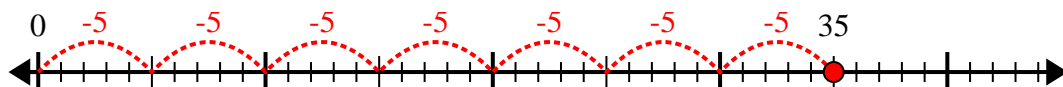
1) $24:4=$



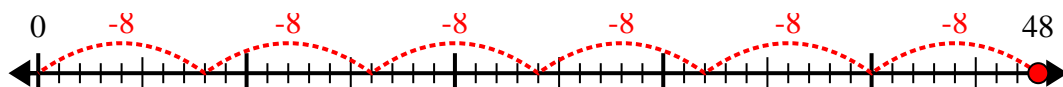
2) $56:8=$



3) $35:5=$



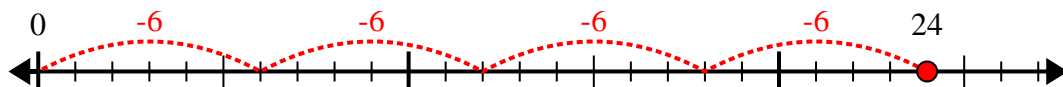
4) $48:8=$



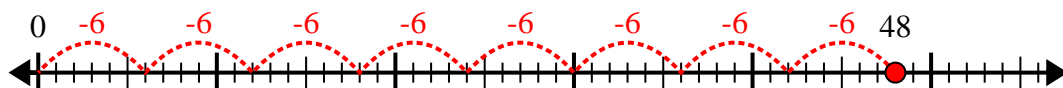
5) $42:6=$



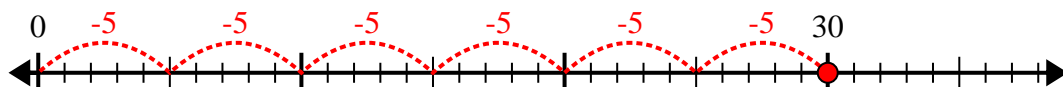
6) $24:6=$



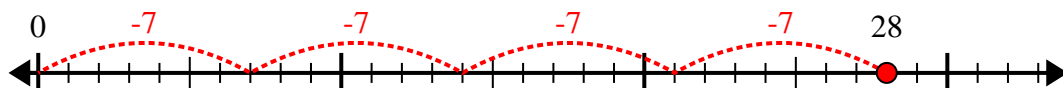
7) $48:6=$



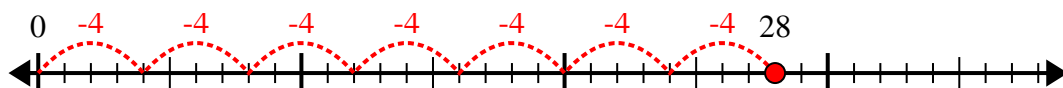
8) $30:5=$



9) $28:7=$



10) $28:4=$



Risposte

1. 6

2. 7

3. 7

4. 6

5. 7

6. 4

7. 8

8. 6

9. 4

10. 7