

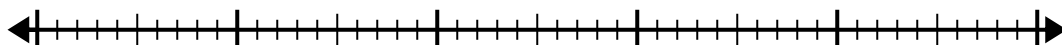


Usa la linea dei numeri per risolvere il problema della divisione.

1) $40:5=$

0

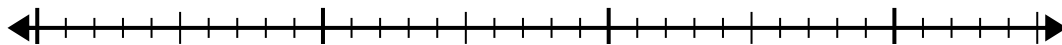
40



2) $28:4=$

0

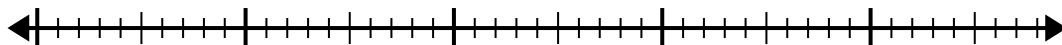
28



3) $42:6=$

0

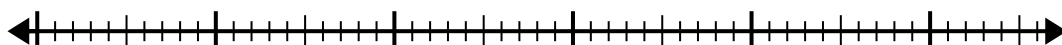
42



4) $56:8=$

0

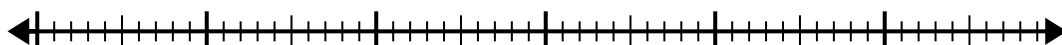
56



5) $56:7=$

0

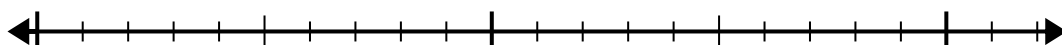
56



6) $20:5=$

0

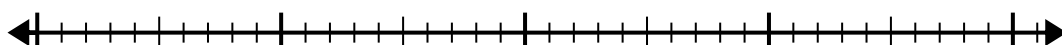
20



7) $35:7=$

0

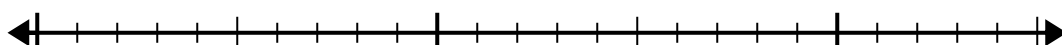
35



8) $24:8=$

0

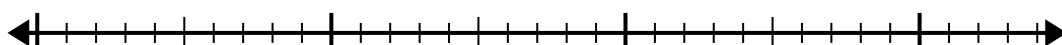
24



9) $30:5=$

0

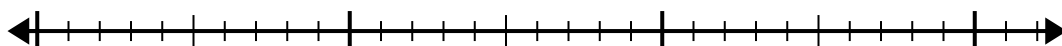
30



10) $32:4=$

0

32



Risposte

1. _____

2. _____

3. _____

4. _____

5. _____

6. _____

7. _____

8. _____

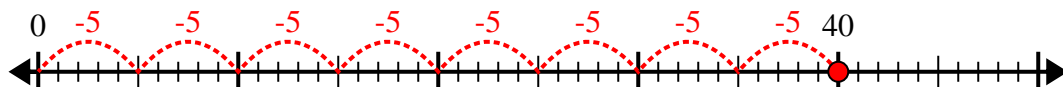
9. _____

10. _____

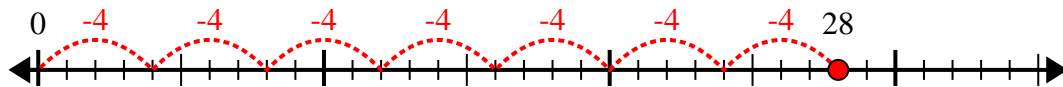


Usa la linea dei numeri per risolvere il problema della divisione.

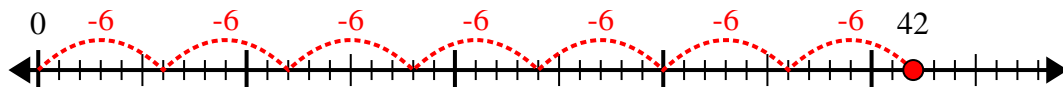
1) $40:5=$



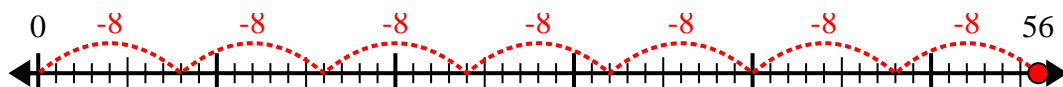
2) $28:4=$



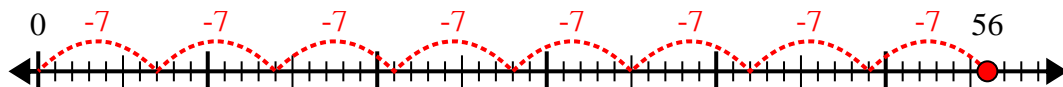
3) $42:6=$



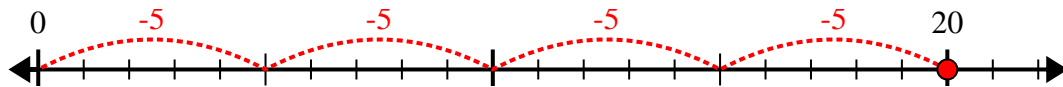
4) $56:8=$



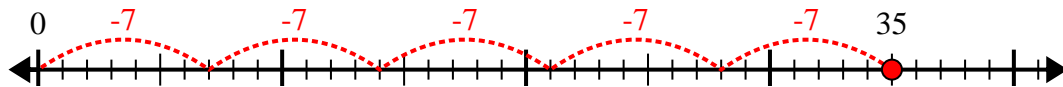
5) $56:7=$



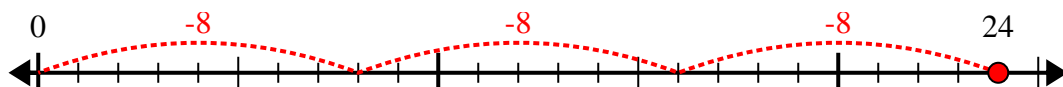
6) $20:5=$



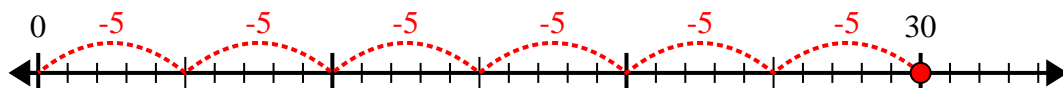
7) $35:7=$



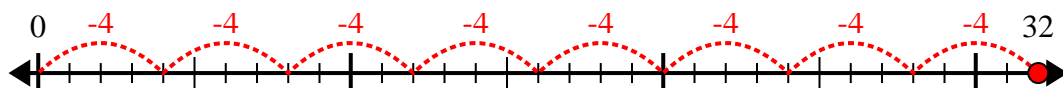
8) $24:8=$



9) $30:5=$



10) $32:4=$



Risposte

1. 8

2. 7

3. 7

4. 7

5. 8

6. 4

7. 5

8. 3

9. 6

10. 8