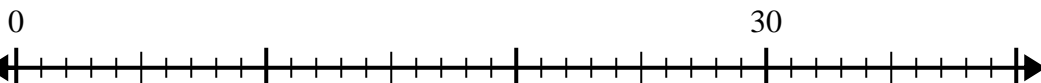


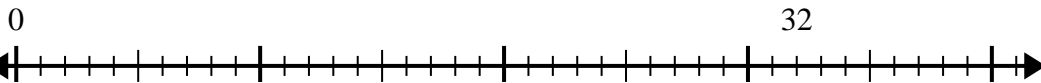


Usa la linea dei numeri per risolvere il problema della divisione.

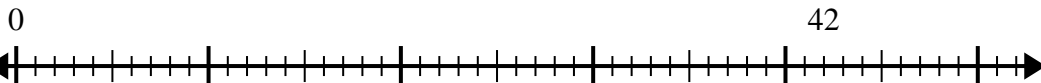
1)  $30:6=$



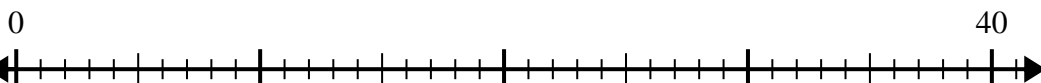
2)  $32:4=$



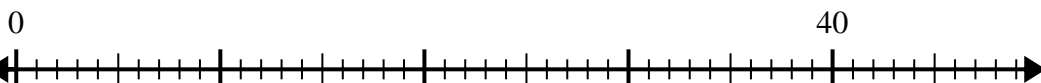
3)  $42:7=$



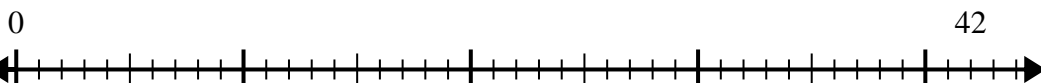
4)  $40:5=$



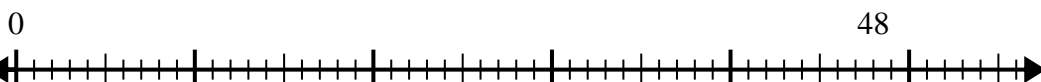
5)  $40:8=$



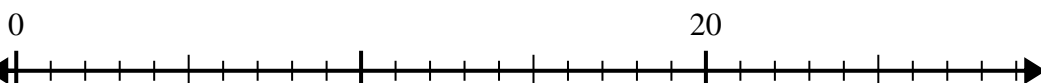
6)  $42:6=$



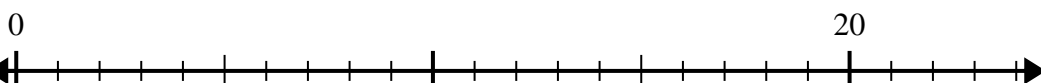
7)  $48:6=$



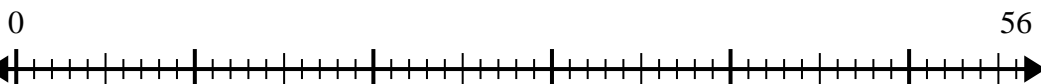
8)  $20:4=$



9)  $20:5=$



10)  $56:8=$



**Risposte**

1. \_\_\_\_\_

2. \_\_\_\_\_

3. \_\_\_\_\_

4. \_\_\_\_\_

5. \_\_\_\_\_

6. \_\_\_\_\_

7. \_\_\_\_\_

8. \_\_\_\_\_

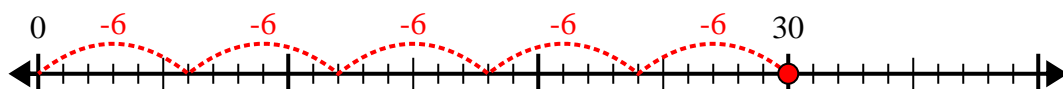
9. \_\_\_\_\_

10. \_\_\_\_\_

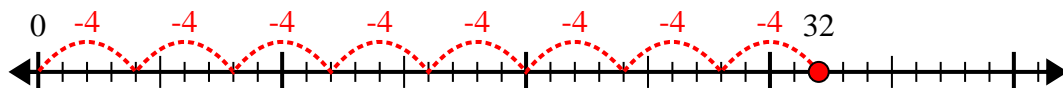


Usa la linea dei numeri per risolvere il problema della divisione.

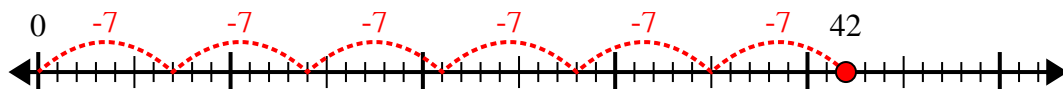
1)  $30:6=$



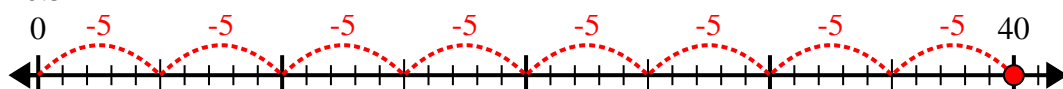
2)  $32:4=$



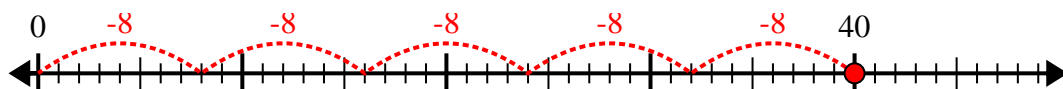
3)  $42:7=$



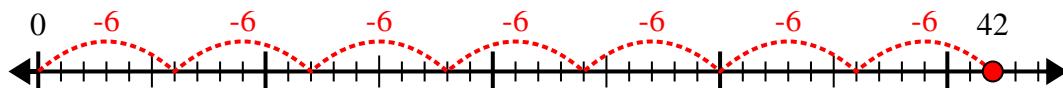
4)  $40:5=$



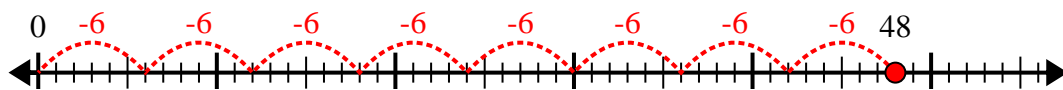
5)  $40:8=$



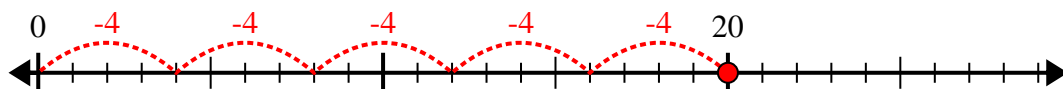
6)  $42:6=$



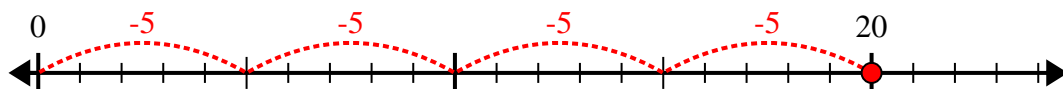
7)  $48:6=$



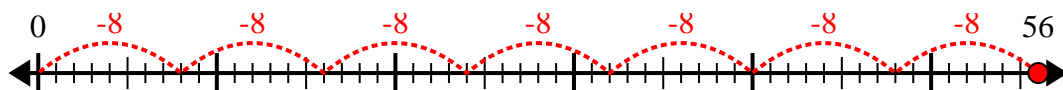
8)  $20:4=$



9)  $20:5=$



10)  $56:8=$



**Risposte**

1. 5

2. 8

3. 6

4. 8

5. 5

6. 7

7. 8

8. 5

9. 4

10. 7