

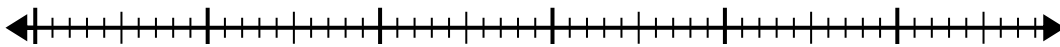


Usa la linea dei numeri per risolvere il problema della divisione.

1) $56:7=$

0

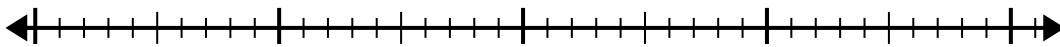
56



2) $40:5=$

0

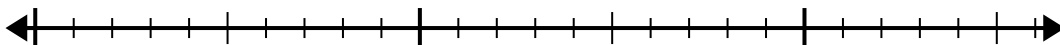
40



3) $20:4=$

0

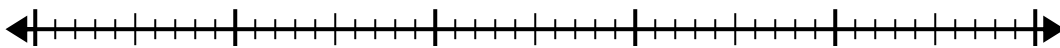
20



4) $42:7=$

0

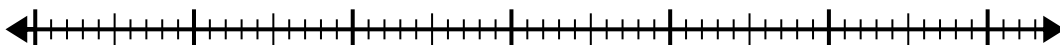
42



5) $56:8=$

0

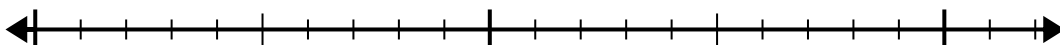
56



6) $20:5=$

0

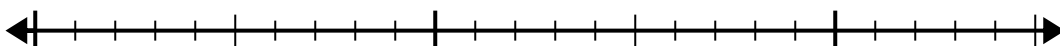
20



7) $24:4=$

0

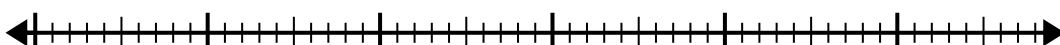
24



8) $48:8=$

0

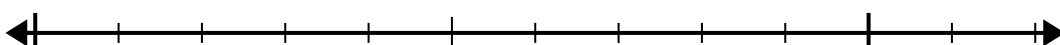
48



9) $12:4=$

0

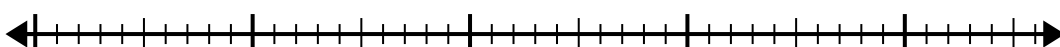
12



10) $42:6=$

0

42

**Risposte**

1. _____

2. _____

3. _____

4. _____

5. _____

6. _____

7. _____

8. _____

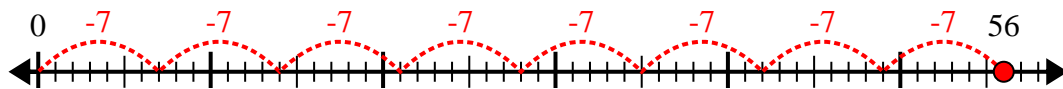
9. _____

10. _____

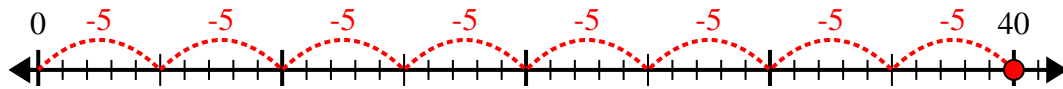


Usa la linea dei numeri per risolvere il problema della divisione.

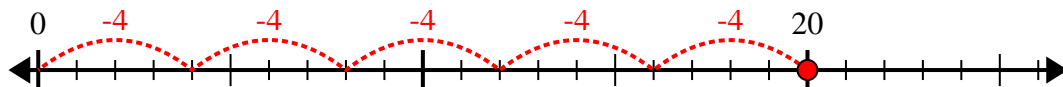
1) $56:7=$



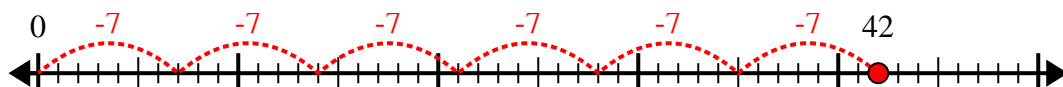
2) $40:5=$



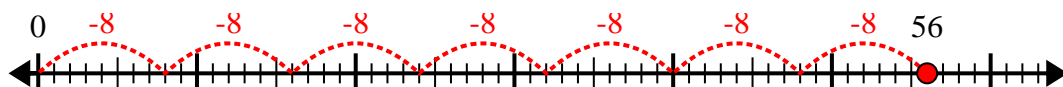
3) $20:4=$



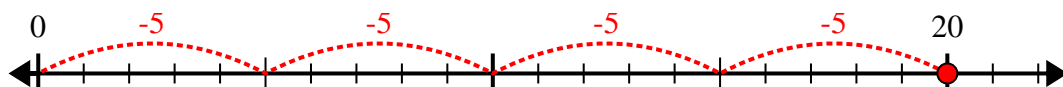
4) $42:7=$



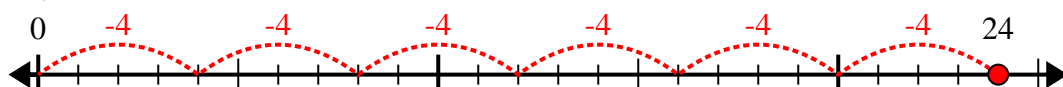
5) $56:8=$



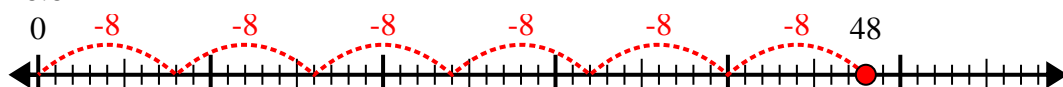
6) $20:5=$



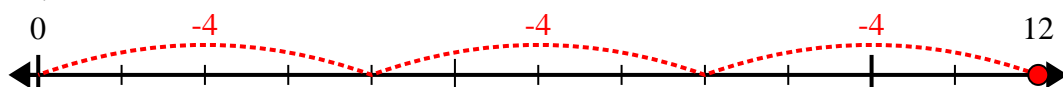
7) $24:4=$



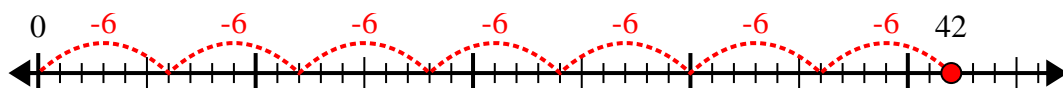
8) $48:8=$



9) $12:4=$



10) $42:6=$



Risposte

1. 8

2. 8

3. 5

4. 6

5. 7

6. 4

7. 6

8. 6

9. 3

10. 7