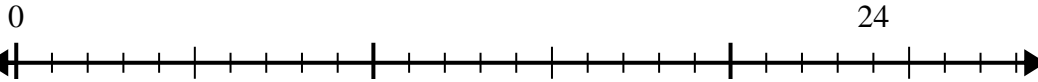




Usa la linea dei numeri per risolvere il problema della divisione.

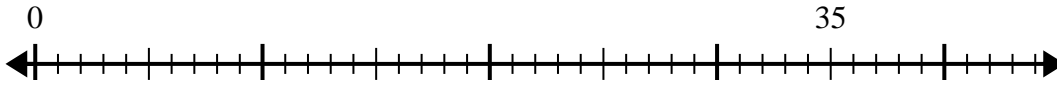
Risposte

1) $24:6=$



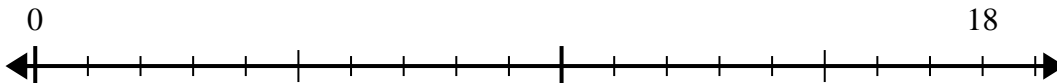
1. _____

2) $35:7=$



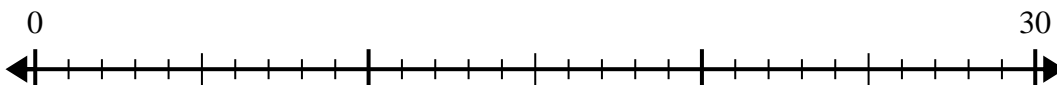
2. _____

3) $18:6=$



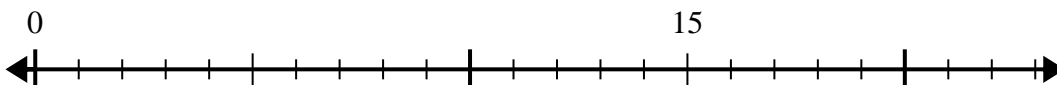
3. _____

4) $30:6=$



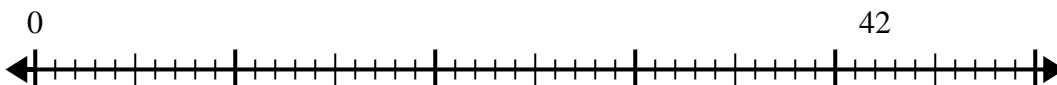
4. _____

5) $15:5=$



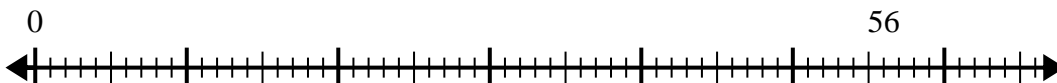
5. _____

6) $42:6=$



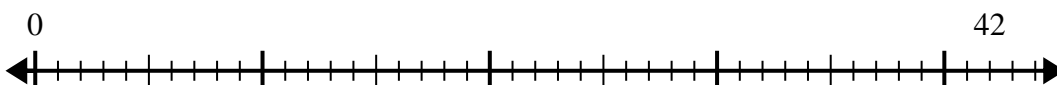
6. _____

7) $56:8=$



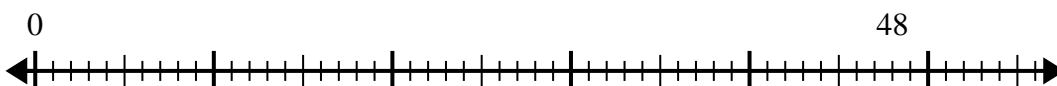
7. _____

8) $42:7=$



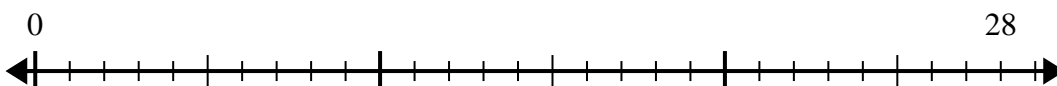
8. _____

9) $48:8=$



9. _____

10) $28:4=$

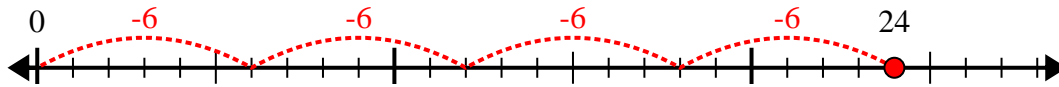


10. _____

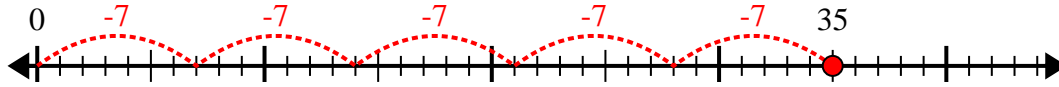


Usa la linea dei numeri per risolvere il problema della divisione.

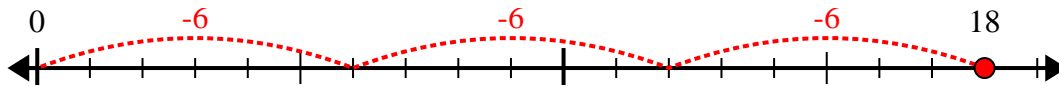
1) $24:6=$



2) $35:7=$



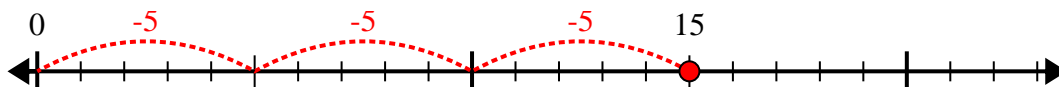
3) $18:6=$



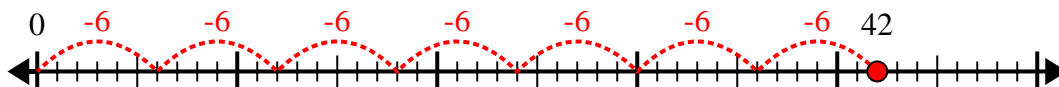
4) $30:6=$



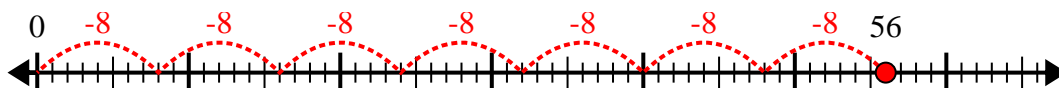
5) $15:5=$



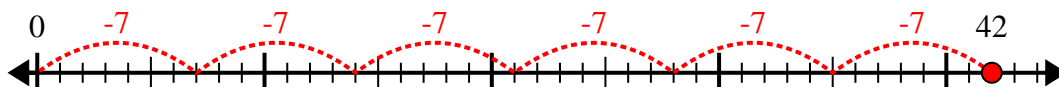
6) $42:6=$



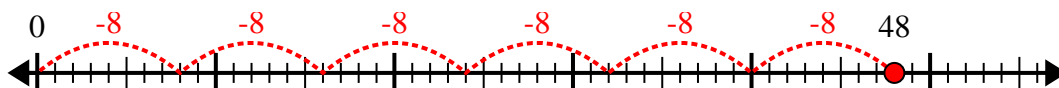
7) $56:8=$



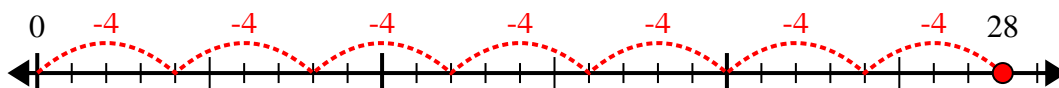
8) $42:7=$



9) $48:8=$



10) $28:4=$



Risposte

1. 4

2. 5

3. 3

4. 5

5. 3

6. 7

7. 7

8. 6

9. 6

10. 7