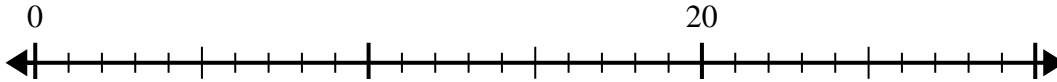


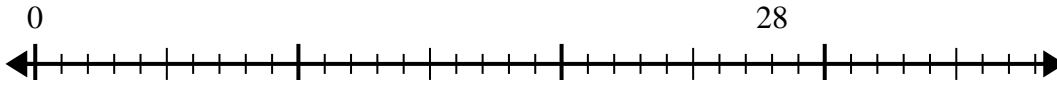


Usa la linea dei numeri per risolvere il problema della divisione.

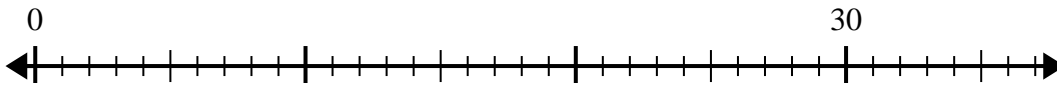
1)  $20:5=$



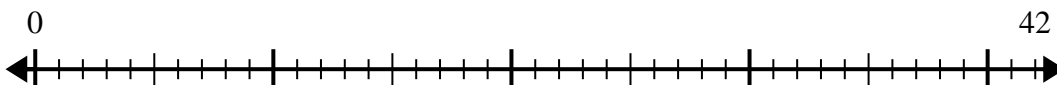
2)  $28:4=$



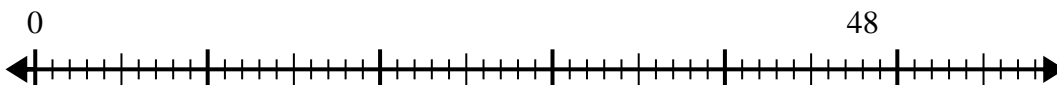
3)  $30:6=$



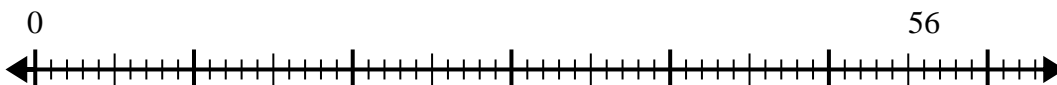
4)  $42:6=$



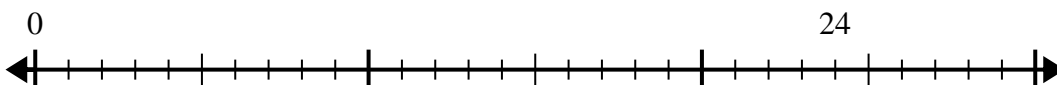
5)  $48:6=$



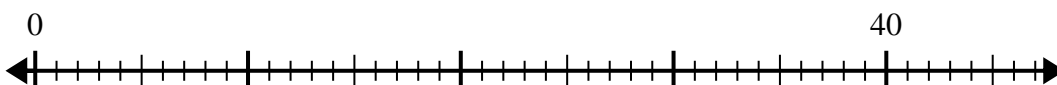
6)  $56:8=$



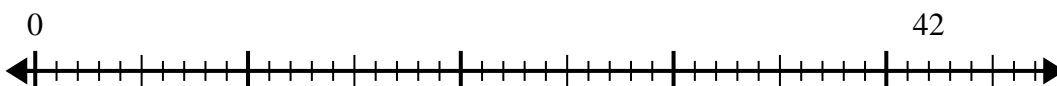
7)  $24:6=$



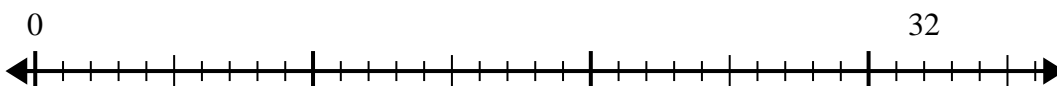
8)  $40:8=$



9)  $42:7=$



10)  $32:4=$



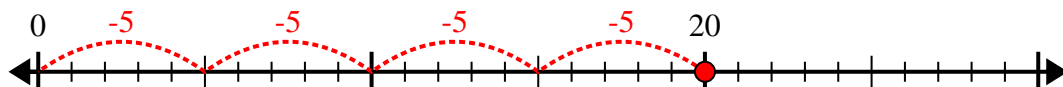
**Risposte**

- 1. \_\_\_\_\_
- 2. \_\_\_\_\_
- 3. \_\_\_\_\_
- 4. \_\_\_\_\_
- 5. \_\_\_\_\_
- 6. \_\_\_\_\_
- 7. \_\_\_\_\_
- 8. \_\_\_\_\_
- 9. \_\_\_\_\_
- 10. \_\_\_\_\_

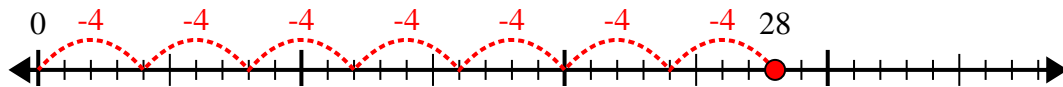


Usa la linea dei numeri per risolvere il problema della divisione.

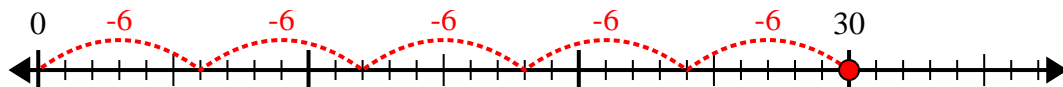
1)  $20:5=$



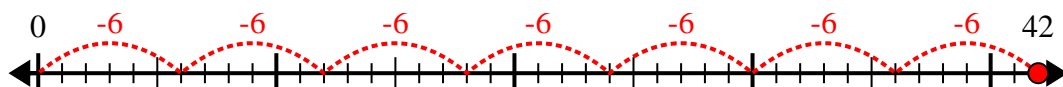
2)  $28:4=$



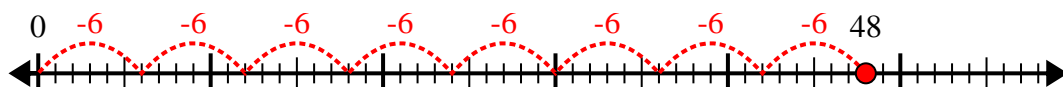
3)  $30:6=$



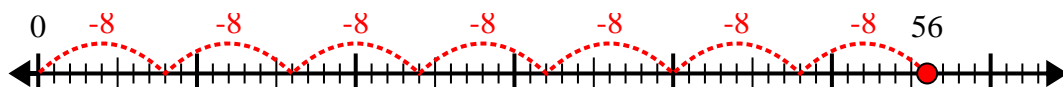
4)  $42:6=$



5)  $48:6=$



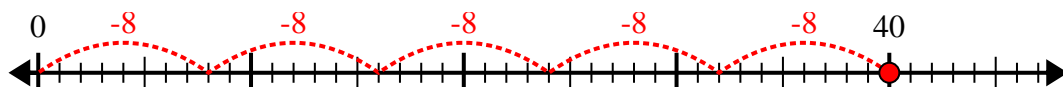
6)  $56:8=$



7)  $24:6=$



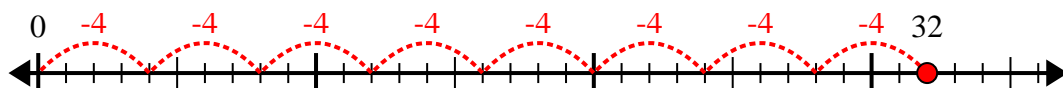
8)  $40:8=$



9)  $42:7=$



10)  $32:4=$



**Risposte**

1. 4

2. 7

3. 5

4. 7

5. 8

6. 7

7. 4

8. 5

9. 6

10. 8