

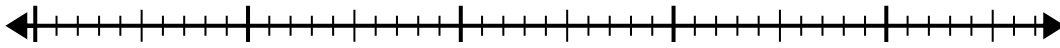


Usa la linea dei numeri per risolvere il problema della divisione.

1) $40:5=$

0

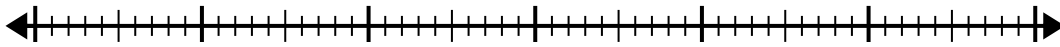
40



2) $56:7=$

0

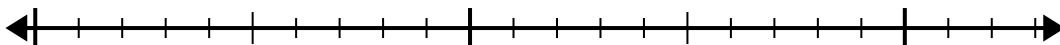
56



3) $15:5=$

0

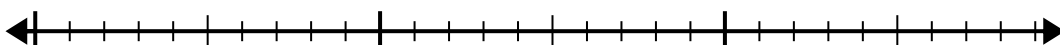
15



4) $28:4=$

0

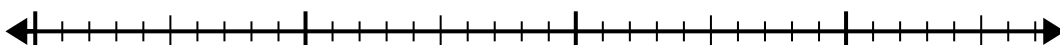
28



5) $35:7=$

0

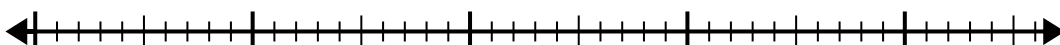
35



6) $40:8=$

0

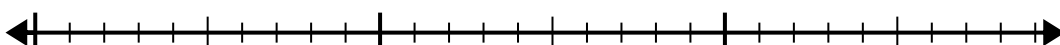
40



7) $24:4=$

0

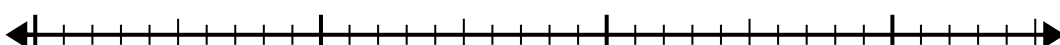
24



8) $30:5=$

0


30



9) $20:4=$

0

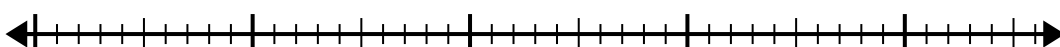
20



10) $42:6=$

0

42

**Risposte**

1. _____

2. _____

3. _____

4. _____

5. _____

6. _____

7. _____

8. _____

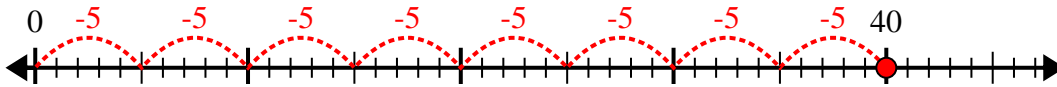
9. _____

10. _____

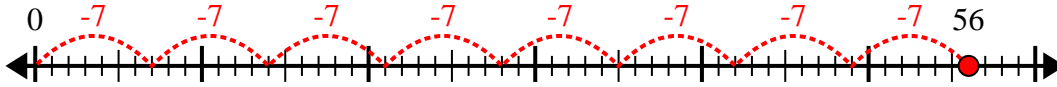


Usa la linea dei numeri per risolvere il problema della divisione.

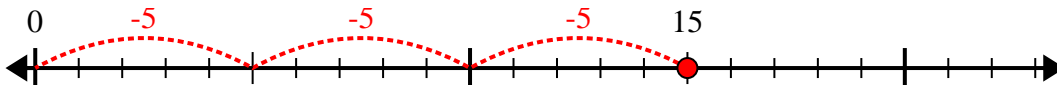
1) $40:5=$



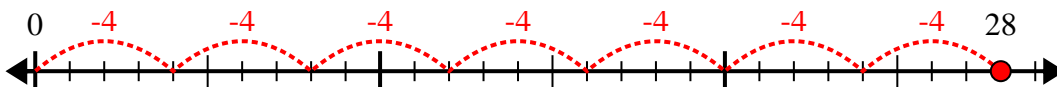
2) $56:7=$



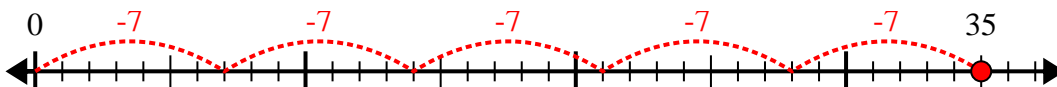
3) $15:5=$



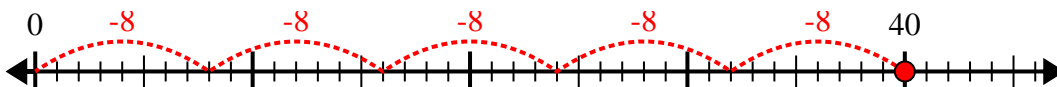
4) $28:4=$



5) $35:7=$



6) $40:8=$



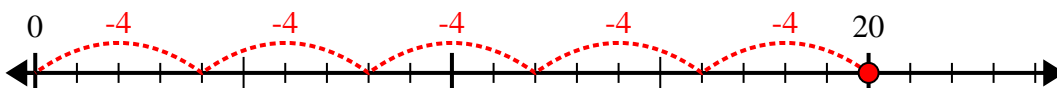
7) $24:4=$



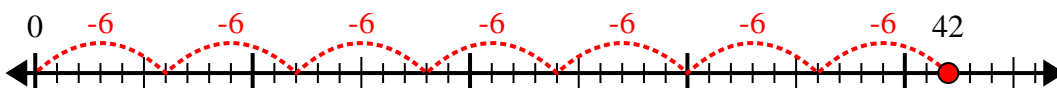
8) $30:5=$



9) $20:4=$



10) $42:6=$



Risposte

1. 8

2. 8

3. 3

4. 7

5. 5

6. 5

7. 6

8. 6

9. 5

10. 7