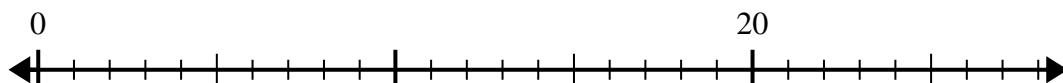


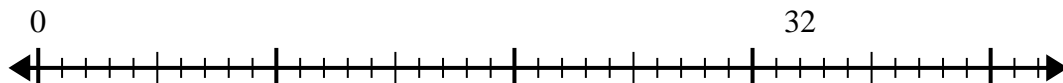


Usa la linea dei numeri per risolvere il problema della divisione.

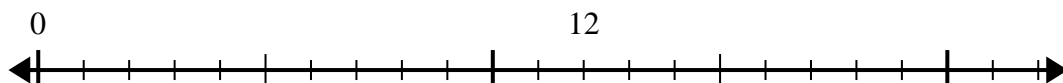
1) $20:4=$



2) $32:8=$



3) $12:4=$



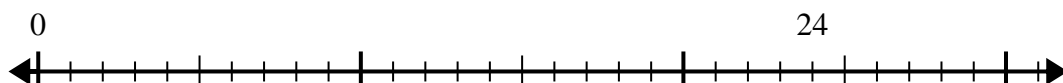
4) $18:6=$



5) $56:8=$



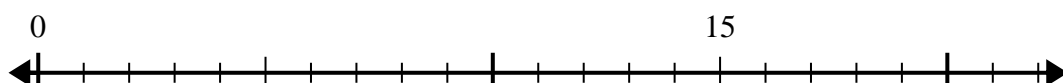
6) $24:8=$



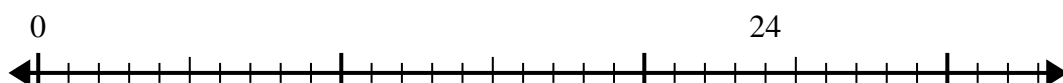
7) $56:7=$



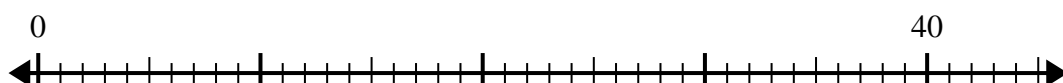
8) $15:5=$



9) $24:4=$



10) $40:5=$

**Risposte**

1. _____

2. _____

3. _____

4. _____

5. _____

6. _____

7. _____

8. _____

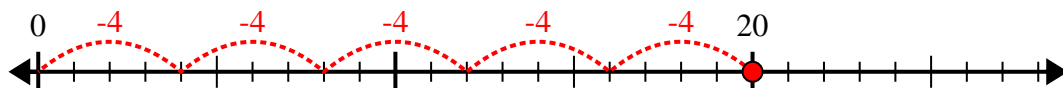
9. _____

10. _____

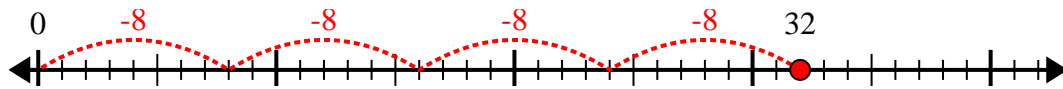


Usa la linea dei numeri per risolvere il problema della divisione.

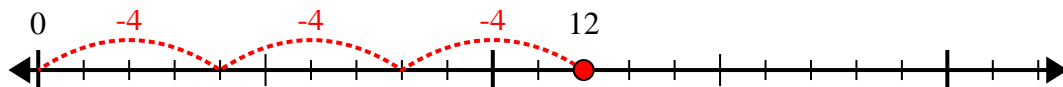
1) $20:4=$



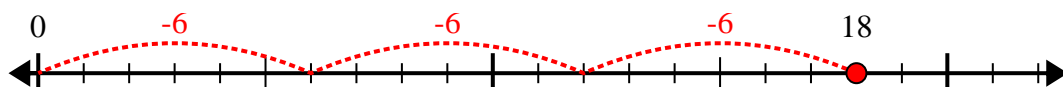
2) $32:8=$



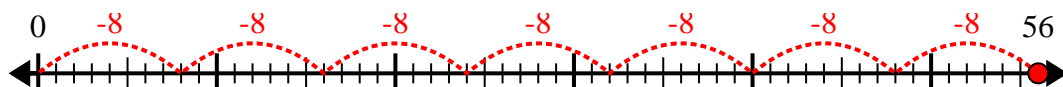
3) $12:4=$



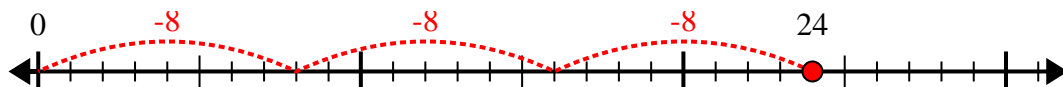
4) $18:6=$



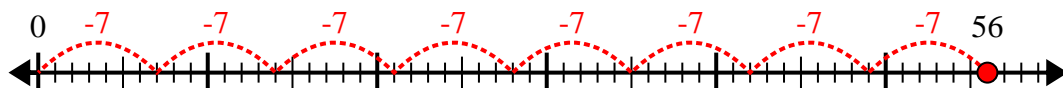
5) $56:8=$



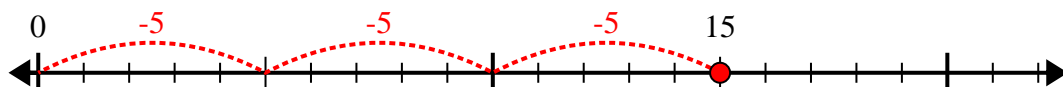
6) $24:8=$



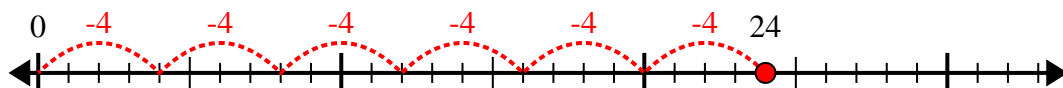
7) $56:7=$



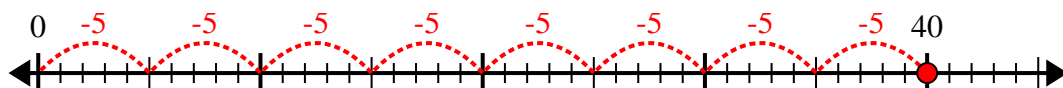
8) $15:5=$



9) $24:4=$



10) $40:5=$



Risposte

1. 5

2. 4

3. 3

4. 3

5. 7

6. 3

7. 8

8. 3

9. 6

10. 8