

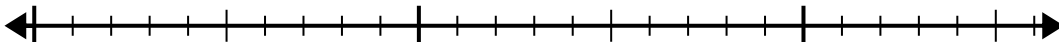


Usa la linea dei numeri per risolvere il problema della divisione.

1) $20:5=$

0

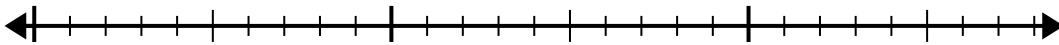
20



2) $24:6=$

0

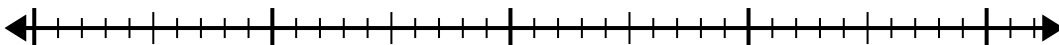
24



3) $32:8=$

0

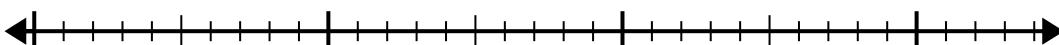
32



4) $28:7=$

0

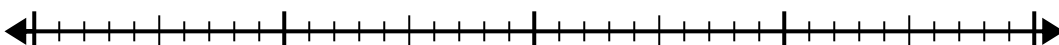
28



5) $35:5=$

0

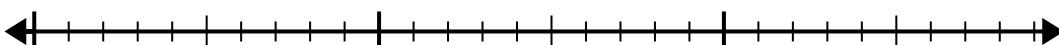
35



6) $28:4=$

0

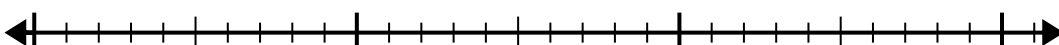
28



7) $30:6=$

0

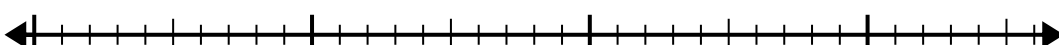
30



8) $32:4=$

0

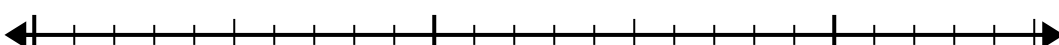
32



9) $24:4=$

0


24



10) $21:7=$

0

21

**Risposte**

1. _____

2. _____

3. _____

4. _____

5. _____

6. _____

7. _____

8. _____

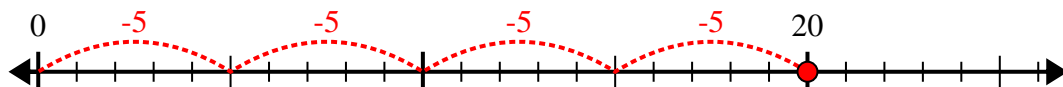
9. _____

10. _____

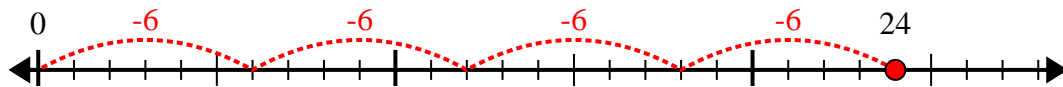


Usa la linea dei numeri per risolvere il problema della divisione.

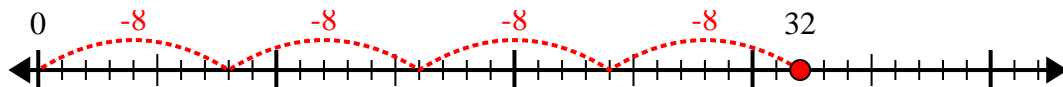
1) $20:5=$



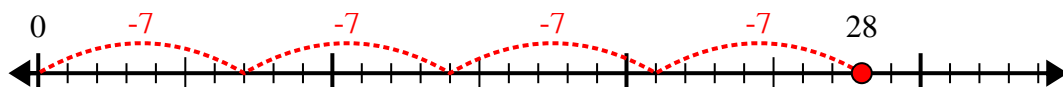
2) $24:6=$



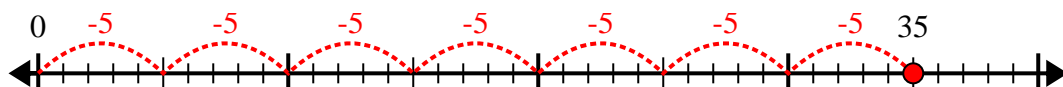
3) $32:8=$



4) $28:7=$



5) $35:5=$



6) $28:4=$



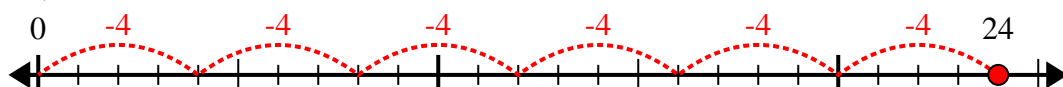
7) $30:6=$



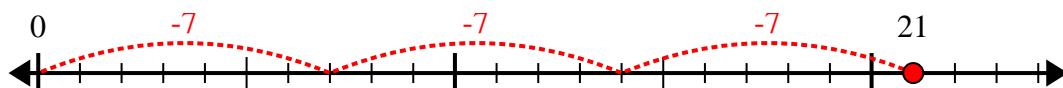
8) $32:4=$



9) $24:4=$



10) $21:7=$



Risposte

1. 4

2. 4

3. 4

4. 4

5. 7

6. 7

7. 5

8. 8

9. 6

10. 3