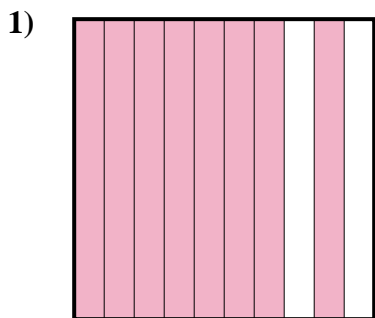


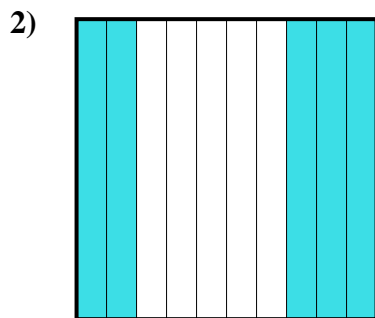


Determina quale lettera rappresenta la quantità colorata del tutto.


Risposte



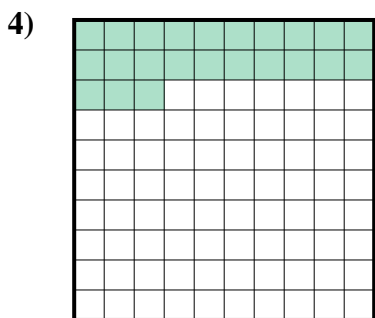
- A. 8
- B. 800,0
- C. 80
- D. 0,8



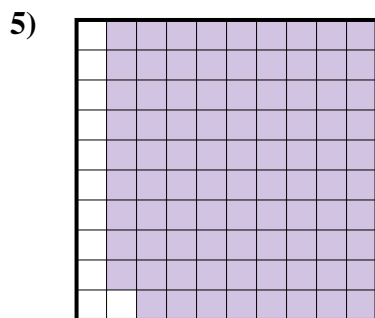
- A. 500,0
- B. 0,5
- C. 0,05
- D. 5



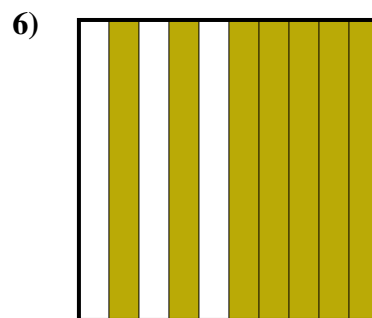
- A. 1
- B. 0,1
- C. 100,00
- D. 100,0



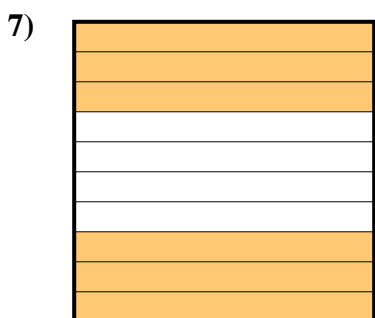
- A. 0,023
- B. 230,0
- C. 2,3
- D. 0,23




- A. 0,89
- B. 0,089
- C. 8,9
- D. 890,0



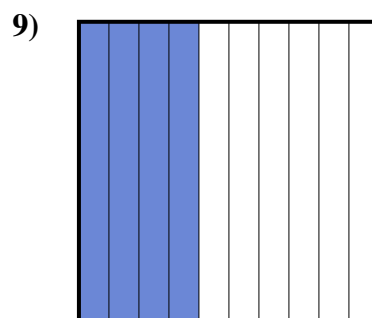
- A. 70
- B. 700,0
- C. 0,07
- D. 0,7



- A. 60
- B. 0,06
- C. 0,6
- D. 600,00



- A. 300,0
- B. 0,3
- C. 30
- D. 300,00



- A. 0,4
- B. 0,04
- C. 400,0
- D. 400,00

1. _____

2. _____

3. _____

4. _____

5. _____

6. _____

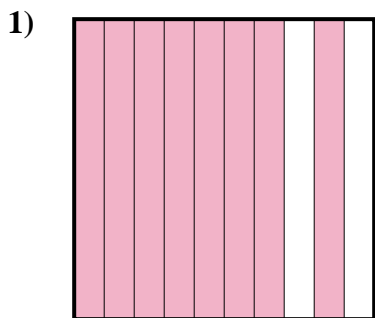
7. _____

8. _____

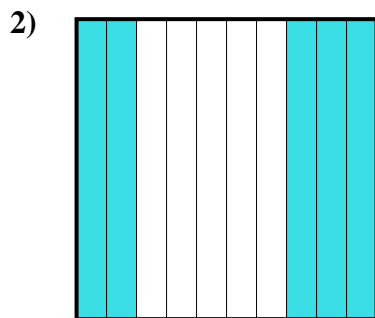
9. _____




Determina quale lettera rappresenta la quantità colorata del tutto.



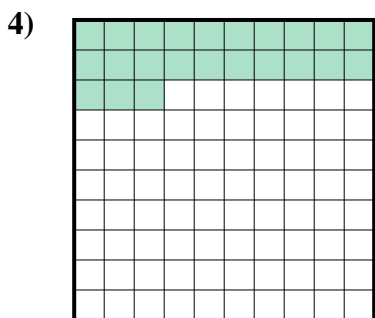
- A. 8
- B. 800,0
- C. 80
- D. 0,8



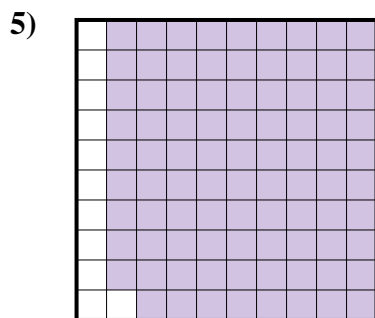
- A. 500,0
- B. 0,5
- C. 0,05
- D. 5



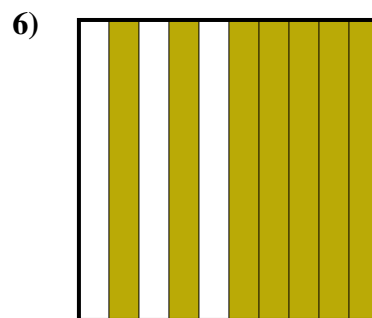
- A. 1
- B. 0,1
- C. 100,00
- D. 100,0



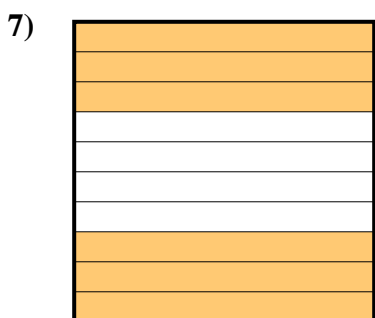
- A. 0,023
- B. 230,0
- C. 2,3
- D. 0,23




- A. 0,89
- B. 0,089
- C. 8,9
- D. 890,0



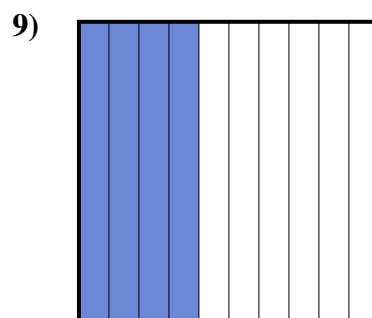
- A. 70
- B. 700,0
- C. 0,07
- D. 0,7



- A. 60
- B. 0,06
- C. 0,6
- D. 600,00



- A. 300,0
- B. 0,3
- C. 30
- D. 300,00



- A. 0,4
- B. 0,04
- C. 400,0
- D. 400,00

Risposte

- 1. **D**
- 2. **B**
- 3. **B**
- 4. **D**
- 5. **A**
- 6. **D**
- 7. **C**
- 8. **B**
- 9. **A**