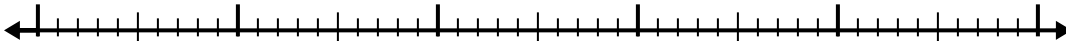


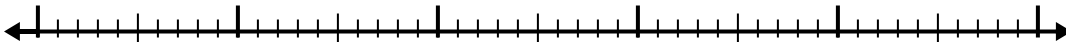


Usa la linea dei numeri per risolvere ogni problema.

1) $6,2 - 3,6 =$



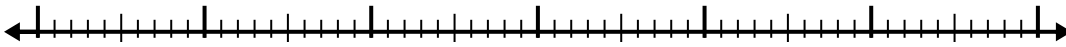
2) $5,2 - 2,2 =$



3) $3,3 - 2,2 =$



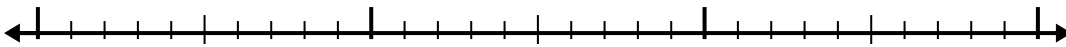
4) $7,6 - 3,9 =$



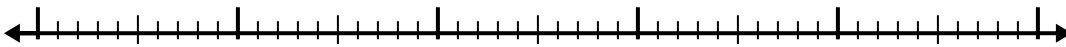
5) $10,4 - 2,2 =$



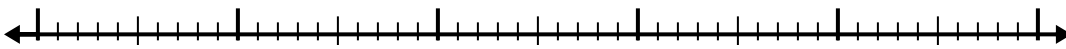
6) $7,2 - 1,8 =$



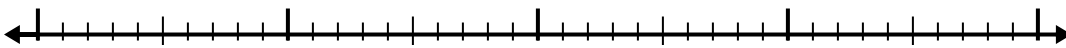
7) $5,8 - 3,6 =$



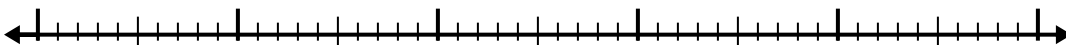
8) $8,2 - 2,8 =$



9) $5,7 - 2,2 =$



10) $4,1 - 2,2 =$



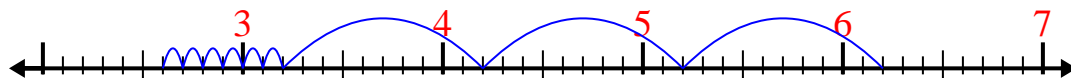
Risposte

- 1. _____
- 2. _____
- 3. _____
- 4. _____
- 5. _____
- 6. _____
- 7. _____
- 8. _____
- 9. _____
- 10. _____

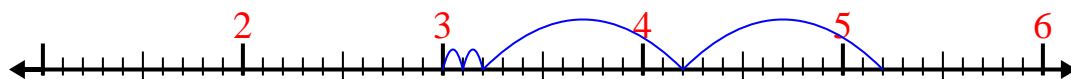


Usa la linea dei numeri per risolvere ogni problema.

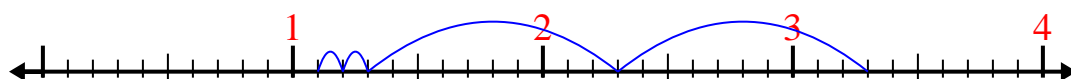
1) $6,2 - 3,6 =$



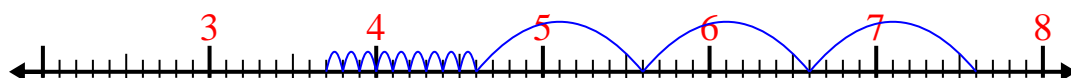
2) $5,2 - 2,2 =$



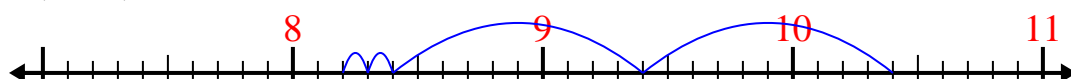
3) $3,3 - 2,2 =$



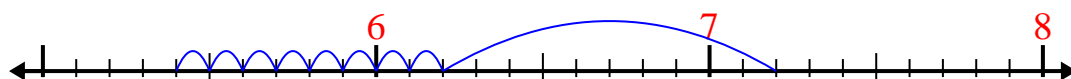
4) $7,6 - 3,9 =$



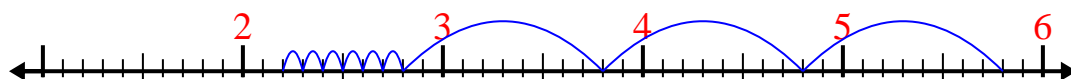
5) $10,4 - 2,2 =$



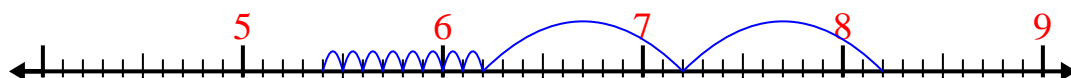
6) $7,2 - 1,8 =$



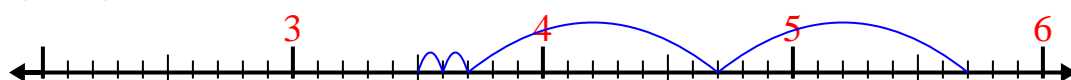
7) $5,8 - 3,6 =$



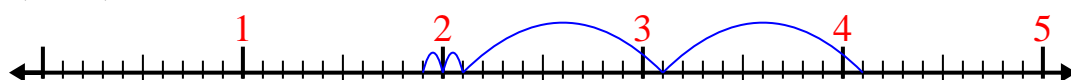
8) $8,2 - 2,8 =$



9) $5,7 - 2,2 =$



10) $4,1 - 2,2 =$

**Risposte**1. 2,62. 33. 1,14. 3,75. 8,26. 5,47. 2,28. 5,49. 3,510. 1,9