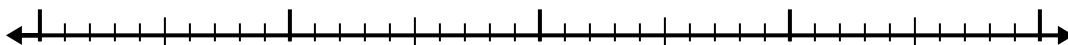


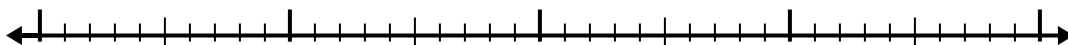


Usa la linea dei numeri per risolvere ogni problema.

1) $7,8 - 1,7 =$




2) $4,1 - 1,3 =$



3) $6,9 - 1,3 =$



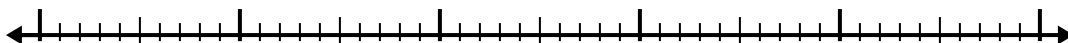
4) $11,2 - 3,7 =$



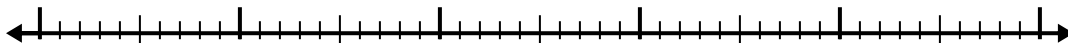
5) $10,7 - 2,9 =$




6) $5,9 - 2,5 =$




7) $9,4 - 2,7 =$



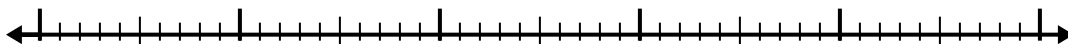
8) $5,4 - 3,3 =$



9) $2,7 - 1,7 =$



10) $6,1 - 3,1 =$

**Risposte**

1. _____

2. _____

3. _____

4. _____

5. _____

6. _____

7. _____

8. _____

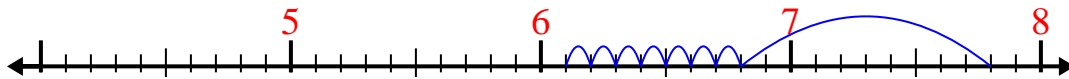
9. _____

10. _____

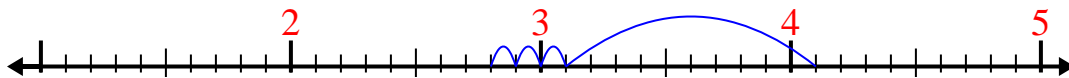


Usa la linea dei numeri per risolvere ogni problema.

1) $7,8 - 1,7 =$



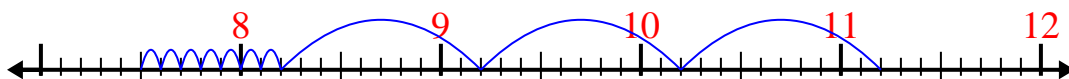
2) $4,1 - 1,3 =$



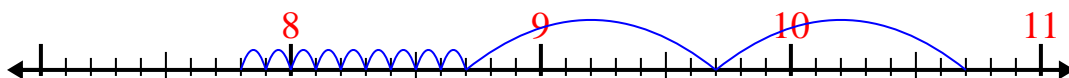
3) $6,9 - 1,3 =$



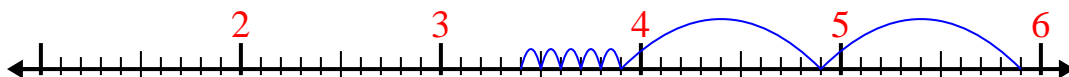
4) $11,2 - 3,7 =$



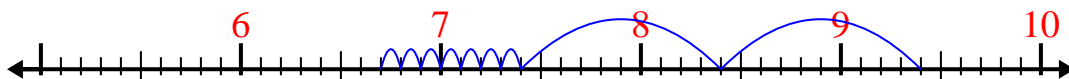
5) $10,7 - 2,9 =$



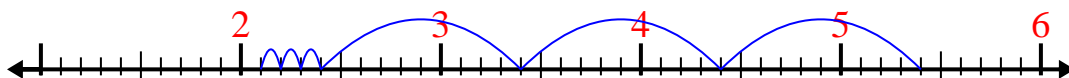
6) $5,9 - 2,5 =$



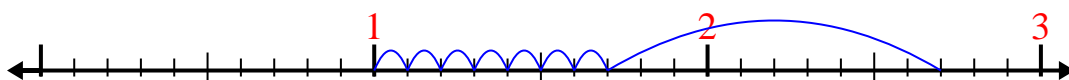
7) $9,4 - 2,7 =$



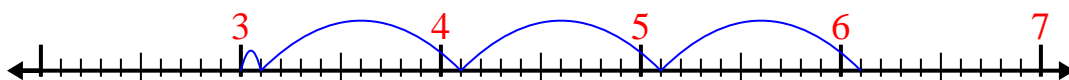
8) $5,4 - 3,3 =$



9) $2,7 - 1,7 =$



10) $6,1 - 3,1 =$

**Risposte**1. 6,12. 2,83. 5,64. 7,55. 7,86. 3,47. 6,78. 2,19. 110. 3