


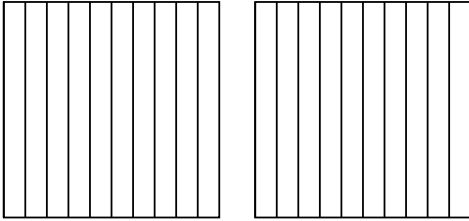


Usa il modello visivo per risolvere ogni problema.

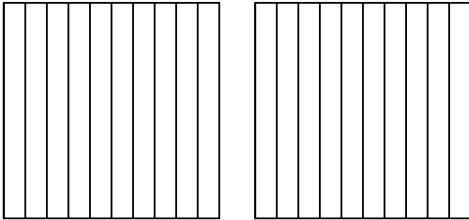
1) $3 \times 0,71 =$



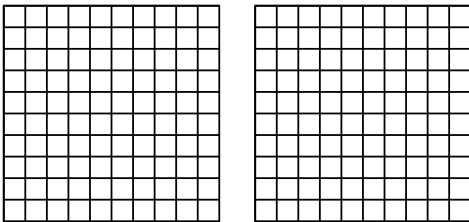
2) $2 \times 0,3 =$




3) $2 \times 0,4 =$



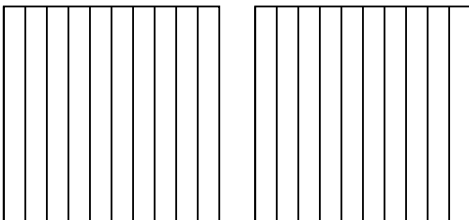
4) $2 \times 0,36 =$



5) $3 \times 0,40 =$



6) $2 \times 0,8 =$



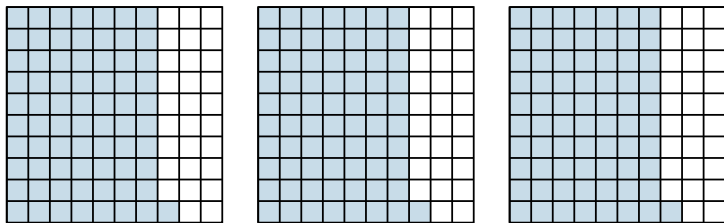
Risposte

- 1. _____
- 2. _____
- 3. _____
- 4. _____
- 5. _____
- 6. _____

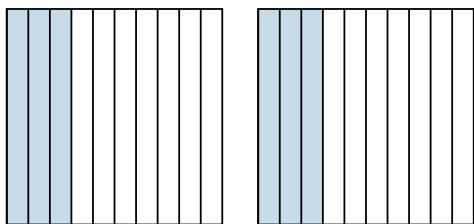


Usa il modello visivo per risolvere ogni problema.

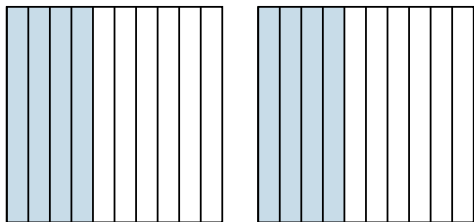
1) $3 \times 0,71 =$



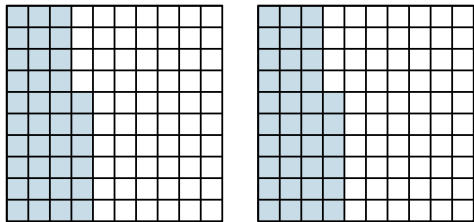
2) $2 \times 0,3 =$



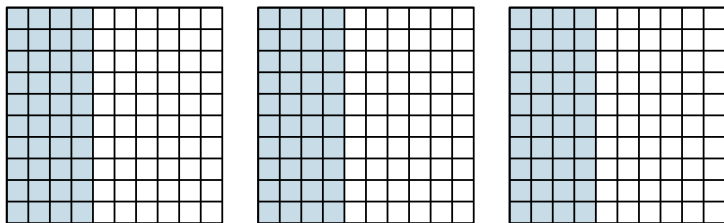
3) $2 \times 0,4 =$



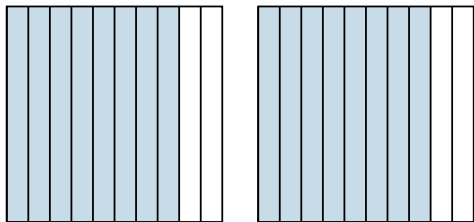
4) $2 \times 0,36 =$



5) $3 \times 0,40 =$



6) $2 \times 0,8 =$



Risposte

1. $\frac{213}{100} = 2,13$

2. $\frac{6}{10} = 0,6$

3. $\frac{8}{10} = 0,8$

4. $\frac{72}{100} = 0,72$

5. $\frac{120}{100} = 1,2$

6. $\frac{16}{10} = 1,6$