


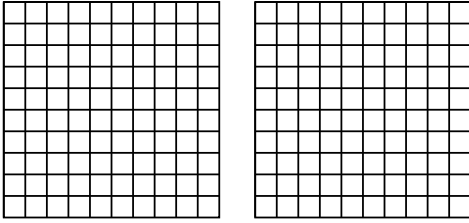


Usa il modello visivo per risolvere ogni problema.

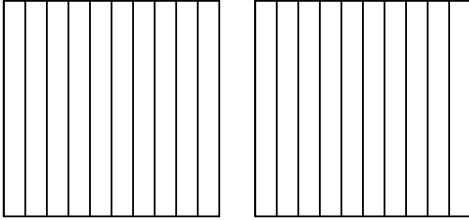
1) $3 \times 0,18 =$



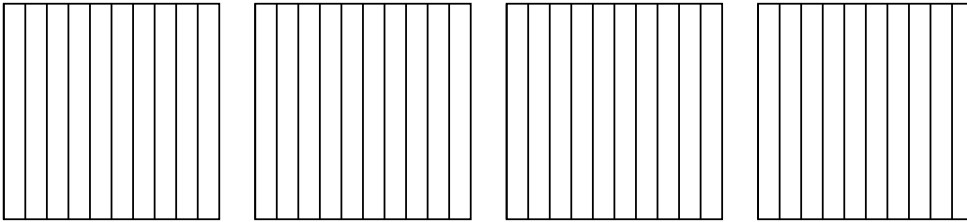
2) $2 \times 0,53 =$



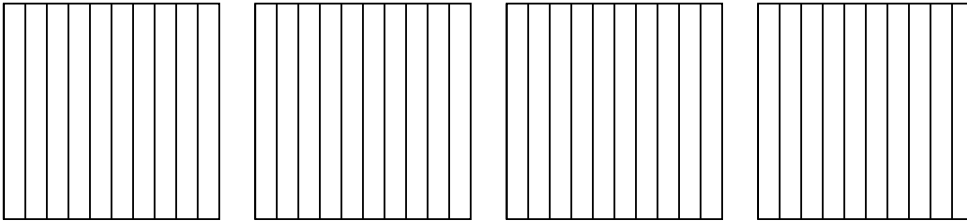
3) $2 \times 0,4 =$



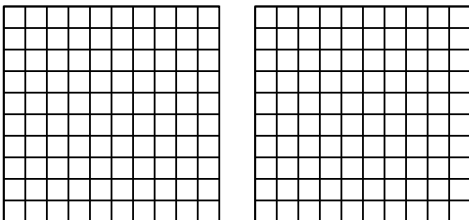
4) $4 \times 0,7 =$



5) $4 \times 0,8 =$



6) $2 \times 0,38 =$



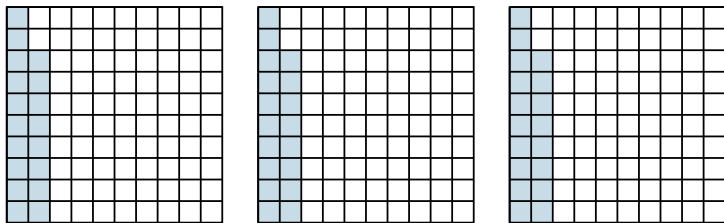
Risposte

- 1. _____
- 2. _____
- 3. _____
- 4. _____
- 5. _____
- 6. _____

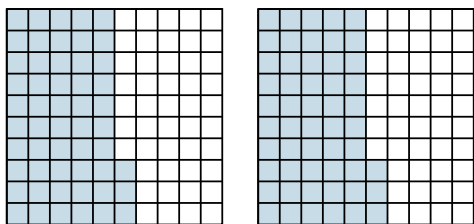


Usa il modello visivo per risolvere ogni problema.

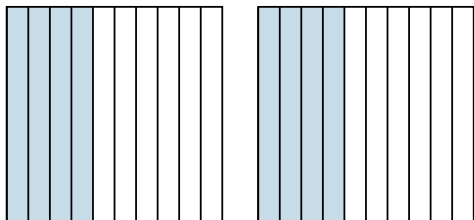
1) $3 \times 0,18 =$



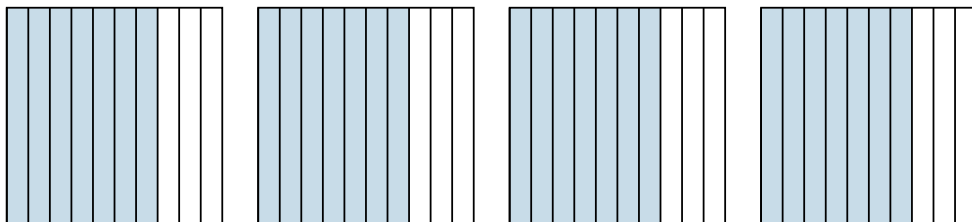
2) $2 \times 0,53 =$



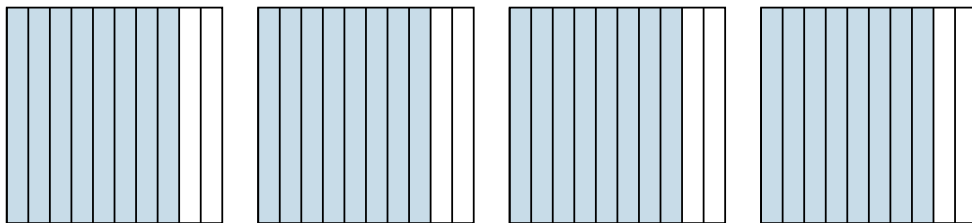
3) $2 \times 0,4 =$



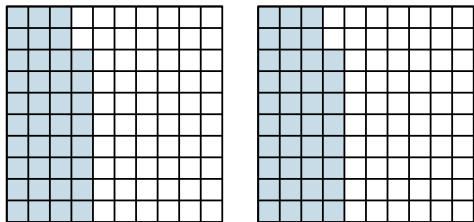
4) $4 \times 0,7 =$



5) $4 \times 0,8 =$



6) $2 \times 0,38 =$



Risposte

1. $\frac{54}{100} = 0,54$

2. $\frac{106}{100} = 1,06$

3. $\frac{8}{10} = 0,8$

4. $\frac{28}{10} = 2,8$

5. $\frac{32}{10} = 3,2$

6. $\frac{76}{100} = 0,76$