



Usa il blocco a sinistra per trovare il valore dell'insieme di blocchi a destra.

**Risposte**

1) = 1

1. \_\_\_\_\_

2) = 1

2. \_\_\_\_\_

3) = 1

3. \_\_\_\_\_

4) = 1

4. \_\_\_\_\_

5) = 1

5. \_\_\_\_\_

6) = 1

6. \_\_\_\_\_

7) = 1

7. \_\_\_\_\_

8) = 1

8. \_\_\_\_\_

9) = 1


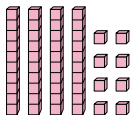
9. \_\_\_\_\_


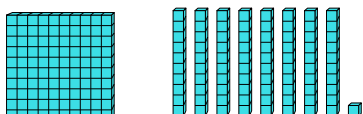
10) = 1


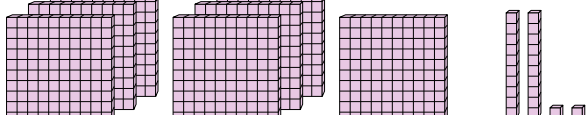
10. \_\_\_\_\_


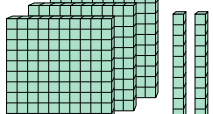


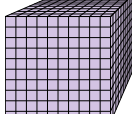
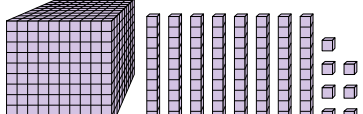
Usa il blocco a sinistra per trovare il valore dell'insieme di blocchi a destra.

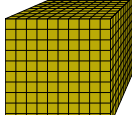

1)  = 1 

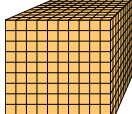
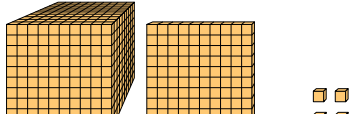
2)  = 1 

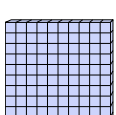
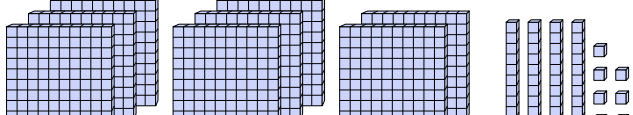
3)  = 1 



4)  = 1 

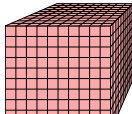
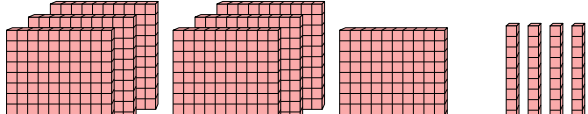
5)  = 1 

6)  = 1 

7)  = 1 

8)  = 1 

9)  = 1 

10)  = 1 

**Risposte**

1. 0,48
2. 1,81
3. 7,22
4. 3,2
5. 1,087
6. 1,16
7. 1,104
8. 8,47
9. 1,93
10. 0,74