



Conta il numero di forme mostrate.

**Risposte**

1) 

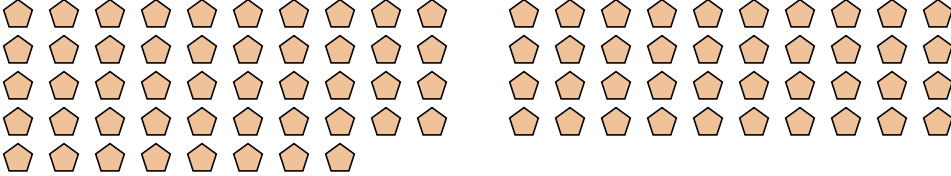
1. \_\_\_\_\_

2. \_\_\_\_\_


3. \_\_\_\_\_

4. \_\_\_\_\_

5. \_\_\_\_\_

2) 


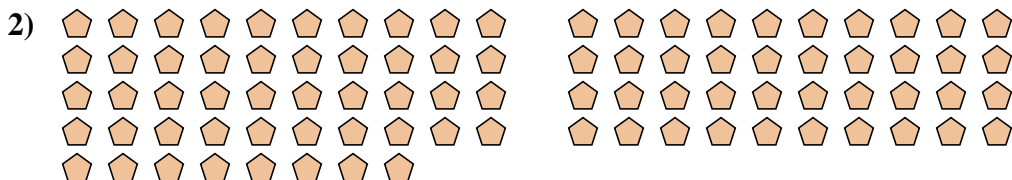
3) 

4) 

5) 



Conta il numero di forme mostrate.



**Risposte**

1. 59

2. 88

3. 28

4. 117

5. 13