



Conta il numero di forme mostrate.

**Risposte**



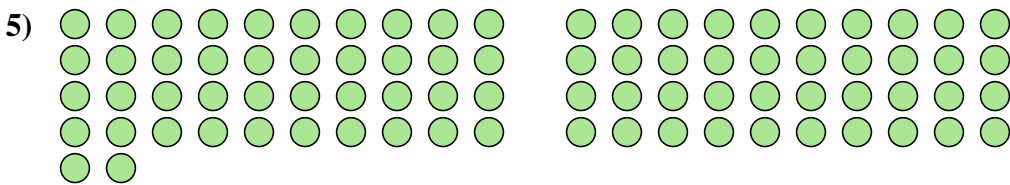
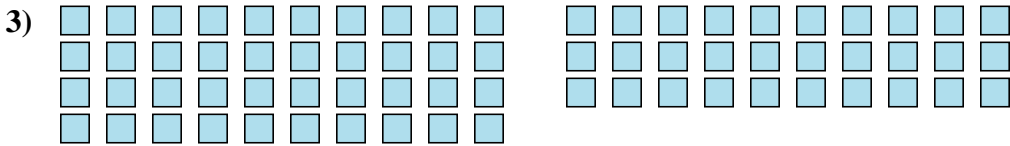
1. \_\_\_\_\_

2. \_\_\_\_\_

3. \_\_\_\_\_

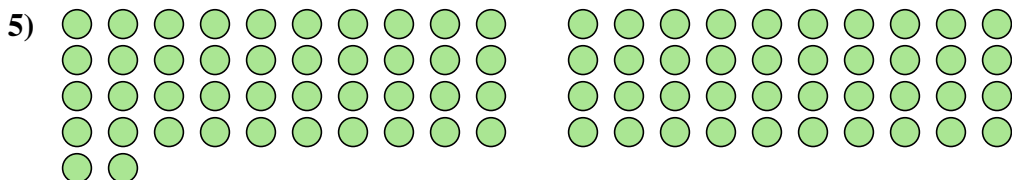
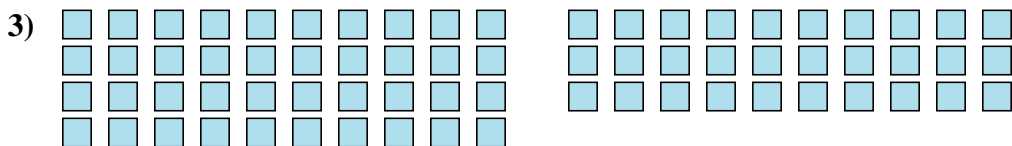
4. \_\_\_\_\_

5. \_\_\_\_\_





Conta il numero di forme mostrate.



**Risposte**

1. 52

2. 7

3. 70

4. 22

5. 82