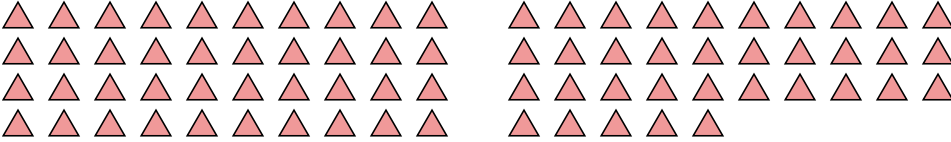




Conta il numero di forme mostrate.

**Risposte**

1) 


1. \_\_\_\_\_

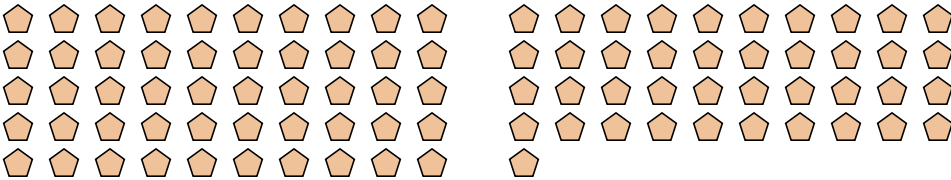
2. \_\_\_\_\_

3. \_\_\_\_\_

4. \_\_\_\_\_

5. \_\_\_\_\_

2) 

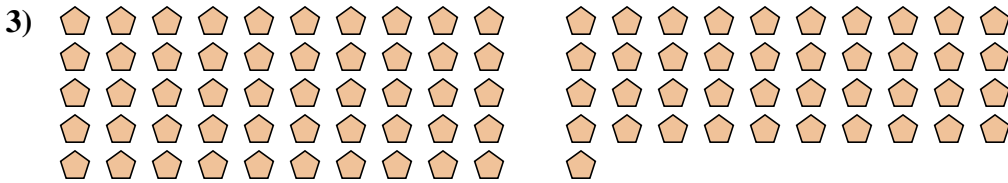
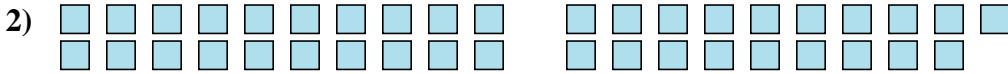
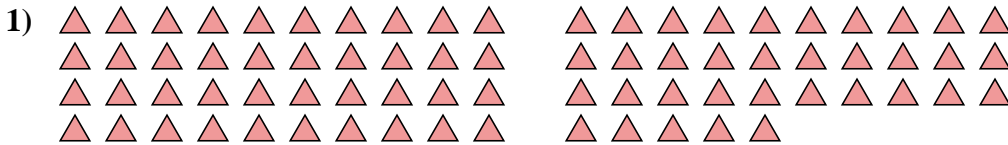
3) 

4) 

5) 



Conta il numero di forme mostrate.



**Risposte**

1. 75

2. 39

3. 91

4. 15

5. 106