

**Determina quale lettera meglio rappresenta il volume.****Milliliter**

Un mililitro equivale a unas 20 gotas de agua.

**Liter**


Muchas botellas grandes de refrescos tienen 1 o 2 litros.

1 Liter = 1,000 Milliliters

**Risposte**

1. _____
2. _____
3. _____
4. _____
5. _____
6. _____
7. _____
8. _____
9. _____

1)



Soda in lattina

- A. 350 litri
- B. 2 millilitri
- C. 350 millilitri
- D. 2 litri


2)



Farina in padella di brownies

- A. 10 millilitri
- B. 0.5 litri
- C. 3 litri
- D. 16 litri


3)



Sabbia tiene una carriola

- A. 500 millilitri
- B. 3 litri
- C. 170 litri
- D. 50 millilitri

4)



Serbatoio di benzina in un'auto

- A. 3 litri
- B. 70 millilitri
- C. 60 litri
- D. 15 millilitri

5)



Sabbia in un secchio

- A. 20 litri
- B. 1 milliliter
- C. 4 litri
- D. 4 millilitri


6)



Colla in una bottiglia

- A. 120 millilitri
- B. 3 millilitri
- C. 5 litri
- D. 2 litri

7)



Acqua in una vaschetta del ghiaccio

- A. 2 millilitri
- B. 0.5 litri
- C. 50 millilitri

8)



Misurino

- A. 237 millilitri
- B. 237 litri
- C. 50 millilitri
- D. 1 litri

9)



Shampoo in bottiglia

- A. 1 milliliter
- B. 1.5 litri
- C. 20 litri
- D. 20 millilitri



Determina quale lettera meglio rappresenta il volume.

Milliliter

Un mililitro equivale a unas 20 gotas de agua.


**Liter**

Muchas botellas grandes de refrescos tienen 1 o 2 litros.

1 Liter = 1,000 Milliliters

**Risposte**1. **C**2. **B**3. **C**4. **C**5. **C**6. **A**7. **B**8. **A**9. **B**

1)



Soda in lattina

- A. 350 litri
- B. 2 millilitri
- C. 350 millilitri
- D. 2 litri


2)



Farina in padella di brownies

- A. 10 millilitri
- B. 0.5 litri
- C. 3 litri
- D. 16 litri


3)



Sabbia tiene una carriola

- A. 500 millilitri
- B. 3 litri
- C. 170 litri
- D. 50 millilitri

4)



Serbatoio di benzina in un'auto

- A. 3 litri
- B. 70 millilitri
- C. 60 litri
- D. 15 millilitri

5)



Sabbia in un secchio

- A. 20 litri
- B. 1 milliliter
- C. 4 litri
- D. 4 millilitri


6)



Colla in una bottiglia

- A. 120 millilitri
- B. 3 millilitri
- C. 5 litri
- D. 2 litri

7)



Acqua in una vaschetta del ghiaccio

- A. 2 millilitri
- B. 0.5 litri
- C. 50 millilitri

8)



Misurino

- A. 237 millilitri
- B. 237 litri
- C. 50 millilitri
- D. 1 litri

9)



Shampoo in bottiglia

- A. 1 milliliter
- B. 1.5 litri
- C. 20 litri
- D. 20 millilitri