

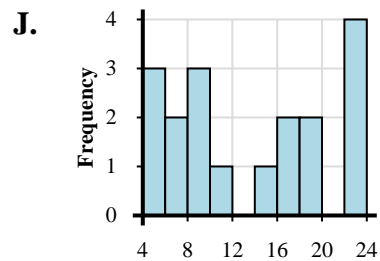
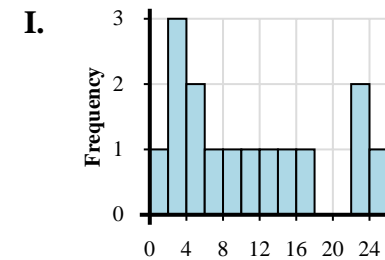
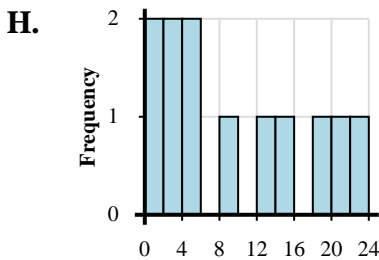
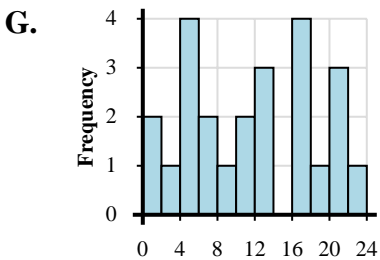
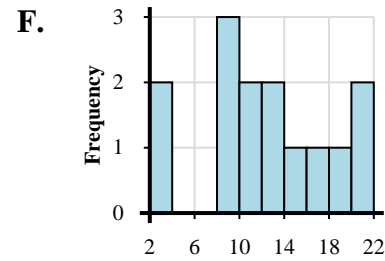
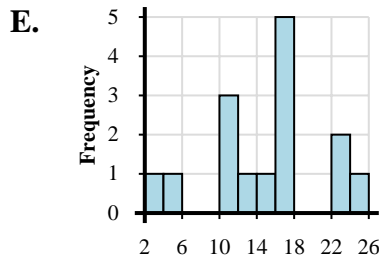
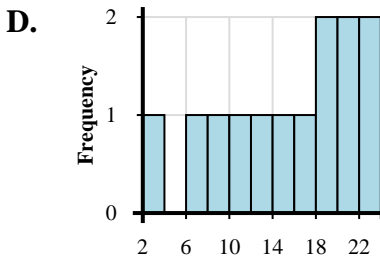
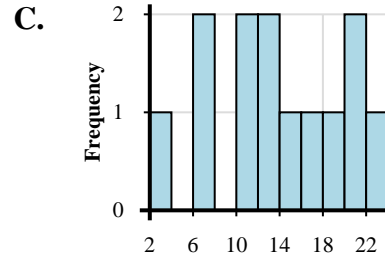
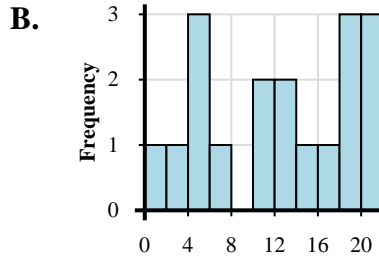
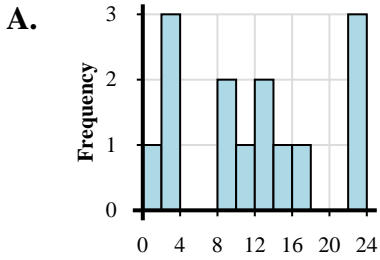


Abbina ogni set di dati al relativo istogramma.

Risposte

- 1) 1, 3, 4, 1, 4, 7, 8, 5, 5, 7, 13, 13, 11, 12, 10, 16, 17, 18, 16, 16, 21, 22, 20, 20
- 2) 2, 4, 1, 5, 5, 6, 10, 12, 14, 12, 11, 19, 19, 18, 17, 21, 20, 20
- 3) 4, 1, 2, 2, 2, 7, 5, 9, 10, 14, 12, 17, 24, 23, 22
- 4) 1, 4, 1, 3, 3, 5, 9, 13, 14, 19, 23, 20
- 5) 2, 7, 6, 13, 11, 13, 10, 15, 16, 18, 21, 23, 20
- 6) 3, 3, 8, 9, 9, 11, 14, 10, 13, 12, 18, 17, 20, 21
- 7) 3, 5, 11, 11, 12, 11, 14, 16, 16, 17, 17, 16, 23, 24, 23
- 8) 2, 8, 6, 13, 10, 18, 17, 19, 15, 23, 21, 23, 21
- 9) 2, 1, 2, 2, 9, 8, 13, 13, 10, 15, 17, 22, 23, 22
- 10) 4, 4, 4, 9, 9, 6, 9, 6, 10, 15, 17, 19, 16, 18, 22, 23, 22, 23

1. _____
2. _____
3. _____
4. _____
5. _____
6. _____
7. _____
8. _____
9. _____
10. _____





Abbina ogni set di dati al relativo istogramma.

- 1) 1, 3, 4, 1, 4, 7, 8, 5, 5, 7, 13, 13, 11, 12, 10, 16, 17, 18, 16, 16, 21, 22, 20, 20
- 2) 2, 4, 1, 5, 5, 6, 10, 12, 14, 12, 11, 19, 19, 18, 17, 21, 20, 20
- 3) 4, 1, 2, 2, 2, 7, 5, 9, 10, 14, 12, 17, 24, 23, 22
- 4) 1, 4, 1, 3, 3, 5, 9, 13, 14, 19, 23, 20
- 5) 2, 7, 6, 13, 11, 13, 10, 15, 16, 18, 21, 23, 20
- 6) 3, 3, 8, 9, 9, 11, 14, 10, 13, 12, 18, 17, 20, 21
- 7) 3, 5, 11, 11, 12, 11, 14, 16, 16, 17, 17, 16, 23, 24, 23
- 8) 2, 8, 6, 13, 10, 18, 17, 19, 15, 23, 21, 23, 21
- 9) 2, 1, 2, 2, 9, 8, 13, 13, 10, 15, 17, 22, 23, 22
- 10) 4, 4, 4, 9, 9, 6, 9, 6, 10, 15, 17, 19, 16, 18, 22, 23, 22, 23

Risposte

1. **G**
2. **B**
3. **I**
4. **H**
5. **C**
6. **F**
7. **E**
8. **D**
9. **A**
10. **J**

