

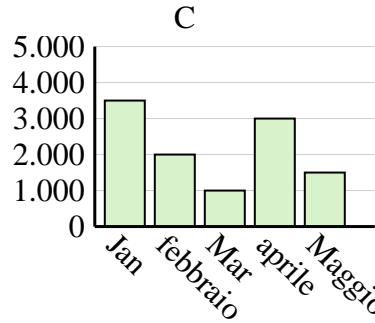
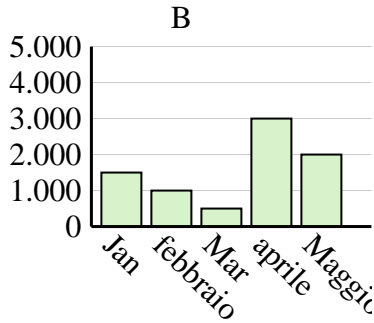
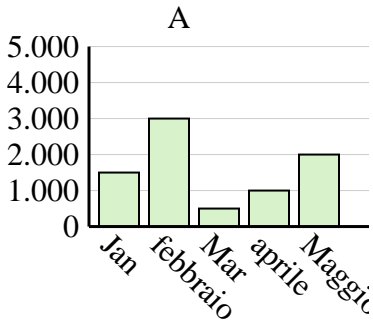


Determina quale grafico (A, B o C) rappresenta meglio le informazioni date nella tabella

**Risposte**

1)

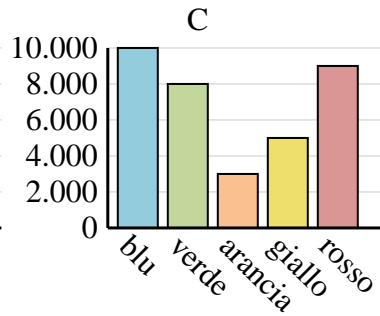
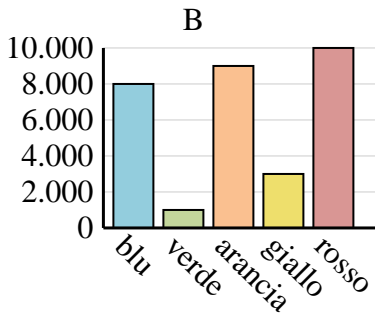
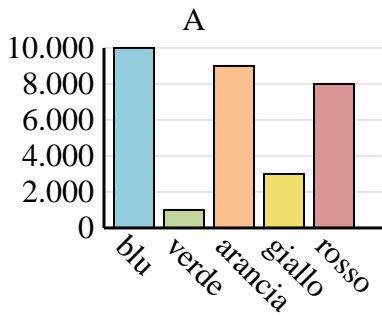
Saldi	Jan	febbraio	Mar	aprile	Maggio
Mese	3.500	2.000	1.000	3.000	1.500



1. \_\_\_\_\_
2. \_\_\_\_\_
3. \_\_\_\_\_
4. \_\_\_\_\_

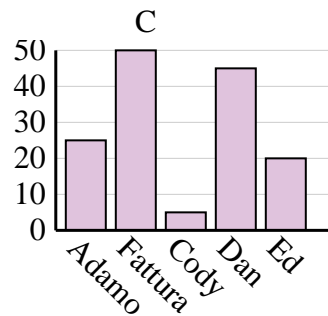
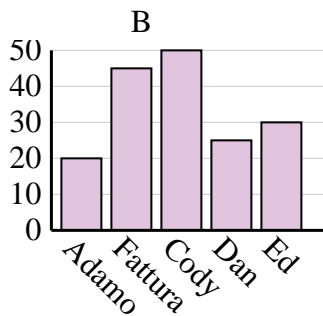
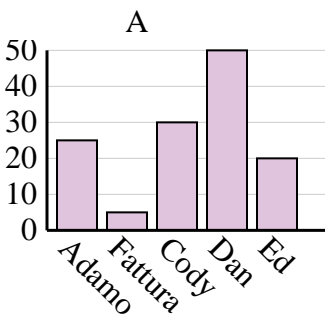
2)

Colore preferito	blu	verde	arancia	giallo	rosso
Le persone	10.000	1.000	9.000	3.000	8.000



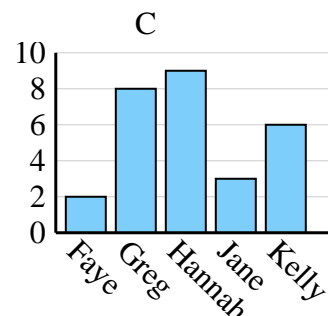
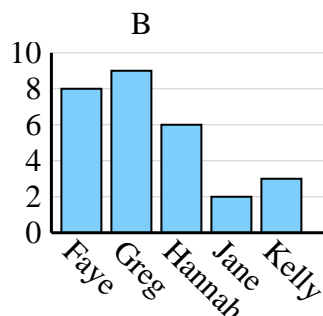
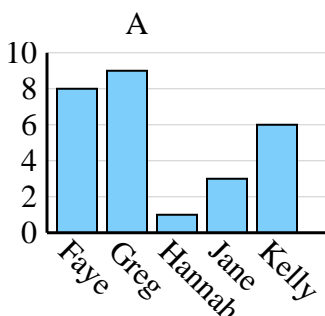
3)

Nome	Adamo	Fattura	Cody	Dan	Ed
Punti	25	5	30	50	20



4)

Nome	Faye	Greg	Hannah	Jane	Kelly
Stati in cui vivevano	8	9	1	3	6



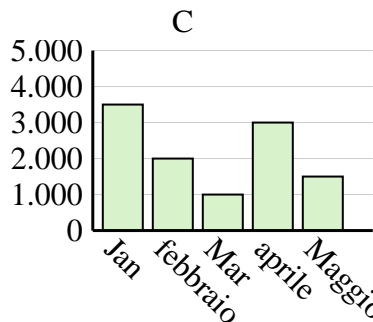
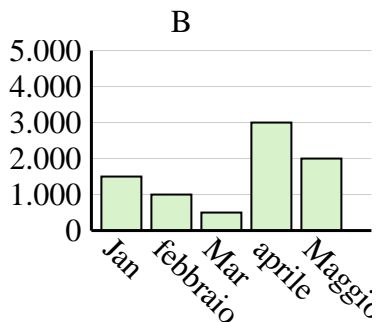
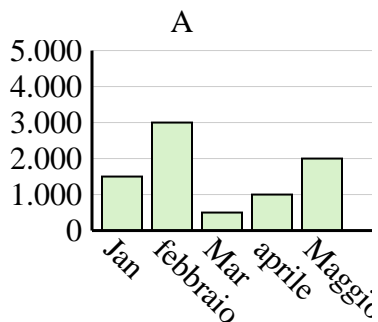


Determina quale grafico (A, B o C) rappresenta meglio le informazioni date nella tabella

Risposte

1)

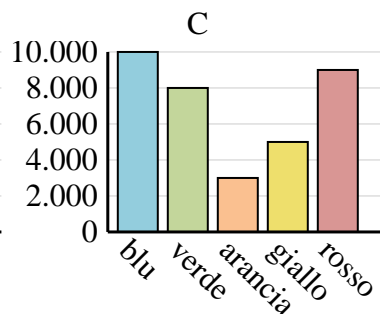
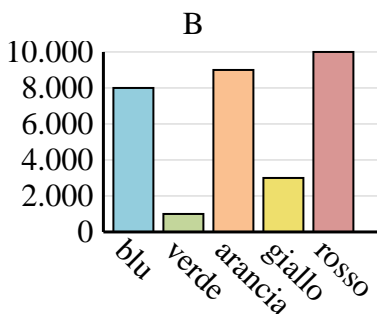
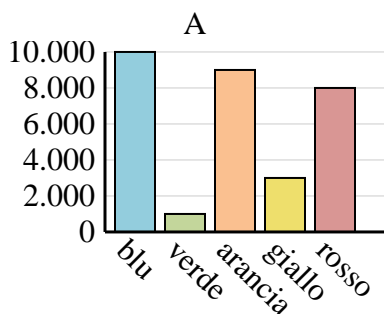
Saldi	Jan	febbraio	Mar	aprile	Maggio
Mese	3.500	2.000	1.000	3.000	1.500



1.            **C**
2.            **A**
3.            **A**
4.            **A**

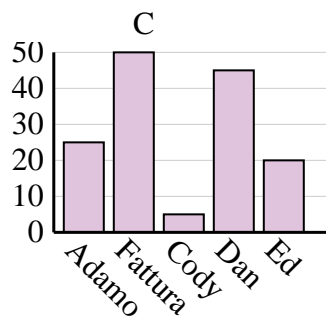
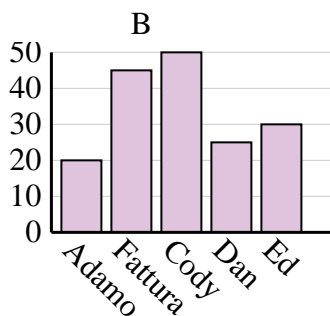
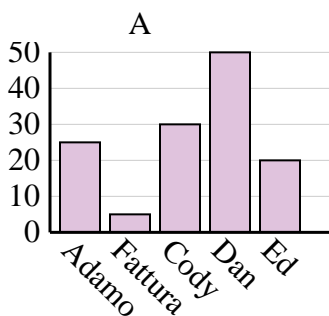
2)

Colore preferito	blu	verde	arancia	giallo	rosso
Le persone	10.000	1.000	9.000	3.000	8.000



3)

Nome	Adamo	Fattura	Cody	Dan	Ed
Punti	25	5	30	50	20



4)

Nome	Faye	Greg	Hannah	Jane	Kelly
Stati in cui vivevano	8	9	1	3	6

