

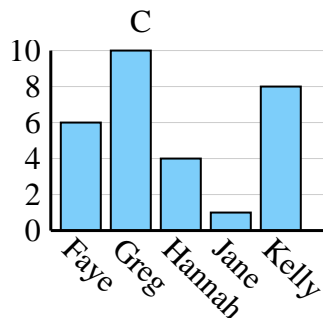
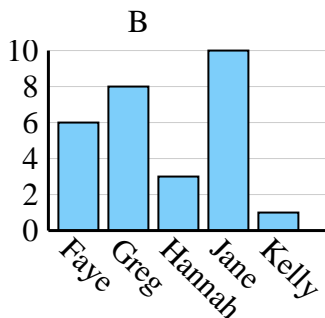
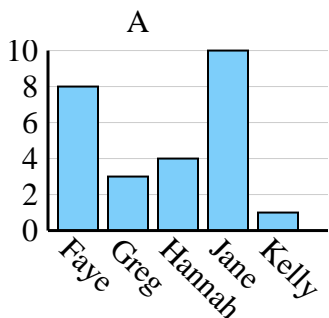


Determina quale grafico (A, B o C) rappresenta meglio le informazioni date nella tabella

**Risposte**

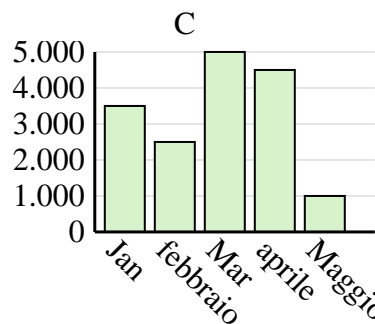
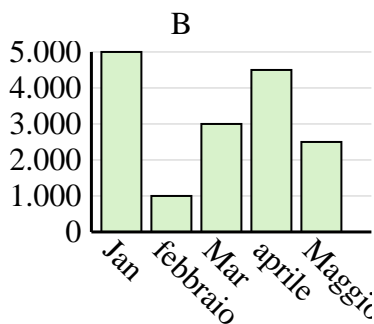
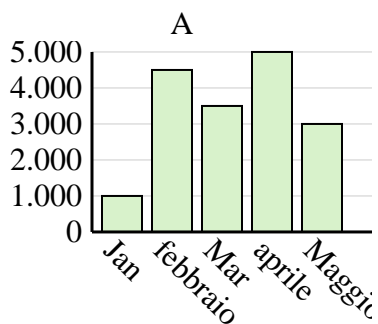
1)

Nome	Faye	Greg	Hannah	Jane	Kelly
Stati in cui vivevano	6	10	4	1	8



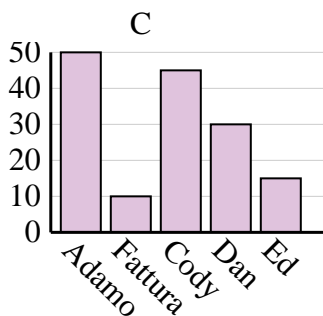
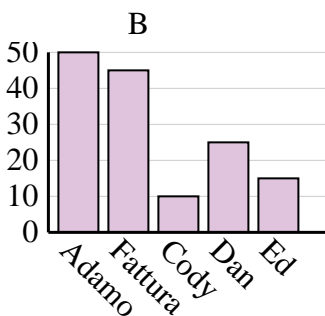
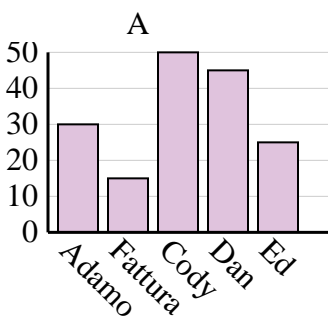
2)

Saldi	Jan	febbraio	Mar	aprile	Maggio
Mese	3.500	2.500	5.000	4.500	1.000



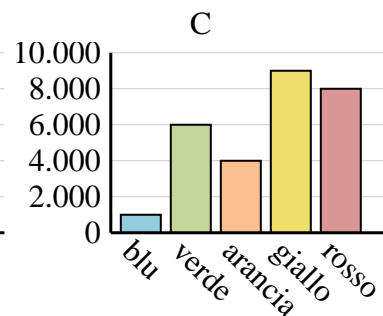
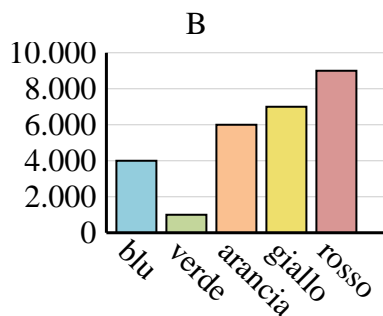
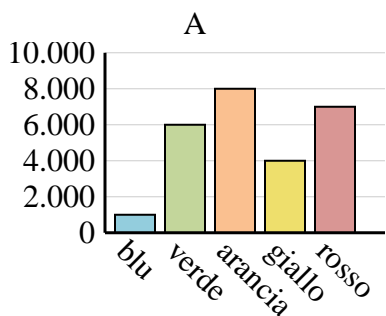
3)

Nome	Adamo	Fattura	Cody	Dan	Ed
Punti	30	15	50	45	25



4)

Colore preferito	blu	verde	arancia	giallo	rosso
Le persone	4.000	1.000	6.000	7.000	9.000



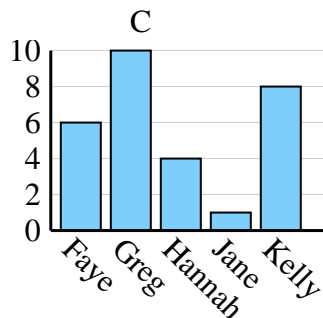
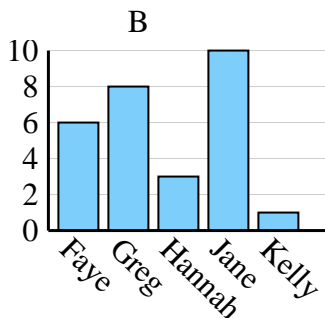
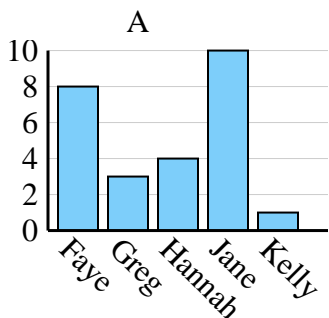
1. \_\_\_\_\_
2. \_\_\_\_\_
3. \_\_\_\_\_
4. \_\_\_\_\_



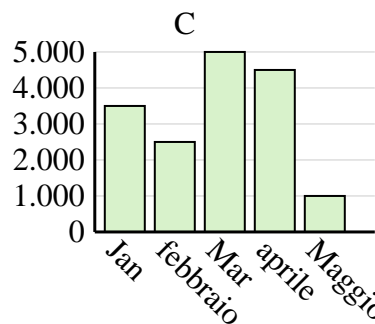
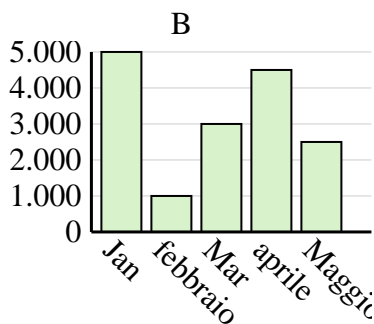
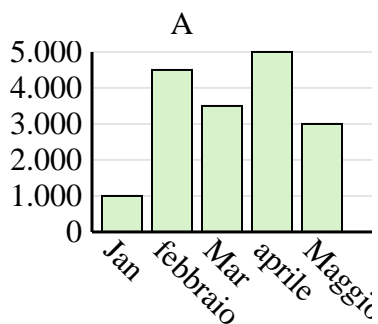
Determina quale grafico (A, B o C) rappresenta meglio le informazioni date nella tabella

Risposte

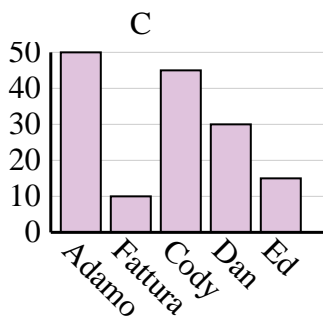
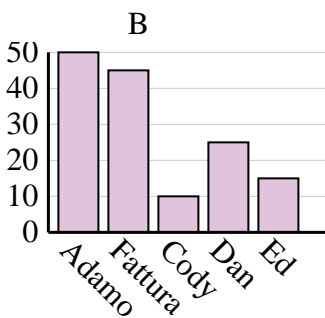
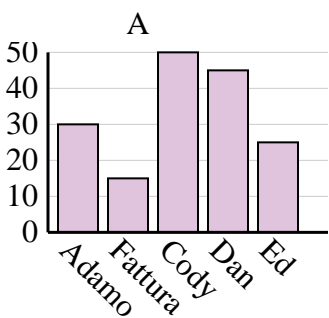
Nome	Faye	Greg	Hannah	Jane	Kelly
Stati in cui vivevano	6	10	4	1	8



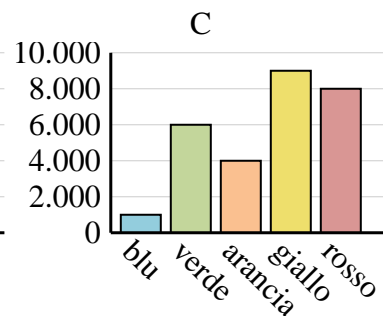
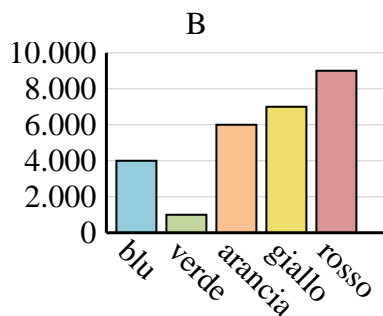
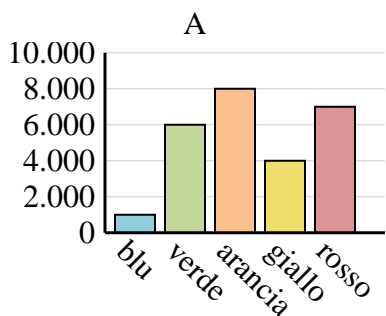
Saldi	Jan	febbraio	Mar	aprile	Maggio
Mese	3.500	2.500	5.000	4.500	1.000



Nome	Adamo	Fattura	Cody	Dan	Ed
Punti	30	15	50	45	25



Colore preferito	blu	verde	arancia	giallo	rosso
Le persone	4.000	1.000	6.000	7.000	9.000



1. **C**
2. **C**
3. **A**
4. **B**